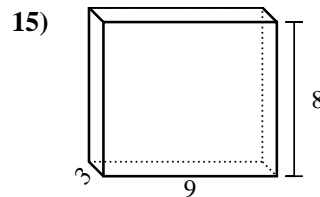
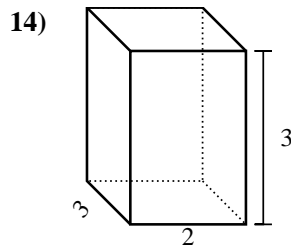
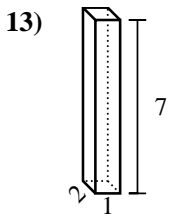
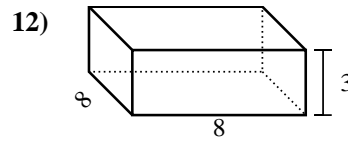
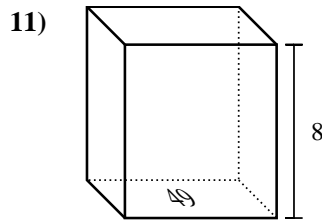
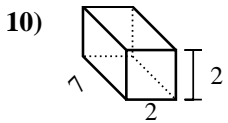
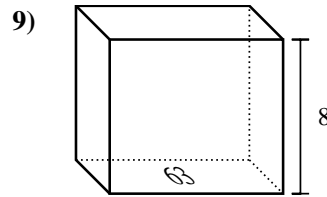
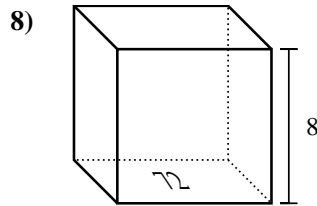
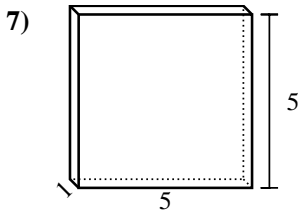
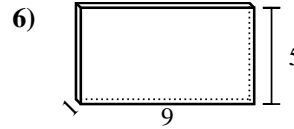
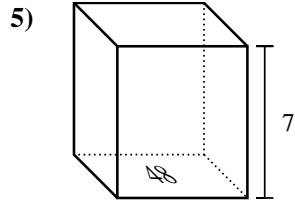
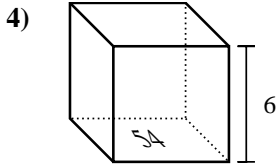
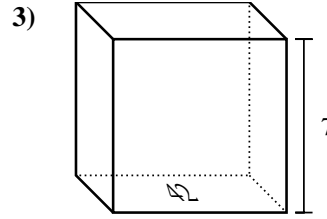
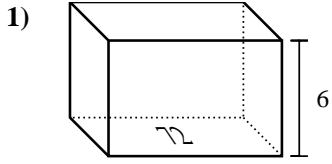




Find the volume of each rectangular prism. Units are in cm (not to scale). Remember  $V = BH$  and  $V = L \times W \times H$

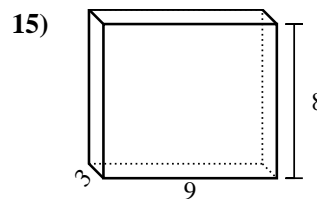
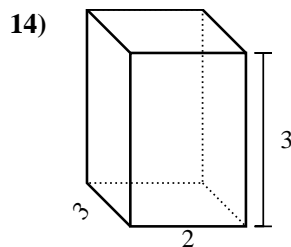
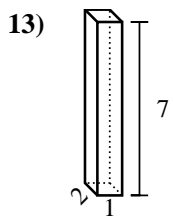
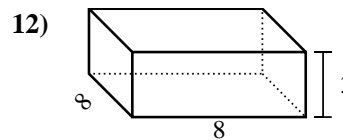
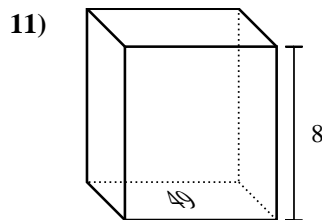
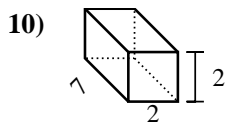
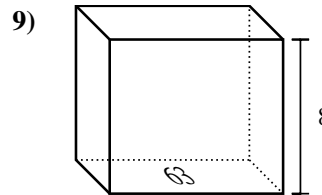
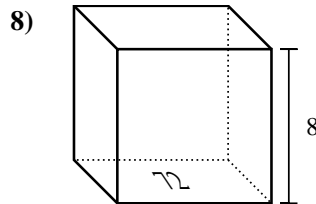
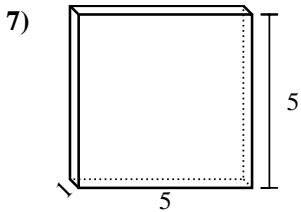
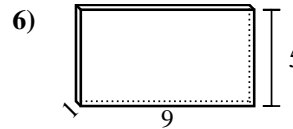
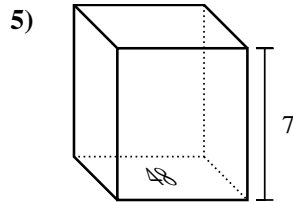
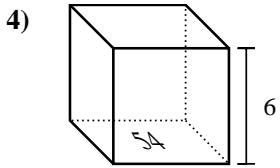
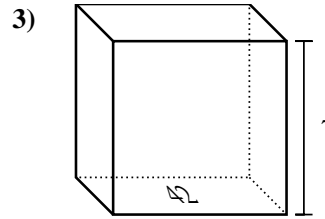
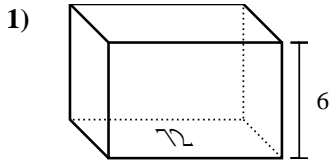
Answers



1. \_\_\_\_\_
2. \_\_\_\_\_
3. \_\_\_\_\_
4. \_\_\_\_\_
5. \_\_\_\_\_
6. \_\_\_\_\_
7. \_\_\_\_\_
8. \_\_\_\_\_
9. \_\_\_\_\_
10. \_\_\_\_\_
11. \_\_\_\_\_
12. \_\_\_\_\_
13. \_\_\_\_\_
14. \_\_\_\_\_
15. \_\_\_\_\_



Find the volume of each rectangular prism. Units are in cm (not to scale). Remember  $V = BH$  and  $V = L \times W \times H$

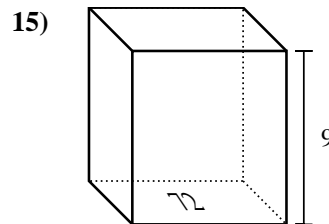
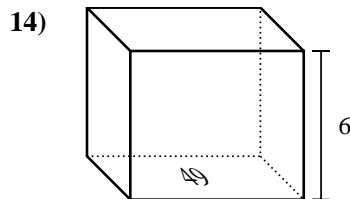
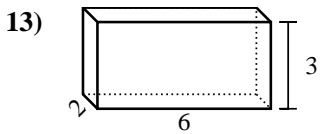
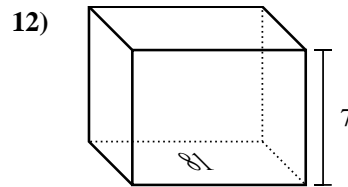
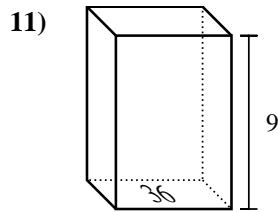
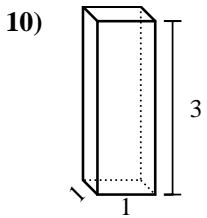
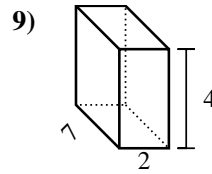
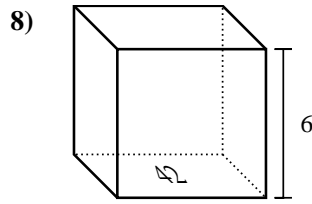
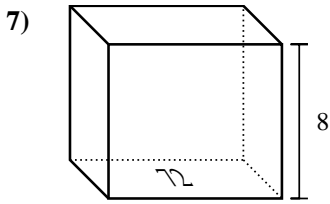
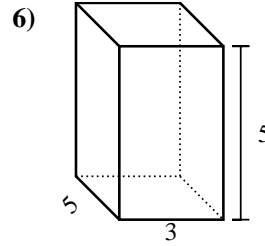
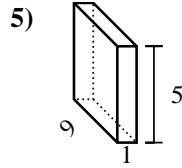
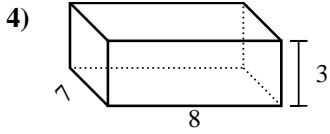
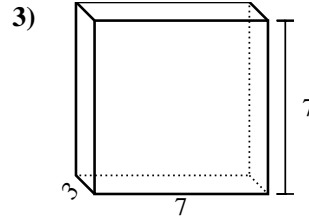
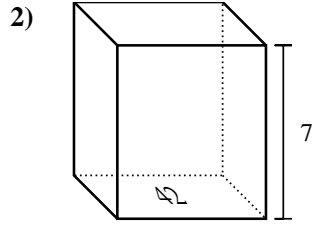
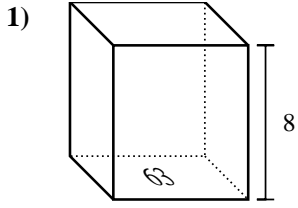


Answers

1. 432 cm<sup>3</sup>
2. 441 cm<sup>3</sup>
3. 294 cm<sup>3</sup>
4. 324 cm<sup>3</sup>
5. 336 cm<sup>3</sup>
6. 45 cm<sup>3</sup>
7. 25 cm<sup>3</sup>
8. 576 cm<sup>3</sup>
9. 504 cm<sup>3</sup>
10. 28 cm<sup>3</sup>
11. 392 cm<sup>3</sup>
12. 192 cm<sup>3</sup>
13. 14 cm<sup>3</sup>
14. 18 cm<sup>3</sup>
15. 216 cm<sup>3</sup>



Find the volume of each rectangular prism. Units are in cm (not to scale). Remember  $V = BH$  and  $V = L \times W \times H$

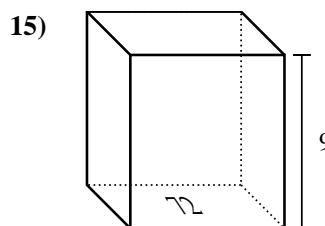
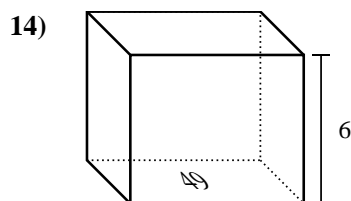
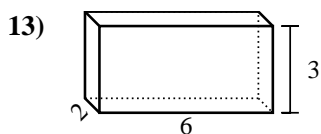
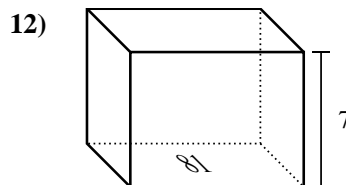
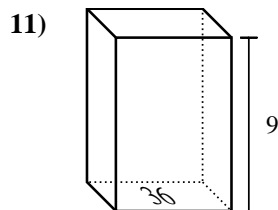
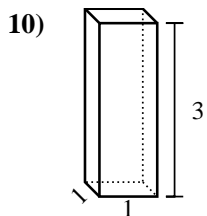
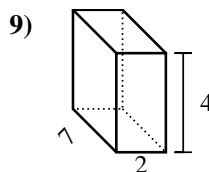
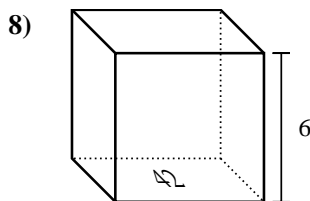
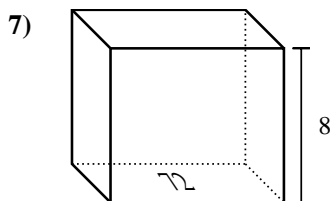
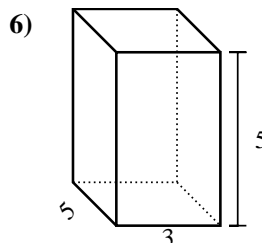
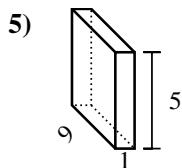
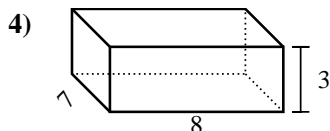
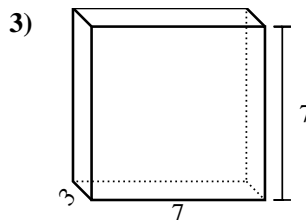
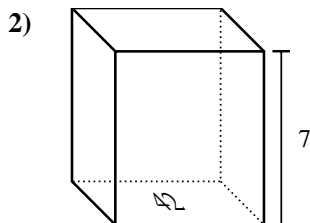
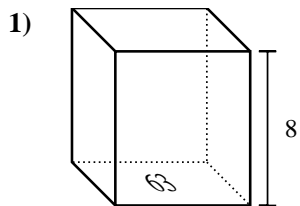


Answers

1. \_\_\_\_\_
2. \_\_\_\_\_
3. \_\_\_\_\_
4. \_\_\_\_\_
5. \_\_\_\_\_
6. \_\_\_\_\_
7. \_\_\_\_\_
8. \_\_\_\_\_
9. \_\_\_\_\_
10. \_\_\_\_\_
11. \_\_\_\_\_
12. \_\_\_\_\_
13. \_\_\_\_\_
14. \_\_\_\_\_
15. \_\_\_\_\_



Find the volume of each rectangular prism. Units are in cm (not to scale). Remember  $V = BH$  and  $V = L \times W \times H$



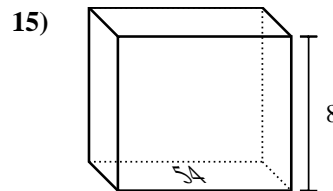
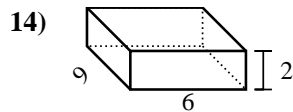
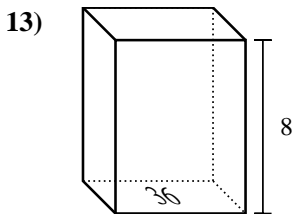
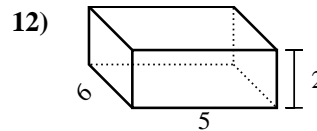
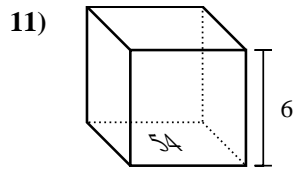
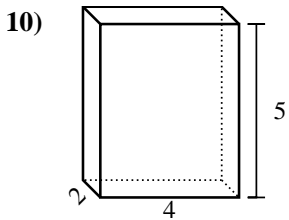
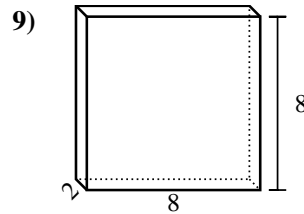
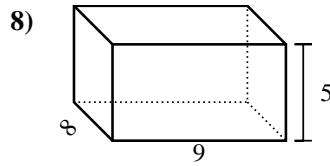
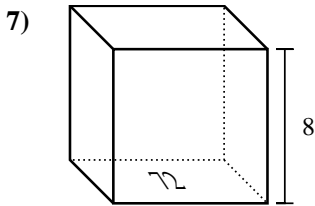
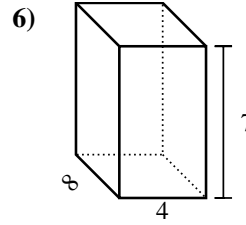
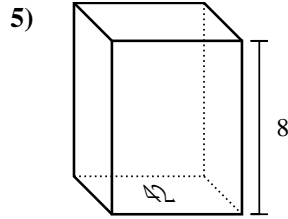
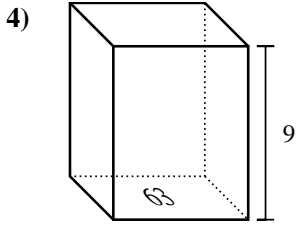
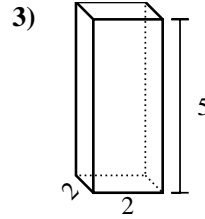
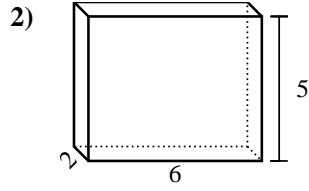
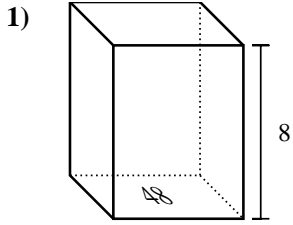
Answers

1. 504 cm<sup>3</sup>
2. 294 cm<sup>3</sup>
3. 147 cm<sup>3</sup>
4. 168 cm<sup>3</sup>
5. 45 cm<sup>3</sup>
6. 75 cm<sup>3</sup>
7. 576 cm<sup>3</sup>
8. 252 cm<sup>3</sup>
9. 56 cm<sup>3</sup>
10. 3 cm<sup>3</sup>
11. 324 cm<sup>3</sup>
12. 567 cm<sup>3</sup>
13. 36 cm<sup>3</sup>
14. 294 cm<sup>3</sup>
15. 648 cm<sup>3</sup>



Find the volume of each rectangular prism. Units are in cm (not to scale). Remember  $V = BH$  and  $V = L \times W \times H$

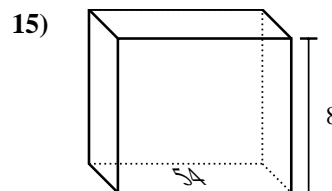
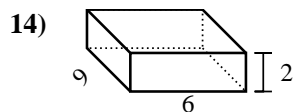
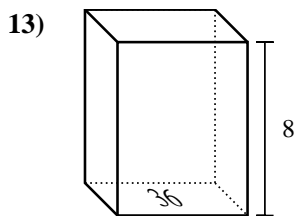
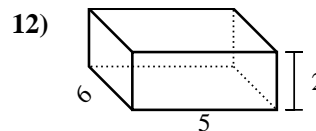
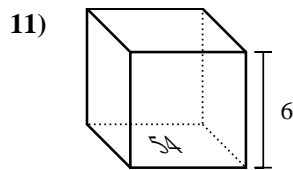
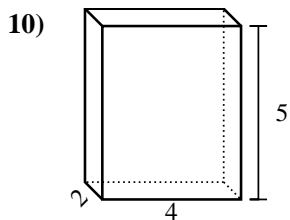
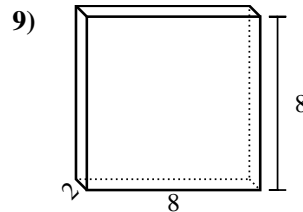
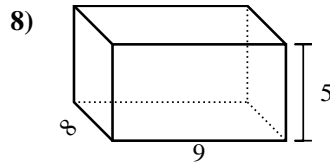
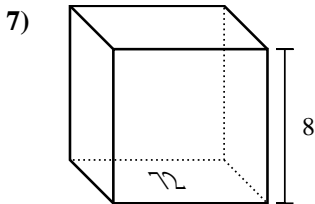
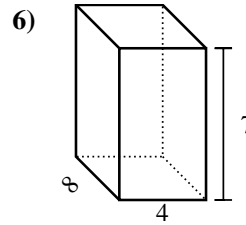
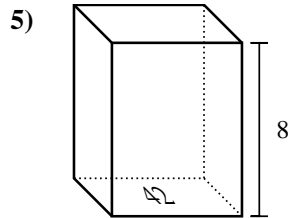
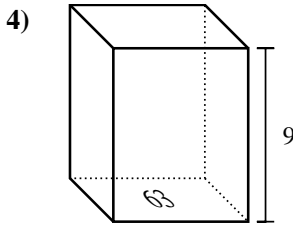
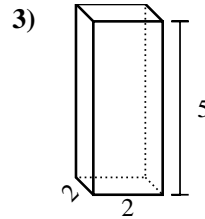
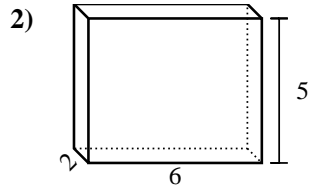
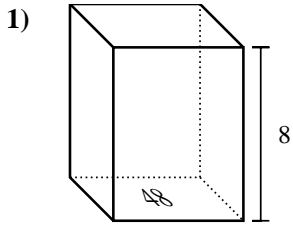
Answers



1. \_\_\_\_\_
2. \_\_\_\_\_
3. \_\_\_\_\_
4. \_\_\_\_\_
5. \_\_\_\_\_
6. \_\_\_\_\_
7. \_\_\_\_\_
8. \_\_\_\_\_
9. \_\_\_\_\_
10. \_\_\_\_\_
11. \_\_\_\_\_
12. \_\_\_\_\_
13. \_\_\_\_\_
14. \_\_\_\_\_
15. \_\_\_\_\_



Find the volume of each rectangular prism. Units are in cm (not to scale). Remember  $V = BH$  and  $V = L \times W \times H$



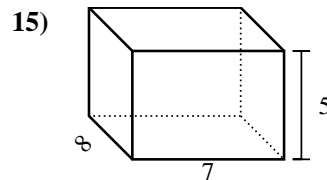
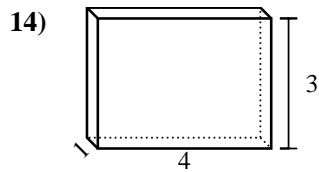
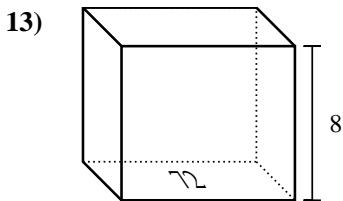
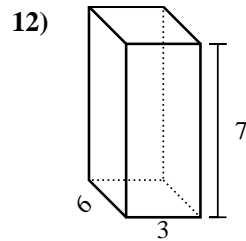
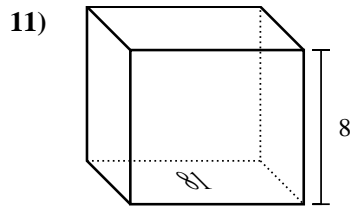
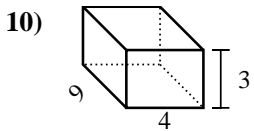
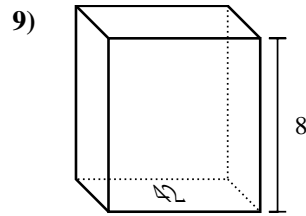
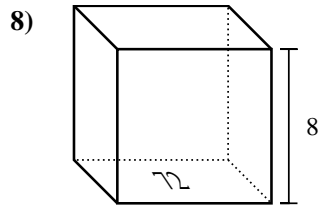
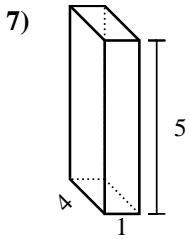
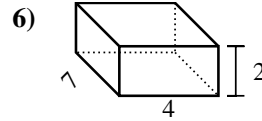
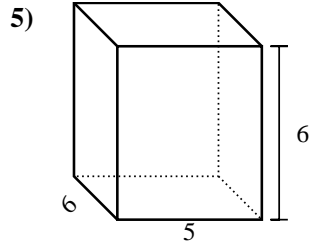
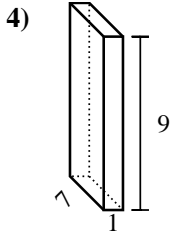
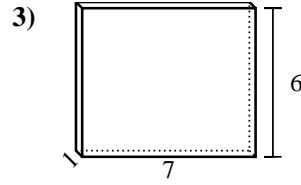
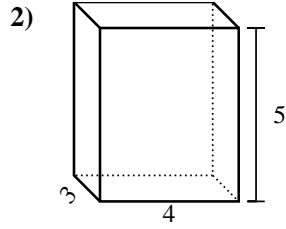
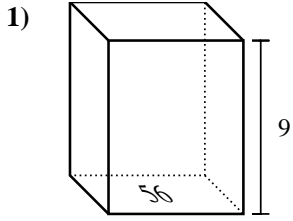
Answers

1. 384 cm<sup>3</sup>
2. 60 cm<sup>3</sup>
3. 20 cm<sup>3</sup>
4. 567 cm<sup>3</sup>
5. 336 cm<sup>3</sup>
6. 224 cm<sup>3</sup>
7. 576 cm<sup>3</sup>
8. 360 cm<sup>3</sup>
9. 128 cm<sup>3</sup>
10. 40 cm<sup>3</sup>
11. 324 cm<sup>3</sup>
12. 60 cm<sup>3</sup>
13. 288 cm<sup>3</sup>
14. 108 cm<sup>3</sup>
15. 432 cm<sup>3</sup>



Find the volume of each rectangular prism. Units are in cm (not to scale). Remember  $V = BH$  and  $V = L \times W \times H$

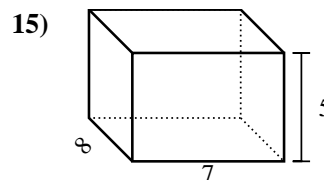
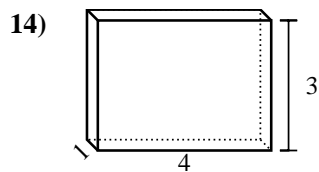
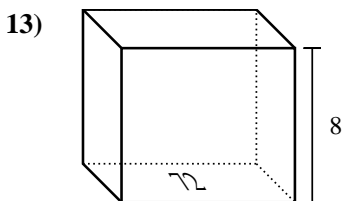
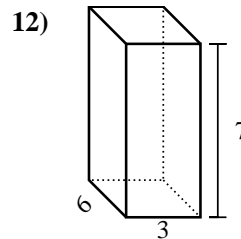
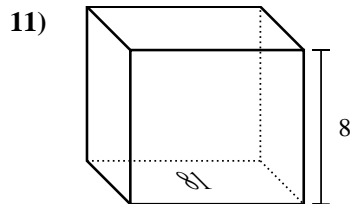
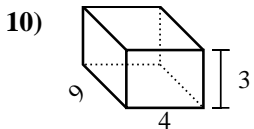
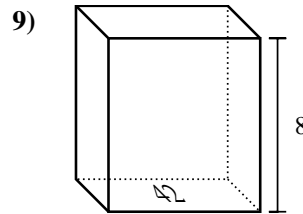
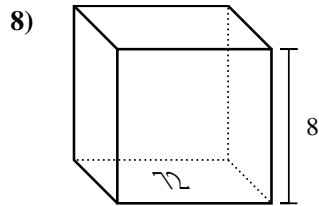
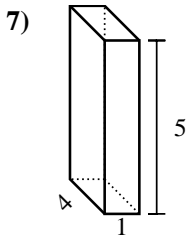
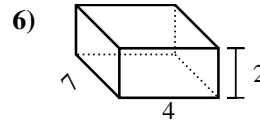
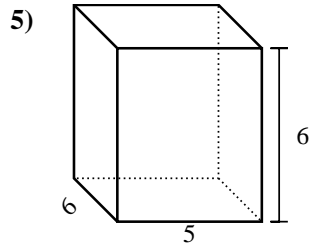
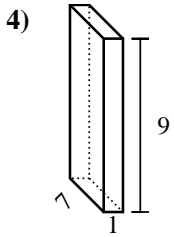
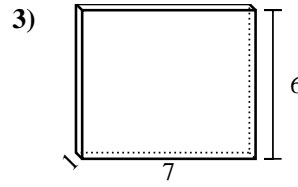
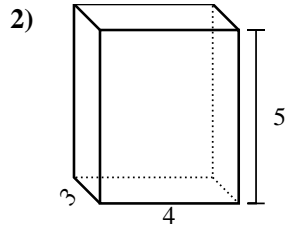
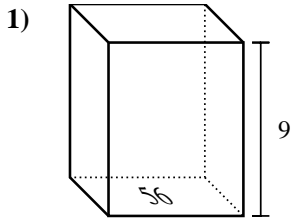
Answers



1. \_\_\_\_\_
2. \_\_\_\_\_
3. \_\_\_\_\_
4. \_\_\_\_\_
5. \_\_\_\_\_
6. \_\_\_\_\_
7. \_\_\_\_\_
8. \_\_\_\_\_
9. \_\_\_\_\_
10. \_\_\_\_\_
11. \_\_\_\_\_
12. \_\_\_\_\_
13. \_\_\_\_\_
14. \_\_\_\_\_
15. \_\_\_\_\_



Find the volume of each rectangular prism. Units are in cm (not to scale). Remember  $V = BH$  and  $V = L \times W \times H$



Answers

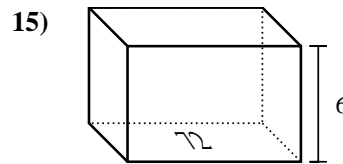
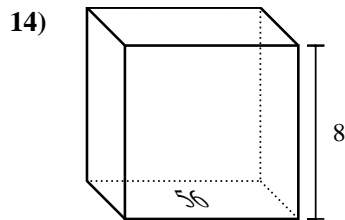
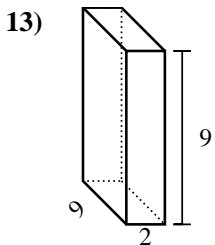
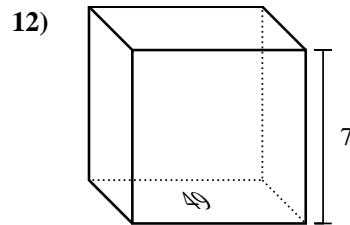
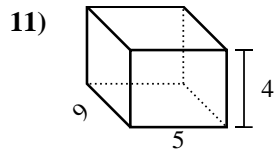
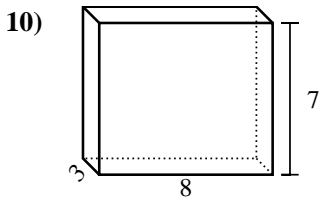
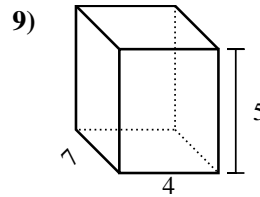
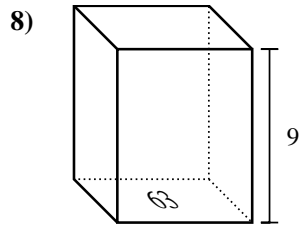
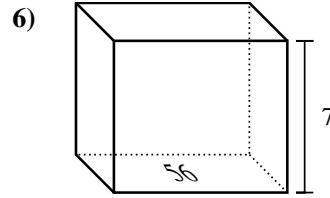
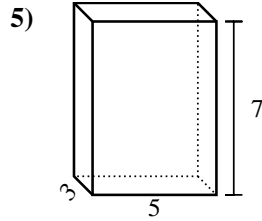
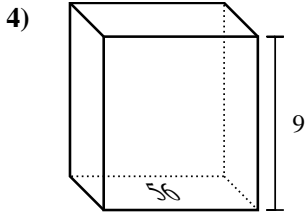
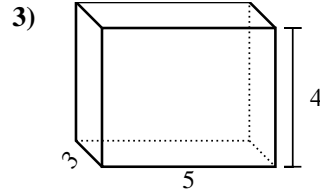
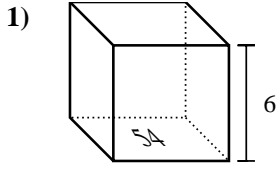
1. 504 cm<sup>3</sup>
2. 60 cm<sup>3</sup>
3. 42 cm<sup>3</sup>
4. 63 cm<sup>3</sup>
5. 180 cm<sup>3</sup>
6. 56 cm<sup>3</sup>
7. 20 cm<sup>3</sup>
8. 576 cm<sup>3</sup>
9. 336 cm<sup>3</sup>
10. 108 cm<sup>3</sup>
11. 648 cm<sup>3</sup>
12. 126 cm<sup>3</sup>
13. 576 cm<sup>3</sup>
14. 12 cm<sup>3</sup>
15. 280 cm<sup>3</sup>





Find the volume of each rectangular prism. Units are in cm (not to scale). Remember  $V = BH$  and  $V = L \times W \times H$

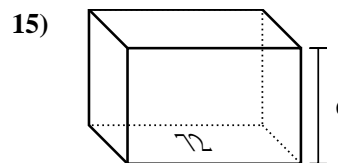
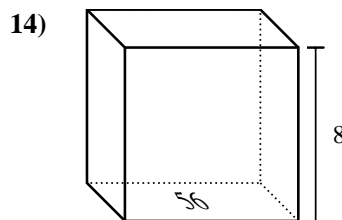
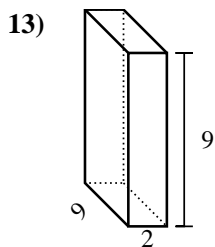
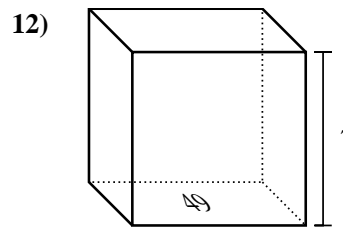
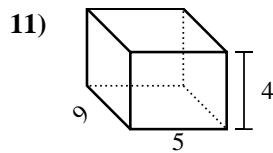
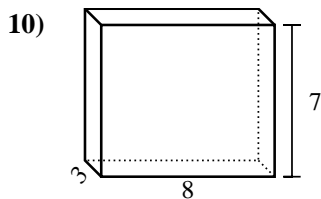
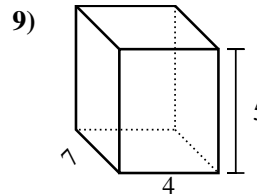
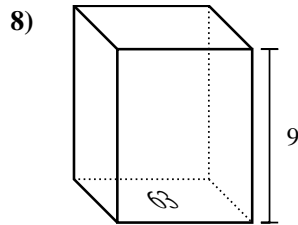
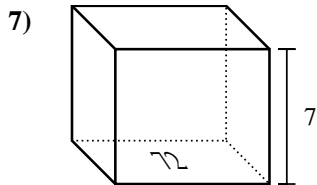
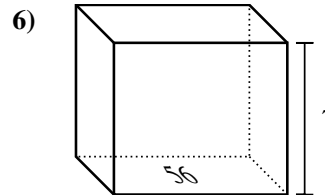
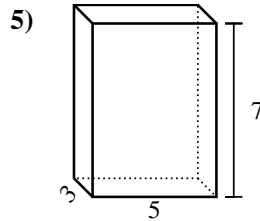
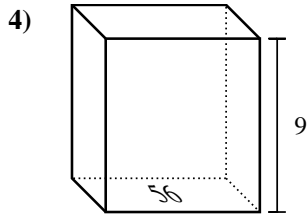
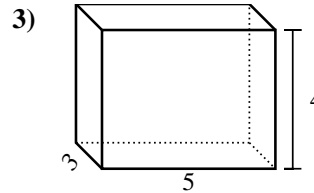
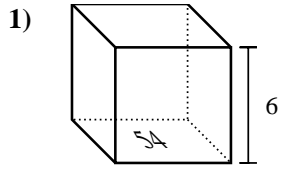
Answers



1. \_\_\_\_\_
2. \_\_\_\_\_
3. \_\_\_\_\_
4. \_\_\_\_\_
5. \_\_\_\_\_
6. \_\_\_\_\_
7. \_\_\_\_\_
8. \_\_\_\_\_
9. \_\_\_\_\_
10. \_\_\_\_\_
11. \_\_\_\_\_
12. \_\_\_\_\_
13. \_\_\_\_\_
14. \_\_\_\_\_
15. \_\_\_\_\_



Find the volume of each rectangular prism. Units are in cm (not to scale). Remember  $V = BH$  and  $V = L \times W \times H$



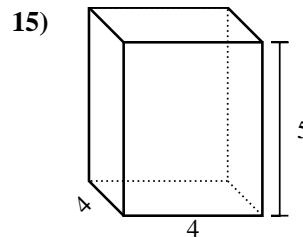
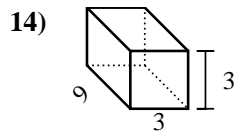
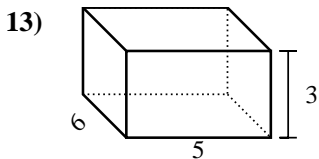
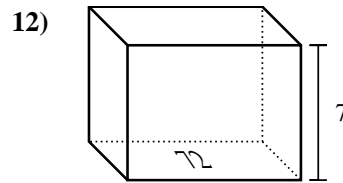
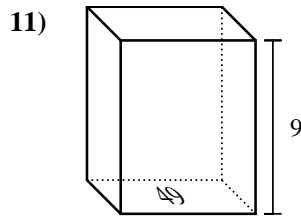
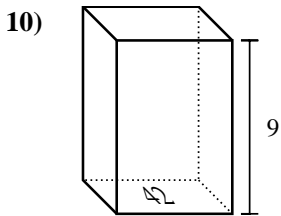
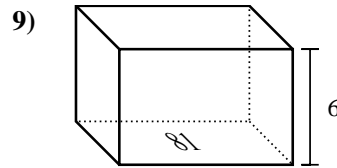
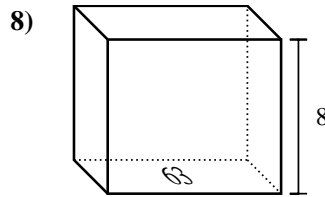
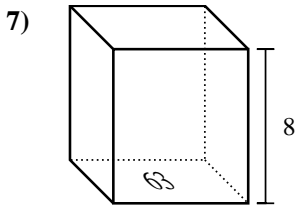
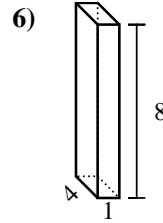
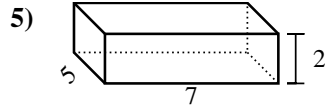
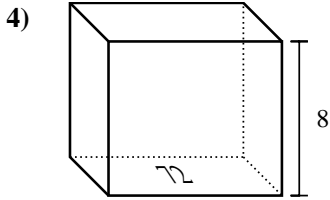
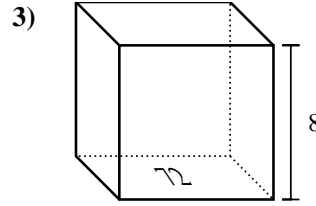
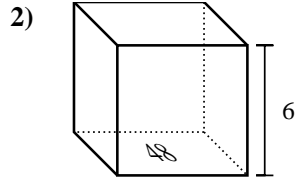
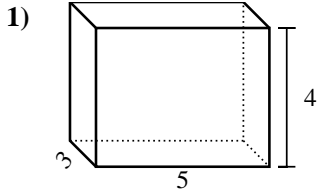
Answers

1. 324 cm<sup>3</sup>
2. 441 cm<sup>3</sup>
3. 60 cm<sup>3</sup>
4. 504 cm<sup>3</sup>
5. 105 cm<sup>3</sup>
6. 392 cm<sup>3</sup>
7. 504 cm<sup>3</sup>
8. 567 cm<sup>3</sup>
9. 140 cm<sup>3</sup>
10. 168 cm<sup>3</sup>
11. 180 cm<sup>3</sup>
12. 343 cm<sup>3</sup>
13. 162 cm<sup>3</sup>
14. 448 cm<sup>3</sup>
15. 432 cm<sup>3</sup>



Find the volume of each rectangular prism. Units are in cm (not to scale). Remember  $V = BH$  and  $V = L \times W \times H$

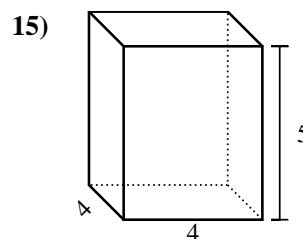
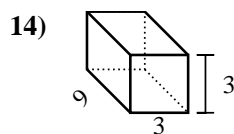
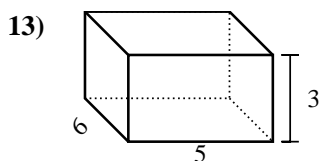
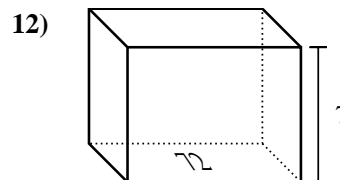
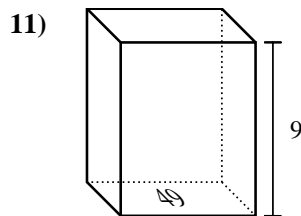
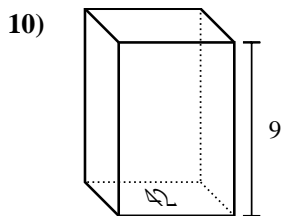
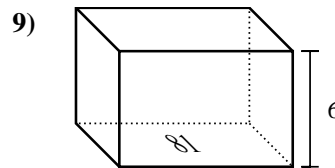
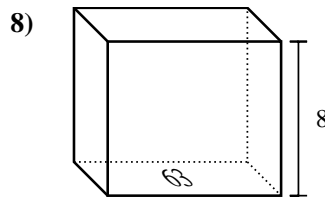
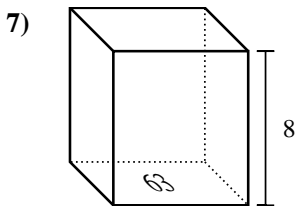
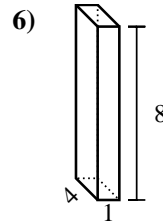
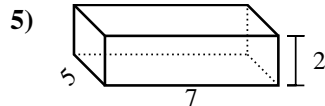
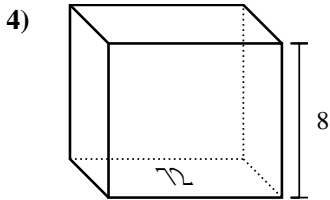
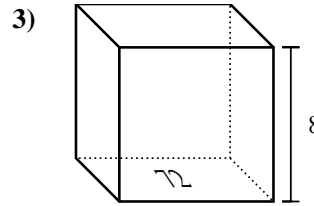
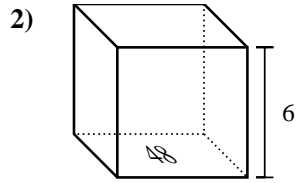
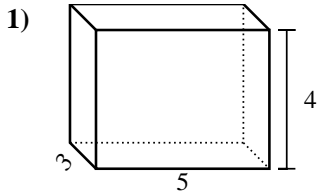
Answers



1. \_\_\_\_\_
2. \_\_\_\_\_
3. \_\_\_\_\_
4. \_\_\_\_\_
5. \_\_\_\_\_
6. \_\_\_\_\_
7. \_\_\_\_\_
8. \_\_\_\_\_
9. \_\_\_\_\_
10. \_\_\_\_\_
11. \_\_\_\_\_
12. \_\_\_\_\_
13. \_\_\_\_\_
14. \_\_\_\_\_
15. \_\_\_\_\_



Find the volume of each rectangular prism. Units are in cm (not to scale). Remember  $V = BH$  and  $V = L \times W \times H$



Answers

1. 60 cm<sup>3</sup>

2. 288 cm<sup>3</sup>

3. 576 cm<sup>3</sup>

4. 576 cm<sup>3</sup>

5. 70 cm<sup>3</sup>

6. 32 cm<sup>3</sup>

7. 504 cm<sup>3</sup>

8. 504 cm<sup>3</sup>

9. 486 cm<sup>3</sup>

10. 378 cm<sup>3</sup>

11. 441 cm<sup>3</sup>

12. 504 cm<sup>3</sup>

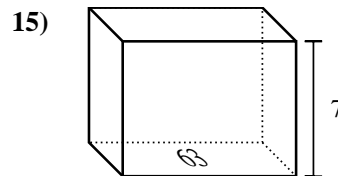
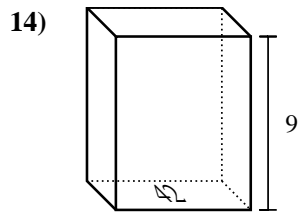
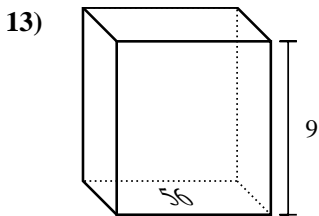
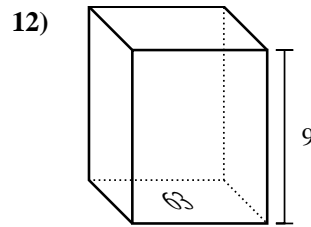
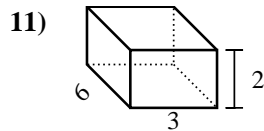
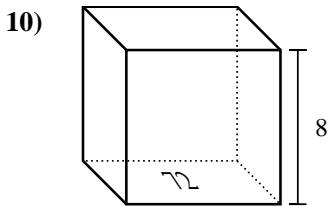
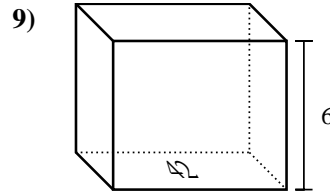
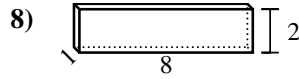
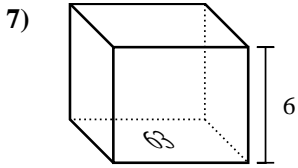
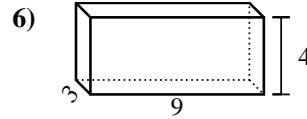
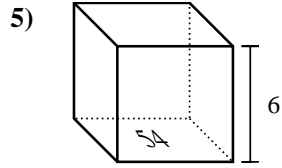
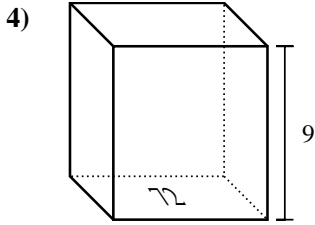
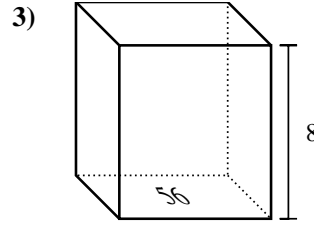
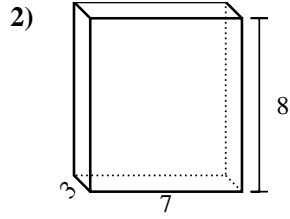
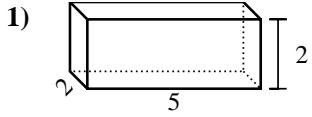
13. 90 cm<sup>3</sup>

14. 81 cm<sup>3</sup>

15. 80 cm<sup>3</sup>



Find the volume of each rectangular prism. Units are in cm (not to scale). Remember  $V = BH$  and  $V = L \times W \times H$

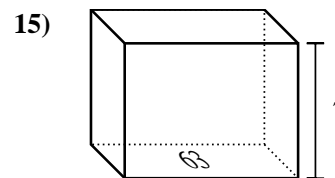
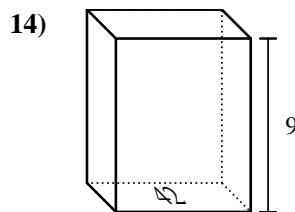
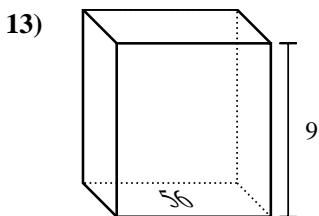
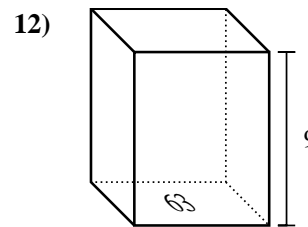
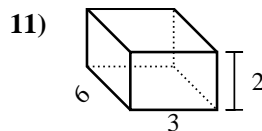
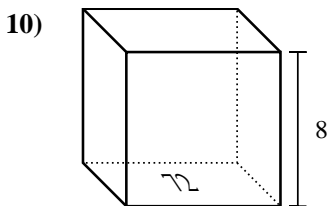
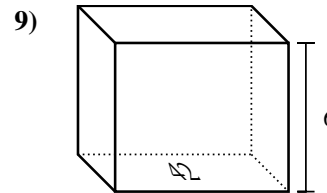
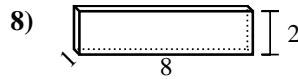
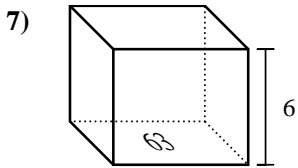
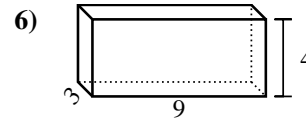
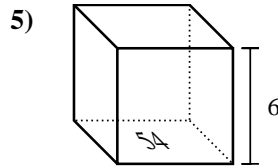
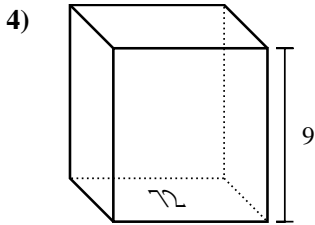
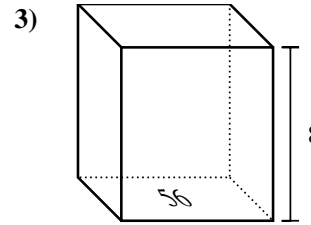
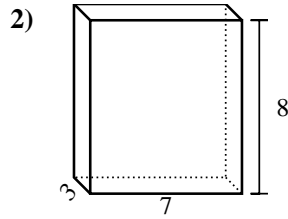
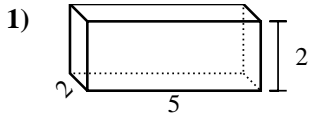


Answers

1. \_\_\_\_\_
2. \_\_\_\_\_
3. \_\_\_\_\_
4. \_\_\_\_\_
5. \_\_\_\_\_
6. \_\_\_\_\_
7. \_\_\_\_\_
8. \_\_\_\_\_
9. \_\_\_\_\_
10. \_\_\_\_\_
11. \_\_\_\_\_
12. \_\_\_\_\_
13. \_\_\_\_\_
14. \_\_\_\_\_
15. \_\_\_\_\_



Find the volume of each rectangular prism. Units are in cm (not to scale). Remember  $V = BH$  and  $V = L \times W \times H$

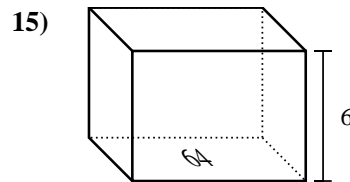
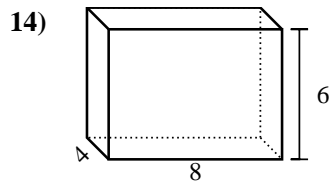
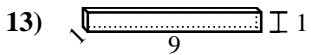
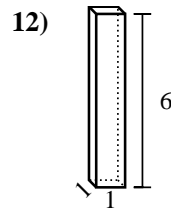
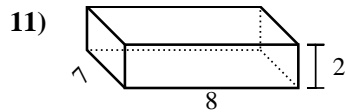
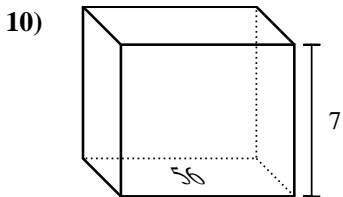
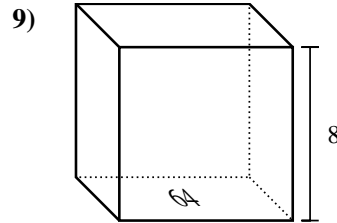
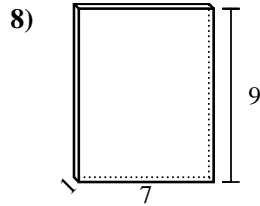
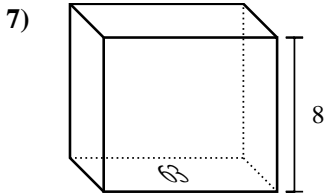
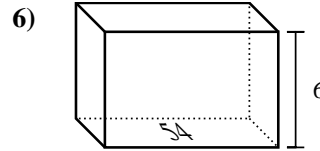
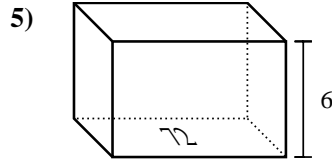
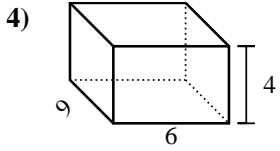
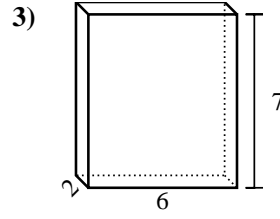
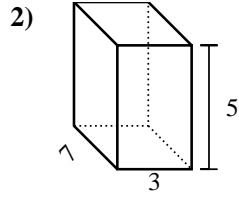
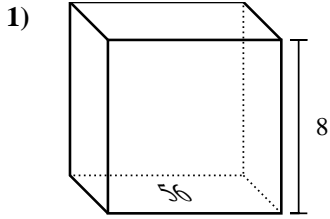


Answers

1. 20 cm<sup>3</sup>
2. 168 cm<sup>3</sup>
3. 448 cm<sup>3</sup>
4. 648 cm<sup>3</sup>
5. 324 cm<sup>3</sup>
6. 108 cm<sup>3</sup>
7. 378 cm<sup>3</sup>
8. 16 cm<sup>3</sup>
9. 252 cm<sup>3</sup>
10. 576 cm<sup>3</sup>
11. 36 cm<sup>3</sup>
12. 567 cm<sup>3</sup>
13. 504 cm<sup>3</sup>
14. 378 cm<sup>3</sup>
15. 441 cm<sup>3</sup>



Find the volume of each rectangular prism. Units are in cm (not to scale). Remember  $V = BH$  and  $V = L \times W \times H$

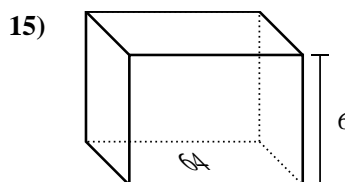
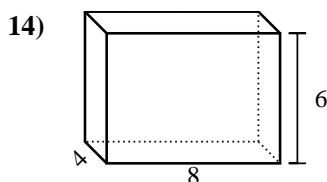
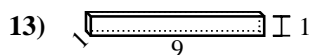
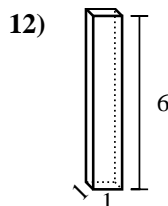
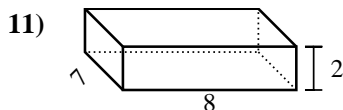
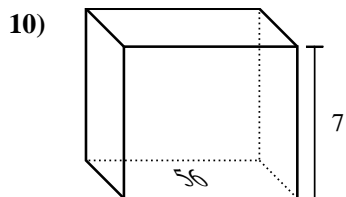
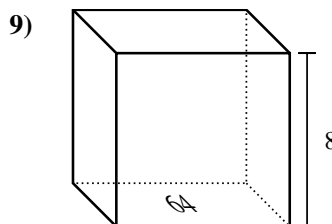
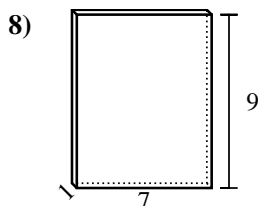
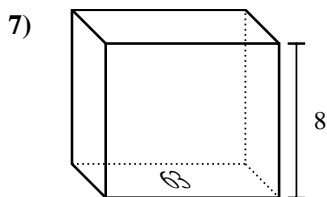
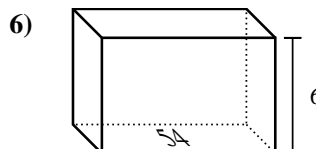
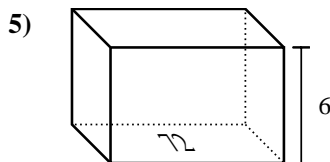
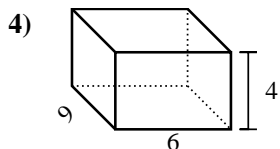
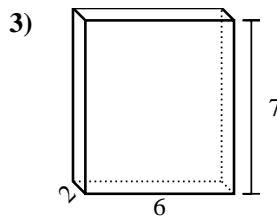
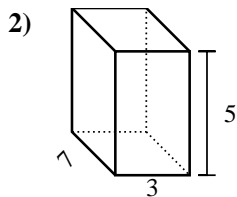
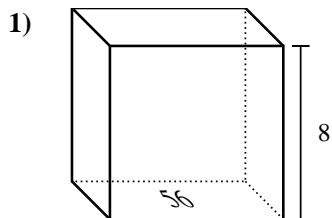


Answers

1. \_\_\_\_\_
2. \_\_\_\_\_
3. \_\_\_\_\_
4. \_\_\_\_\_
5. \_\_\_\_\_
6. \_\_\_\_\_
7. \_\_\_\_\_
8. \_\_\_\_\_
9. \_\_\_\_\_
10. \_\_\_\_\_
11. \_\_\_\_\_
12. \_\_\_\_\_
13. \_\_\_\_\_
14. \_\_\_\_\_
15. \_\_\_\_\_



Find the volume of each rectangular prism. Units are in cm (not to scale). Remember  $V = BH$  and  $V = L \times W \times H$



Answers

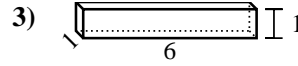
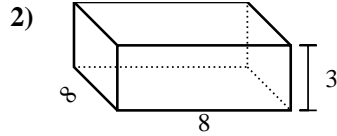
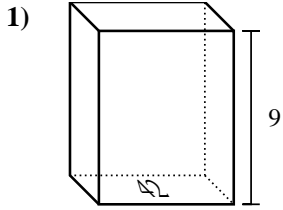
1. 448 cm<sup>3</sup>
2. 105 cm<sup>3</sup>
3. 84 cm<sup>3</sup>
4. 216 cm<sup>3</sup>
5. 432 cm<sup>3</sup>
6. 324 cm<sup>3</sup>
7. 504 cm<sup>3</sup>
8. 63 cm<sup>3</sup>
9. 512 cm<sup>3</sup>
10. 392 cm<sup>3</sup>
11. 112 cm<sup>3</sup>
12. 6 cm<sup>3</sup>
13. 9 cm<sup>3</sup>
14. 192 cm<sup>3</sup>
15. 384 cm<sup>3</sup>





Find the volume of each rectangular prism. Units are in cm (not to scale). Remember  $V = BH$  and  $V = L \times W \times H$

Answers

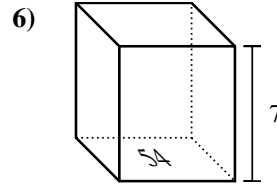
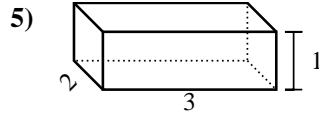
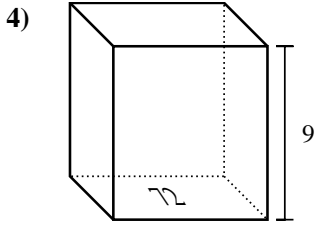


1. \_\_\_\_\_

2. \_\_\_\_\_

3. \_\_\_\_\_

4. \_\_\_\_\_

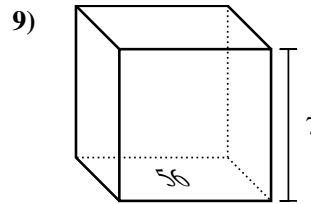
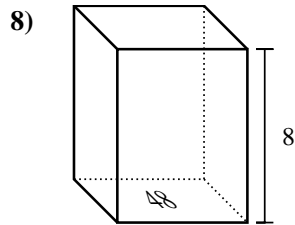
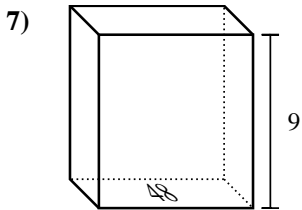


5. \_\_\_\_\_

6. \_\_\_\_\_

7. \_\_\_\_\_

8. \_\_\_\_\_

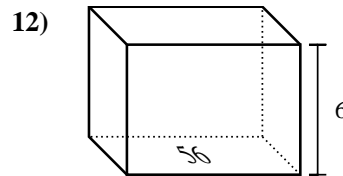
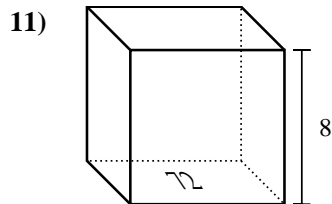
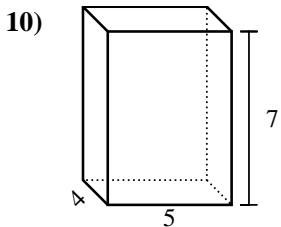


9. \_\_\_\_\_

10. \_\_\_\_\_

11. \_\_\_\_\_

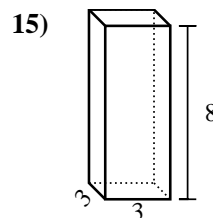
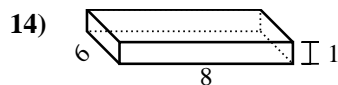
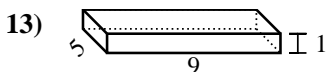
12. \_\_\_\_\_



13. \_\_\_\_\_

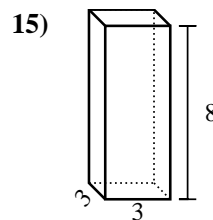
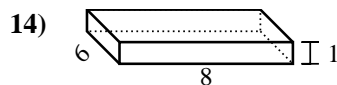
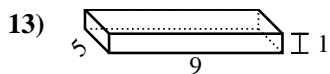
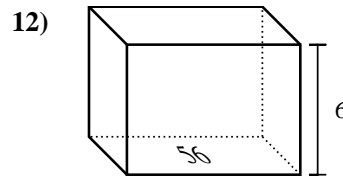
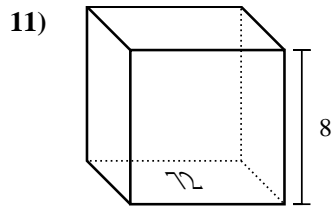
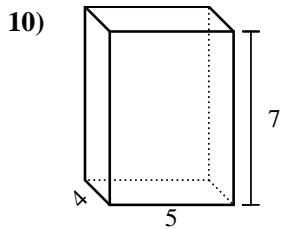
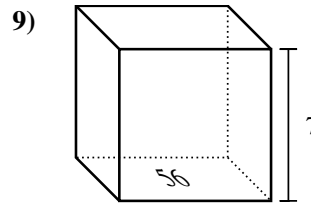
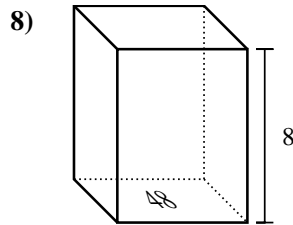
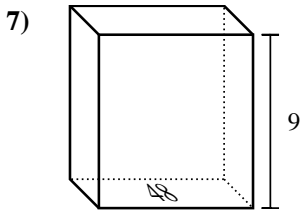
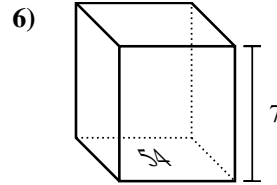
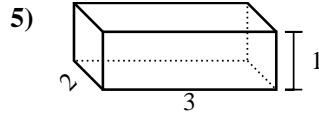
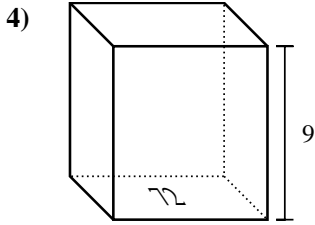
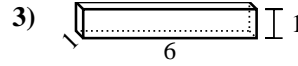
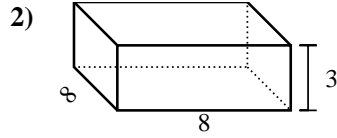
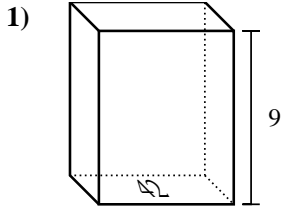
14. \_\_\_\_\_

15. \_\_\_\_\_





Find the volume of each rectangular prism. Units are in cm (not to scale). Remember  $V = BH$  and  $V = L \times W \times H$



Answers

1. **378 cm<sup>3</sup>**

2. **192 cm<sup>3</sup>**

3. **6 cm<sup>3</sup>**

4. **648 cm<sup>3</sup>**

5. **6 cm<sup>3</sup>**

6. **378 cm<sup>3</sup>**

7. **432 cm<sup>3</sup>**

8. **384 cm<sup>3</sup>**

9. **392 cm<sup>3</sup>**

10. **140 cm<sup>3</sup>**

11. **576 cm<sup>3</sup>**

12. **336 cm<sup>3</sup>**

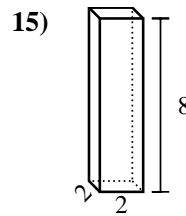
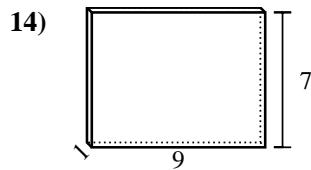
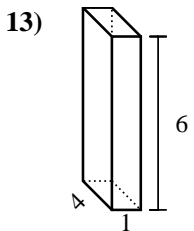
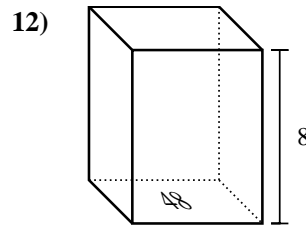
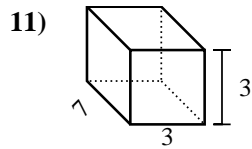
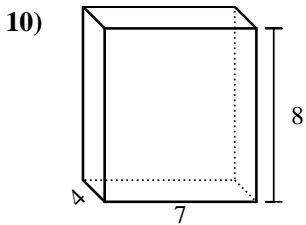
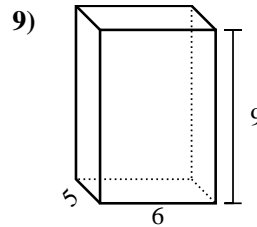
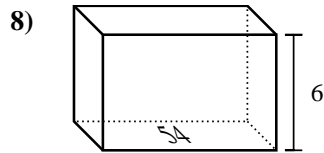
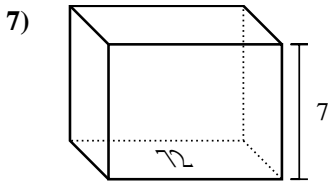
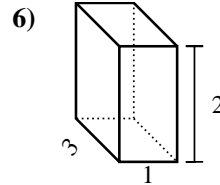
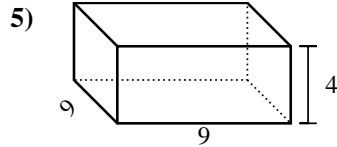
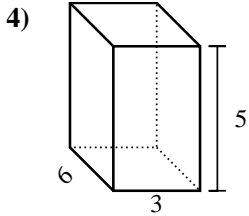
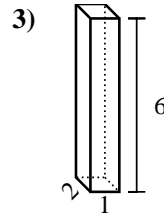
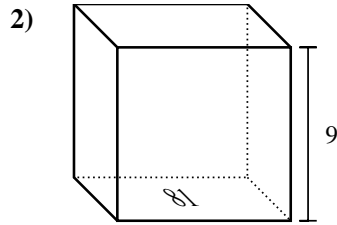
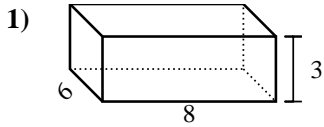
13. **45 cm<sup>3</sup>**

14. **48 cm<sup>3</sup>**

15. **72 cm<sup>3</sup>**



Find the volume of each rectangular prism. Units are in cm (not to scale). Remember  $V = BH$  and  $V = L \times W \times H$

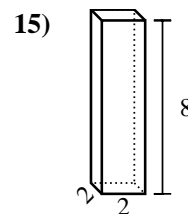
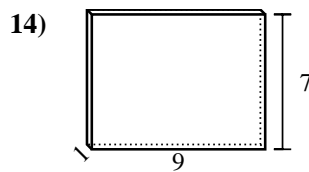
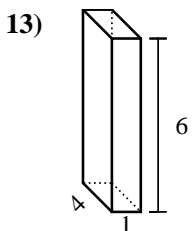
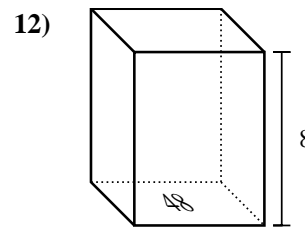
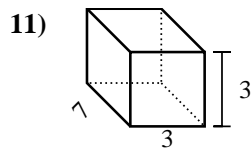
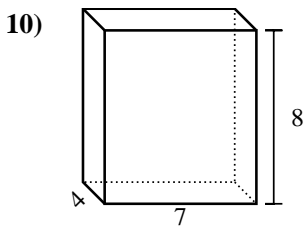
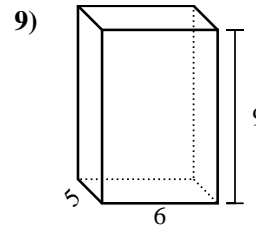
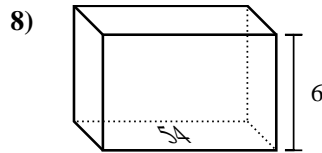
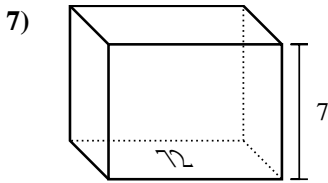
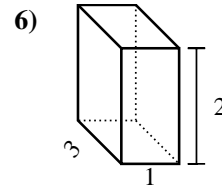
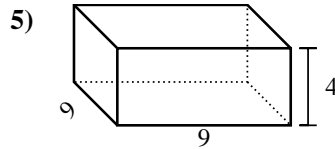
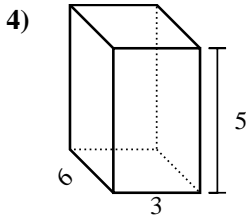
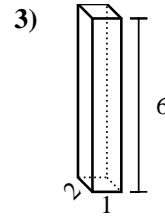
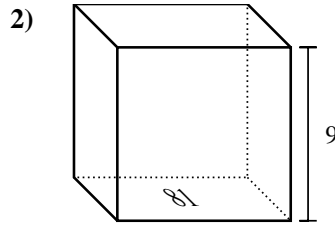
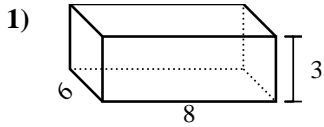


Answers

1. \_\_\_\_\_
2. \_\_\_\_\_
3. \_\_\_\_\_
4. \_\_\_\_\_
5. \_\_\_\_\_
6. \_\_\_\_\_
7. \_\_\_\_\_
8. \_\_\_\_\_
9. \_\_\_\_\_
10. \_\_\_\_\_
11. \_\_\_\_\_
12. \_\_\_\_\_
13. \_\_\_\_\_
14. \_\_\_\_\_
15. \_\_\_\_\_



Find the volume of each rectangular prism. Units are in cm (not to scale). Remember  $V = BH$  and  $V = L \times W \times H$



Answers

1. 144 cm<sup>3</sup>
2. 729 cm<sup>3</sup>
3. 12 cm<sup>3</sup>
4. 90 cm<sup>3</sup>
5. 324 cm<sup>3</sup>
6. 6 cm<sup>3</sup>
7. 504 cm<sup>3</sup>
8. 324 cm<sup>3</sup>
9. 270 cm<sup>3</sup>
10. 224 cm<sup>3</sup>
11. 63 cm<sup>3</sup>
12. 384 cm<sup>3</sup>
13. 24 cm<sup>3</sup>
14. 63 cm<sup>3</sup>
15. 32 cm<sup>3</sup>