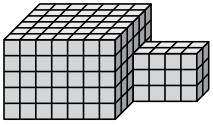




Find the total volume of each figure. Measurement is in cm (not to scale).

Answers

1)



1. _____

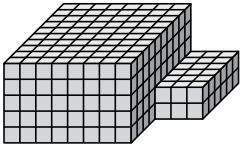
2. _____

3. _____

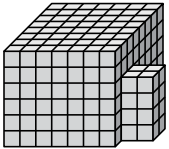
4. _____

5. _____

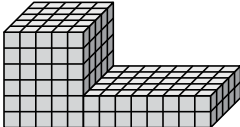
2)



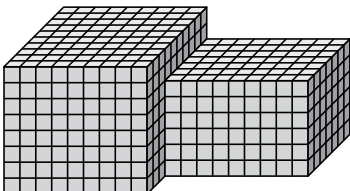
3)



4)

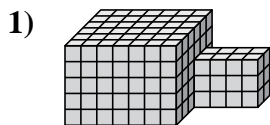


5)



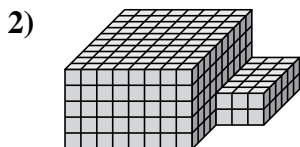


Find the total volume of each figure. Measurement is in cm (not to scale).



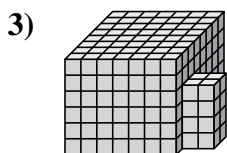
$$7 \times 6 \times 5 = 210$$

$$4 \times 2 \times 3 = 24$$



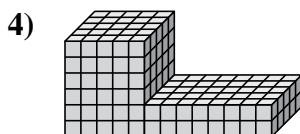
$$8 \times 10 \times 5 = 400$$

$$3 \times 6 \times 2 = 36$$



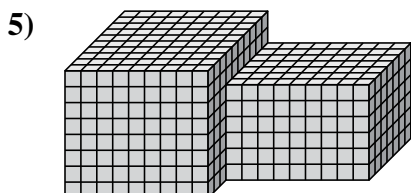
$$7 \times 8 \times 6 = 336$$

$$2 \times 2 \times 4 = 16$$



$$5 \times 5 \times 6 = 150$$

$$8 \times 5 \times 2 = 80$$



$$9 \times 10 \times 8 = 720$$

$$9 \times 7 \times 6 = 378$$

Answers

1. 234 cm³

2. 436 cm³

3. 352 cm³

4. 230 cm³

5. 1098 cm³