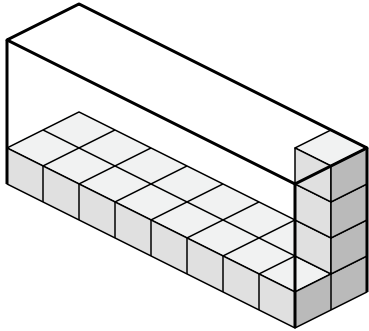




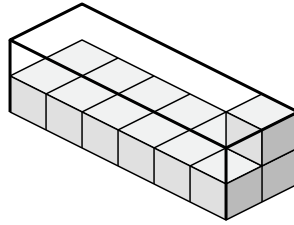
Create an expression to determine the volume of each box.

Answers

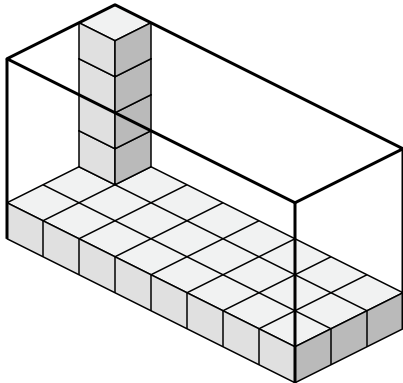
1)



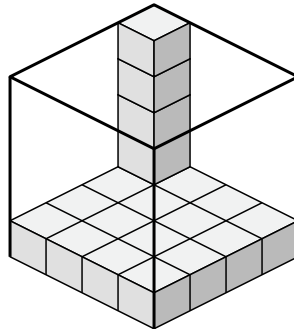
2)



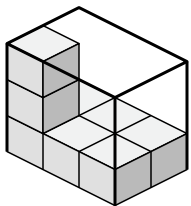
3)



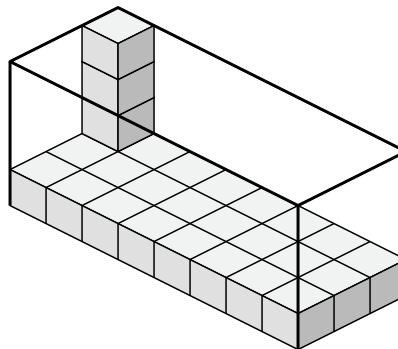
4)



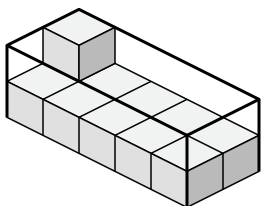
5)



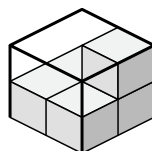
6)



7)



8)

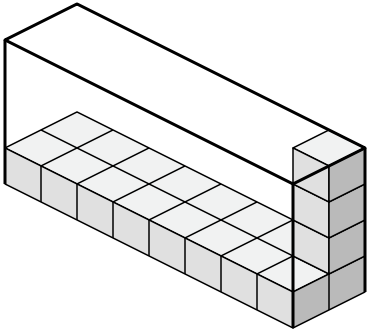


- 1. _____
- 2. _____
- 3. _____
- 4. _____
- 5. _____
- 6. _____
- 7. _____
- 8. _____

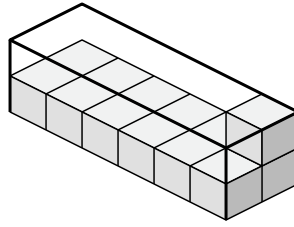


Create an expression to determine the volume of each box.

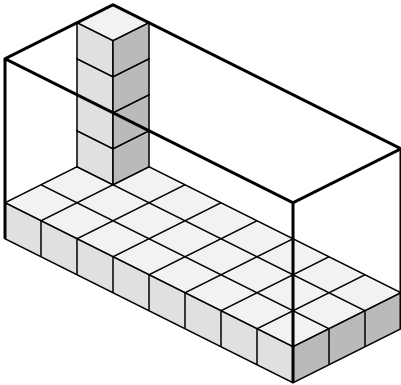
1)



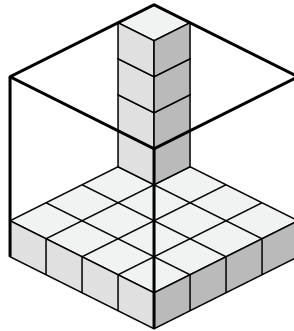
2)



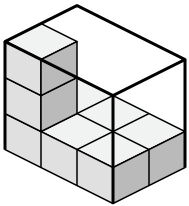
3)



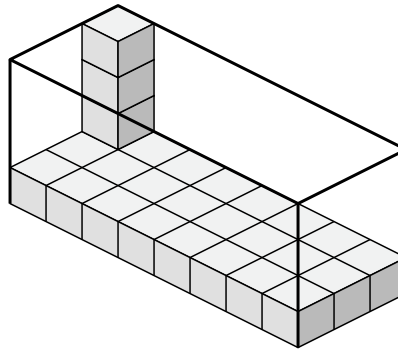
4)



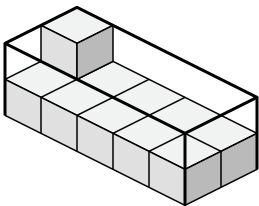
5)



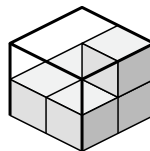
6)



7)



8)



Answers

1. $8 \times 2 \times 4$

2. $6 \times 2 \times 2$

3. $8 \times 3 \times 5$

4. $4 \times 4 \times 5$

5. $3 \times 2 \times 3$

6. $8 \times 3 \times 4$

7. $5 \times 2 \times 2$

8. $2 \times 2 \times 2$