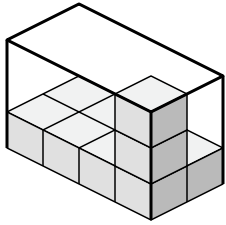




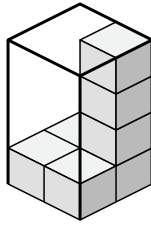
Create an expression to determine the volume of each box.

Answers

1)



2)



1. \_\_\_\_\_

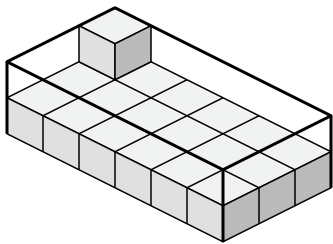
2. \_\_\_\_\_

3. \_\_\_\_\_

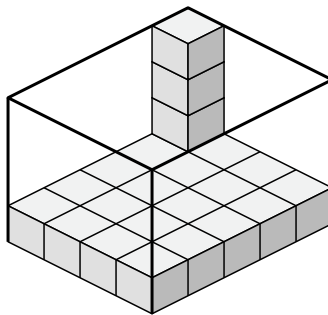
4. \_\_\_\_\_

5. \_\_\_\_\_

3)



4)

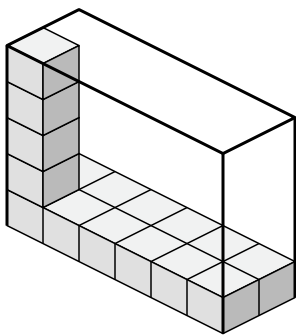


6. \_\_\_\_\_

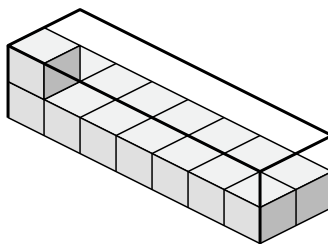
7. \_\_\_\_\_

8. \_\_\_\_\_

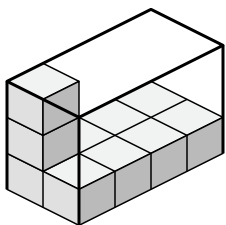
5)



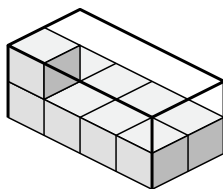
6)



7)



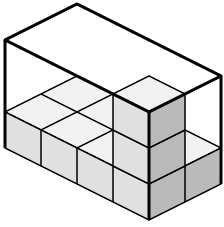
8)



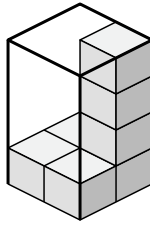


Create an expression to determine the volume of each box.

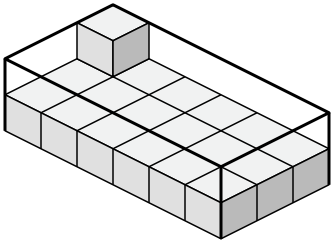
1)



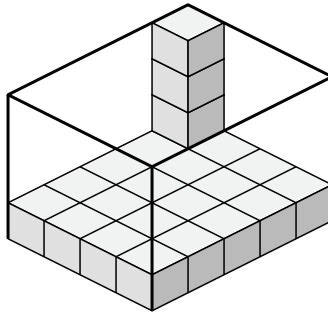
2)



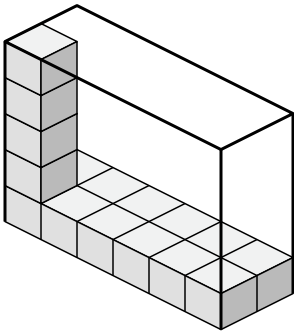
3)



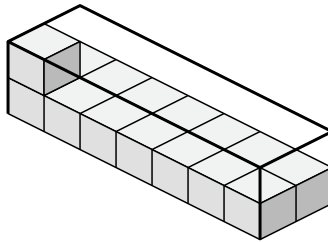
4)



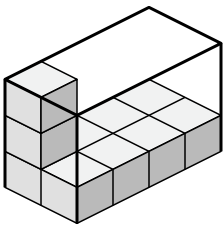
5)



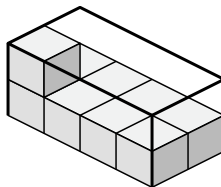
6)



7)



8)



Answers

1.  $4 \times 2 \times 3$

2.  $2 \times 2 \times 4$

3.  $6 \times 3 \times 2$

4.  $4 \times 5 \times 4$

5.  $6 \times 2 \times 5$

6.  $7 \times 2 \times 2$

7.  $2 \times 4 \times 3$

8.  $4 \times 2 \times 2$