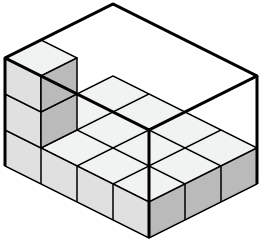




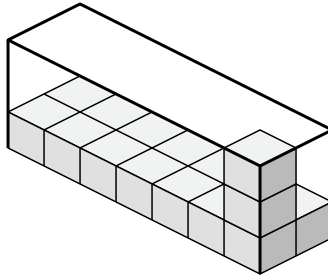
Create an expression to determine the volume of each box.

Answers

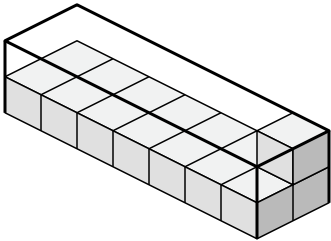
1)



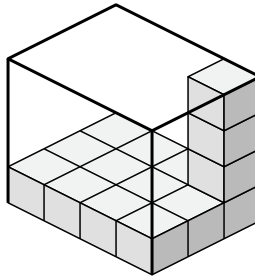
2)



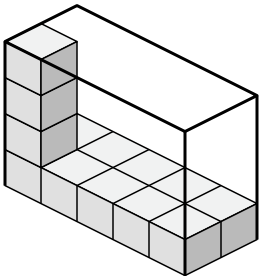
3)



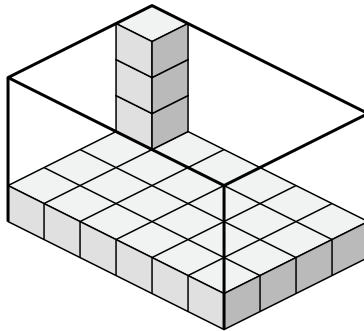
4)



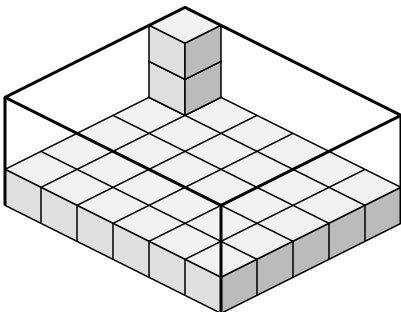
5)



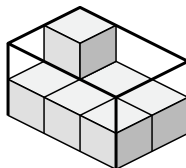
6)



7)



8)

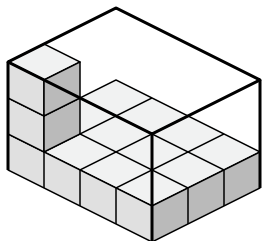


- 1. _____
- 2. _____
- 3. _____
- 4. _____
- 5. _____
- 6. _____
- 7. _____
- 8. _____

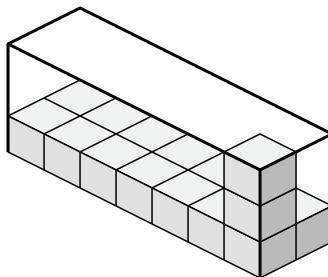


Create an expression to determine the volume of each box.

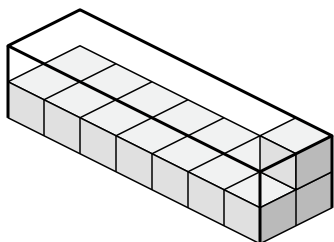
1)



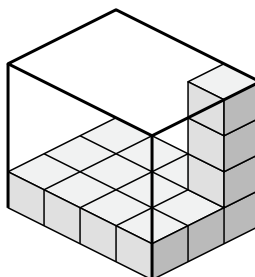
2)



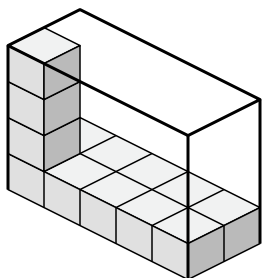
3)



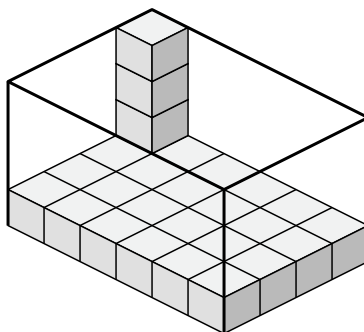
4)



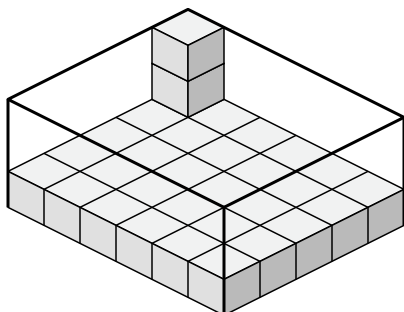
5)



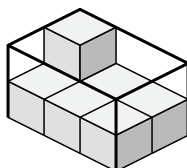
6)



7)



8)



Answers

1. 4x3x3

2. 7x2x3

3. 7x2x2

4. 4x3x4

5. 5x2x4

6. 6x4x4

7. 6x5x3

8. 3x2x2