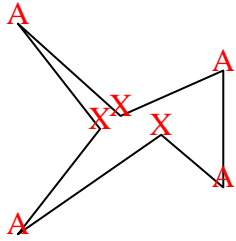




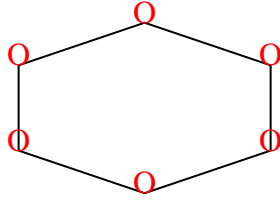


Count the number of Acute, Obtuse, Right and Reflex angles in each shape.

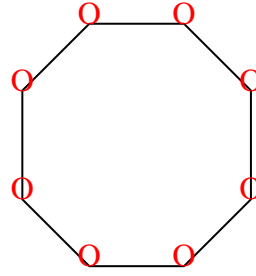
Ex)



1)



2)



Answers

Ex. 4 0 0 3

1. 0 0 6 0

2. 0 8 0 0

3. 1 1 3 1

4. 2 2 0 0

5. 0 0 8 4

6. 0 0 4 0

7. 2 2 1 2

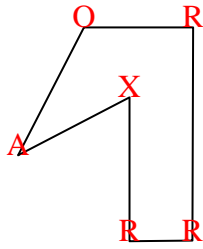
8. 2 2 0 0

9. 1 2 4 2

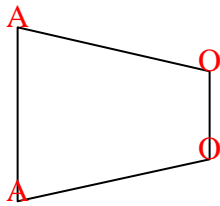
10. 2 3 0 1

11. 2 0 1 0

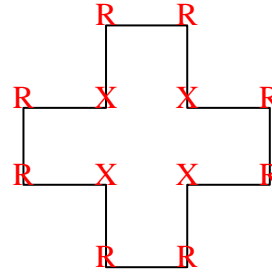
3)



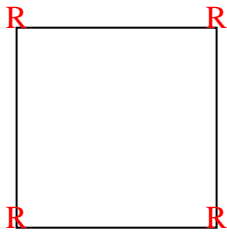
4)



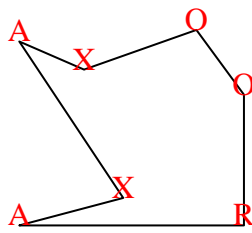
5)



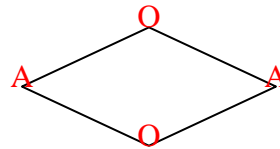
6)



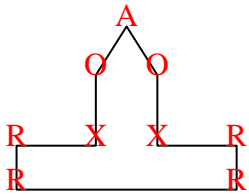
7)



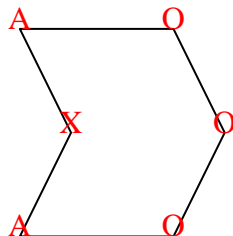
8)



9)



10)



11)

