



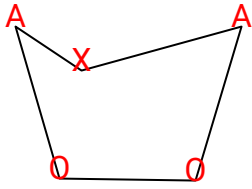


# Finding Angles within Shapes

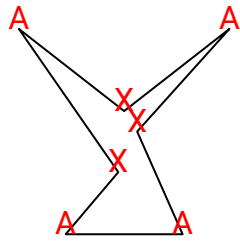
Name: **Answer Key**

Count the number of Acute, Obtuse, Right and Reflex angles in each shape.

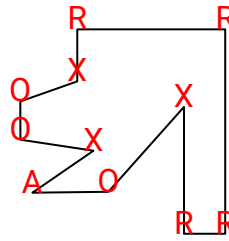
Ex)



1)



2)



## Answers

Ex. 2 2 0 1

1. 4 0 0 3

2. 1 3 4 3

3. 4 1 0 3

4. 1 2 4 2

5. 0 2 3 0

6. 2 4 4 0

7. 2 2 1 2

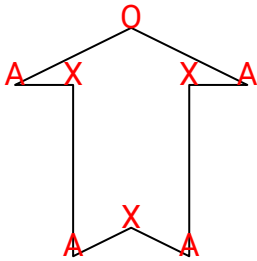
8. 1 2 1 0

9. 0 0 8 4

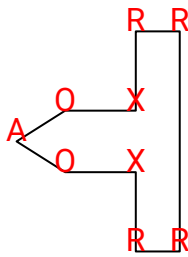
10. 5 0 0 5

11. 2 1 2 2

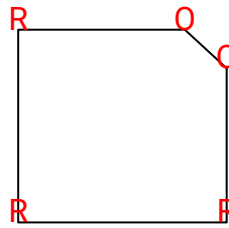
3)



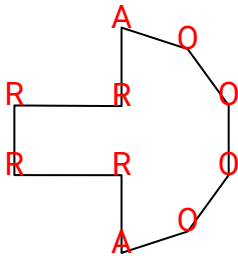
4)



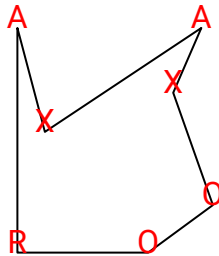
5)



6)



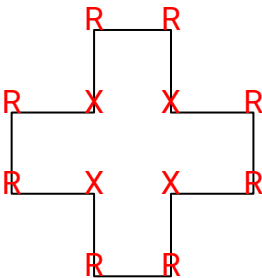
7)



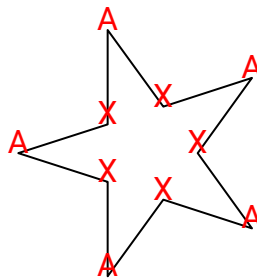
8)



9)



10)



11)

