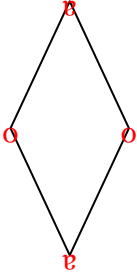




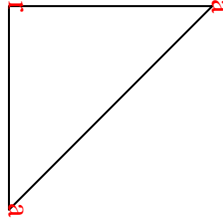


Count the number of Acute, Obtuse and Right angles inside each shape.

Ex)



1)



2)



Answers

Ex. 2 2 0

1. 2 0 1

2. 0 0 4

3. 3 0 0

4. 0 0 4

5. 1 4 0

6. 0 7 0

7. 0 2 3

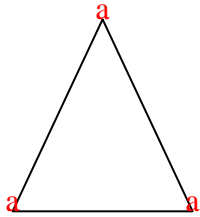
8. 0 4 2

9. 0 8 0

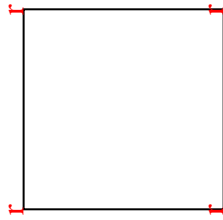
10. 0 2 3

11. 0 6 0

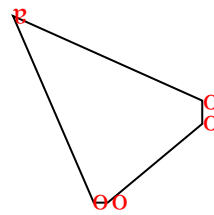
3)



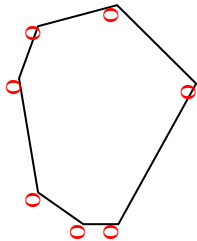
4)



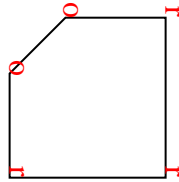
5)



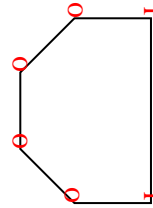
6)



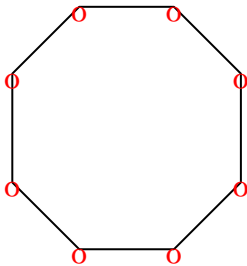
7)



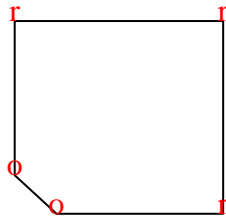
8)



9)



10)



11)

