



Solve each problem using a tape diagram.

Answers

- 1) A waiter has 58 customers. If 34 left, how many customers would the waiter still have?

- 2) Maria's hair was 70 centimeters long. If she cut off 40 centimeters, how long is her hair now?

- 3) Victor owned 39 video games for his Playstation and Xbox. 10 of the games were for Xbox. How many games does Victor have for playstation?

- 4) At the arcade Jerry had won 76 tickets total. He won 44 of them while playing Whack-A-Mole and the rest while playing Stop-The-Light. How many tickets did Jerry win playing Stop-The-Light?

- 5) A pet store had 93 gerbils. If they sold 46 of them, how many would they have left?

- 6) A clown had 54 balloons. He gave 17 away at a party. How many balloons would he have left over?

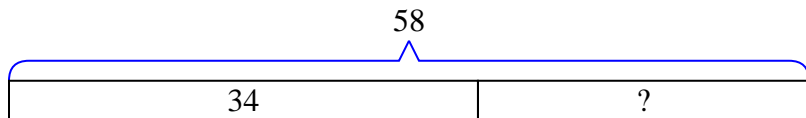
- 7) Roger had 50 apps on his phone. He deleted 38 of them. How many apps does Roger have left?

1. _____
2. _____
3. _____
4. _____
5. _____
6. _____
7. _____

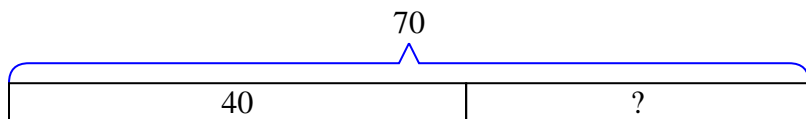


Solve each problem using a tape diagram.

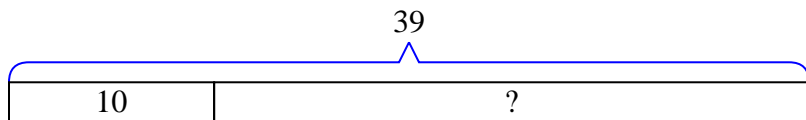
- 1) A waiter has 58 customers. If 34 left, how many customers would the waiter still have?



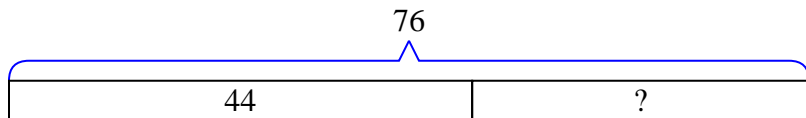
- 2) Maria's hair was 70 centimeters long. If she cut off 40 centimeters, how long is her hair now?



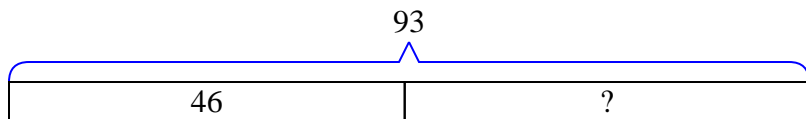
- 3) Victor owned 39 video games for his Playstation and Xbox. 10 of the games were for Xbox. How many games does Victor have for playstation?



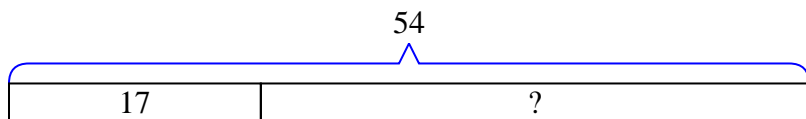
- 4) At the arcade Jerry had won 76 tickets total. He won 44 of them while playing Whack-A-Mole and the rest while playing Stop-The-Light. How many tickets did Jerry win playing Stop-The-Light?



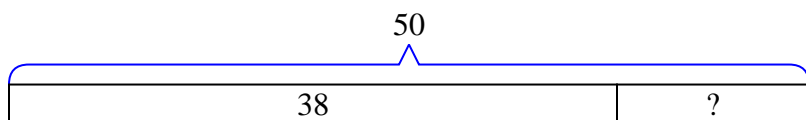
- 5) A pet store had 93 gerbils. If they sold 46 of them, how many would they have left?



- 6) A clown had 54 balloons. He gave 17 away at a party. How many balloons would he have left over?



- 7) Roger had 50 apps on his phone. He deleted 38 of them. How many apps does Roger have left?

Answers1. 242. 303. 294. 325. 476. 377. 12