



Solve each problem using a tape diagram.

Answers

1) Sarah had 61 pieces of paper in her folder. She used 13 pieces. How many pieces does she have now?

1. \_\_\_\_\_

2) Lana could send 56 text messages a day. If she sent 37, how many text messages does she have left she can send?

2. \_\_\_\_\_

3) A chef has 85 cherries. He sets aside 44 of them to make a pie. How many cherries would he still have?

3. \_\_\_\_\_

4) Emily had 82 3DS games. If she gave 39 to her friend, how many would she have left?

4. \_\_\_\_\_

5) Robin listened to 37 songs on her mp3 player. 27 of them were pop and the rest were classical. How many classical songs did she listen to?

5. \_\_\_\_\_

6) A farmer had 71 tomatoes in his garden. If he picked 31 of them, how many would he have left in the garden?

6. \_\_\_\_\_

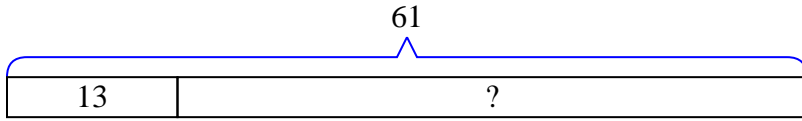
7) There were 91 people on the train. At the first stop 46 people got off. How many people are left on the train?

7. \_\_\_\_\_

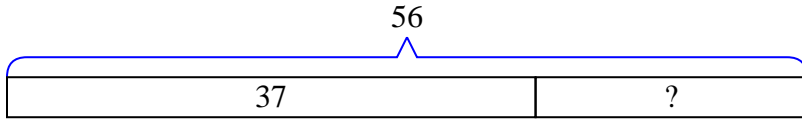


Solve each problem using a tape diagram.

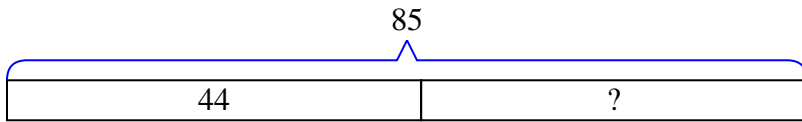
- 1) Sarah had 61 pieces of paper in her folder. She used 13 pieces. How many pieces does she have now?



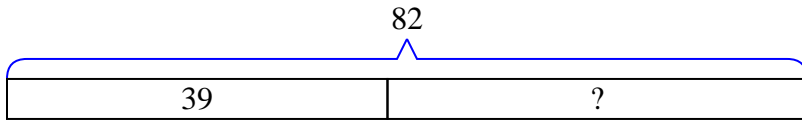
- 2) Lana could send 56 text messages a day. If she sent 37, how many text messages does she have left she can send?



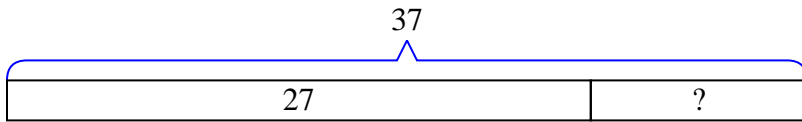
- 3) A chef has 85 cherries. He sets aside 44 of them to make a pie. How many cherries would he still have?



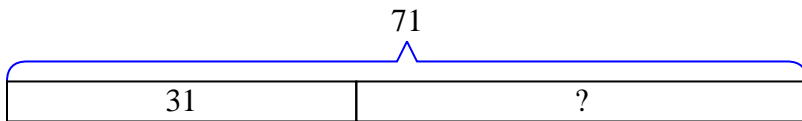
- 4) Emily had 82 3DS games. If she gave 39 to her friend, how many would she have left?



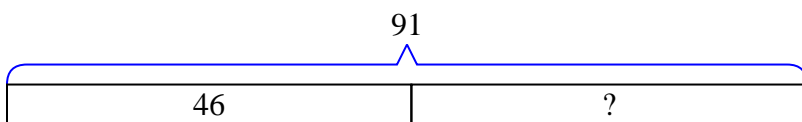
- 5) Robin listened to 37 songs on her mp3 player. 27 of them were pop and the rest were classical. How many classical songs did she listen to?



- 6) A farmer had 71 tomatoes in his garden. If he picked 31 of them, how many would he have left in the garden?



- 7) There were 91 people on the train. At the first stop 46 people got off. How many people are left on the train?



Answers

1. 48

2. 19

3. 41

4. 43

5. 10

6. 40

7. 45