



Solve each problem using a tape diagram.

Answers

Ex) A chef was ordering vegetables for his restaurant. He order \$198 worth of potatoes. He also spent $\frac{4}{9}$ as much on tomatoes. Finally he spent $\frac{3}{4}$ as much on green beans as he did on tomatoes. How much did he spend on green beans?

Ex. 66

1. _____

2. _____

3. _____

4. _____

1) Two years ago the fair had $\frac{5}{7}$ as many people as 1 year ago. 1 year ago the fair had $\frac{7}{8}$ as many people as this year. This year the fair had 536 people. How many people did the fair have 2 years ago?

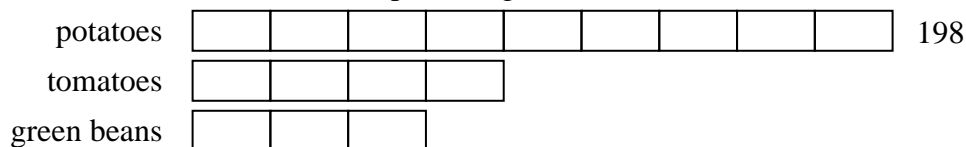
2) On Super Bowl Sunday a store sold 279 sodas. They sold $\frac{2}{9}$ as many bags of chips. They also sold $\frac{1}{2}$ as many jars of dip as bags of chips. How many jars of dip did they sell?

3) Tiffany was trying to determine the weight of a small rock. She determined the small rock was $\frac{3}{5}$ as heavy as a medium rock. The medium rock was $\frac{5}{8}$ as heavy as a large rock. The large rock weighed 576 grams. How heavy was the small rock?

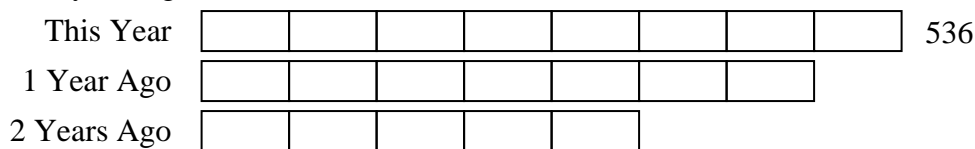
4) Faye was looking at her Nintendo collection. She had 460 wiiU games. She had $\frac{5}{10}$ as many DS games and $\frac{2}{5}$ as many 3ds games as DS games. How many 3ds games does she have?

**Solve each problem using a tape diagram.****Answers**

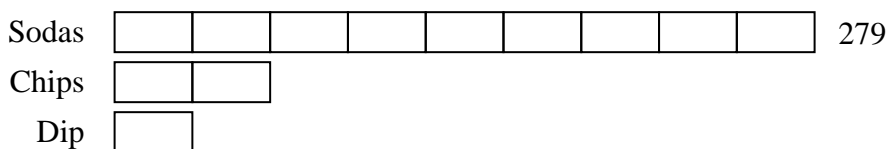
- Ex)** A chef was ordering vegetables for his restaurant. He order \$198 worth of potatoes. He also spent $\frac{4}{9}$ as much on tomatoes. Finally he spent $\frac{3}{4}$ as much on green beans as he did on tomatoes. How much did he spend on green beans?

Ex. 661. 3352. 313. 2164. 92

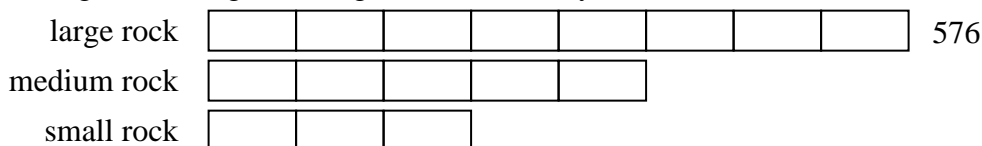
- 1)** Two years ago the fair had $\frac{5}{7}$ as many people as 1 year ago. 1 year ago the fair had $\frac{7}{8}$ as many people as this year. This year the fair had 536 people. How many people did the fair have 2 years ago?



- 2)** On Super Bowl Sunday a store sold 279 sodas. They sold $\frac{2}{9}$ as many bags of chips. They also sold $\frac{1}{2}$ as many jars of dip as bags of chips. How many jars of dip did they sell?



- 3)** Tiffany was trying to determine the weight of a small rock. She determined the small rock was $\frac{3}{5}$ as heavy as a medium rock. The medium rock was $\frac{5}{8}$ as heavy as a large rock. The large rock weighed 576 grams. How heavy was the small rock?



- 4)** Faye was looking at her Nintendo collection. She had 460 wiiU games. She had $\frac{5}{10}$ as many DS games and $\frac{2}{5}$ as many 3ds games as DS games. How many 3ds games does she have?

