

**Solve each problem.****Answers**

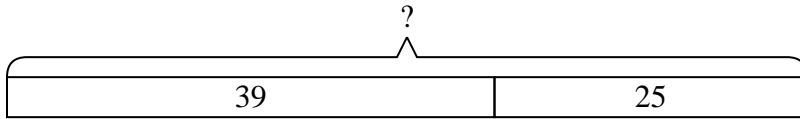
- 1) A restaurant sold 39 sodas in the morning and 25 in the afternoon. How many sodas did they sell total?
- 2) At the zoo Bianca took 16 pictures. If her sister took another 50 pictures, how many did they take total?
- 3) An aquarium had 47 fish in it. Later they added 36 fish. How many fish are in the aquarium now?
- 4) A grocery store had 28 bottles of regular soda and 26 bottles of diet soda. How many bottles did they have total?
- 5) Lana had 47 pieces of candy. Her friend gave her 45 more pieces. How many pieces of candy did Lana have total?
- 6) Robin spent 27 minutes drawing at school and 12 minutes drawing at home. How many minutes total did she spend drawing?
- 7) There were 13 people in line at lunch when 32 more got in line. How many people were there total in line?

1. _____
2. _____
3. _____
4. _____
5. _____
6. _____
7. _____

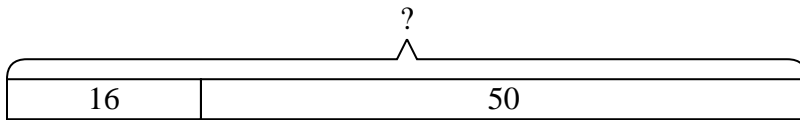


Solve each problem.

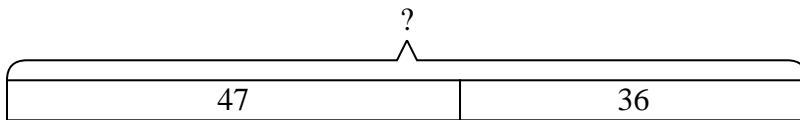
- 1) A restaurant sold 39 sodas in the morning and 25 in the afternoon. How many sodas did they sell total?



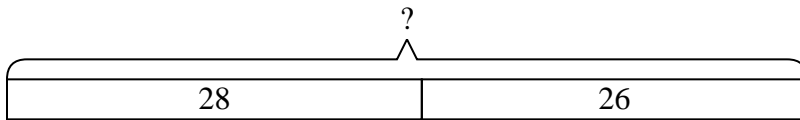
- 2) At the zoo Bianca took 16 pictures. If her sister took another 50 pictures, how many did they take total?



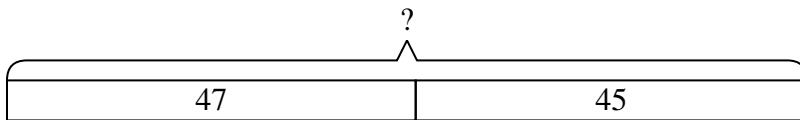
- 3) An aquarium had 47 fish in it. Later they added 36 fish. How many fish are in the aquarium now?



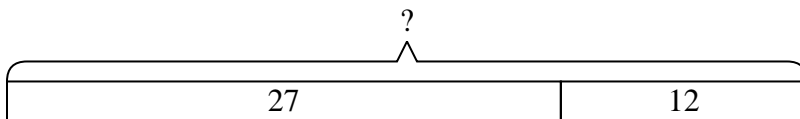
- 4) A grocery store had 28 bottles of regular soda and 26 bottles of diet soda. How many bottles did they have total?



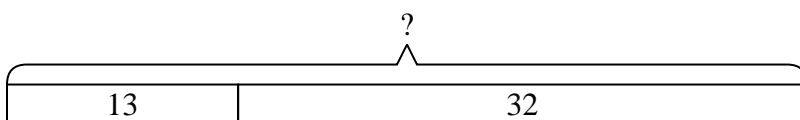
- 5) Lana had 47 pieces of candy. Her friend gave her 45 more pieces. How many pieces of candy did Lana have total?



- 6) Robin spent 27 minutes drawing at school and 12 minutes drawing at home. How many minutes total did she spend drawing?



- 7) There were 13 people in line at lunch when 32 more got in line. How many people were there total in line?

**Answers**

1. **64**
2. **66**
3. **83**
4. **54**
5. **92**
6. **39**
7. **45**