

**Solve each problem.****Answers**

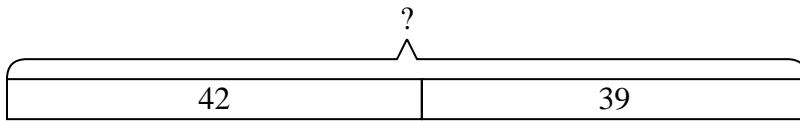
- 1) A grocery store had 42 bottles of regular soda and 39 bottles of diet soda. How many bottles did they have total?
- 2) A restaurant sold 50 sodas in the morning and 14 in the afternoon. How many sodas did they sell total?
- 3) A fast food restaurant sold 42 small hotdogs and 38 large hotdogs. How many hotdogs did they sell total?
- 4) George had 13 dollars saved up. After doing some chores his mother gave him another 45 dollars. How much money does he have total?
- 5) At the fair Carol started with 36 tickets and then bought 40 more. How many tickets did Carol have total?
- 6) Edward had \$41. Later he sold some of his old toys and got another \$48. How much money does he have total?
- 7) In the first half of a trivia game Cody scored 22 points. In the second half he scored 32 points. How many points did he score total?

1. _____
2. _____
3. _____
4. _____
5. _____
6. _____
7. _____

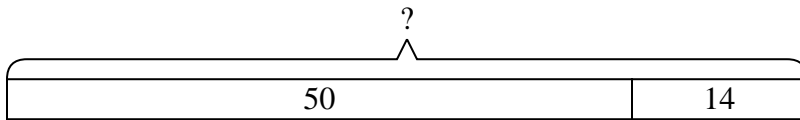


Solve each problem.

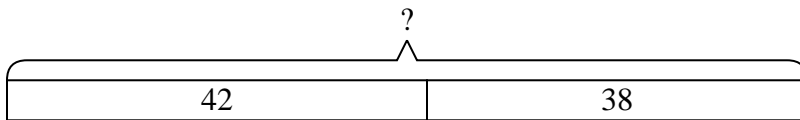
- 1) A grocery store had 42 bottles of regular soda and 39 bottles of diet soda. How many bottles did they have total?



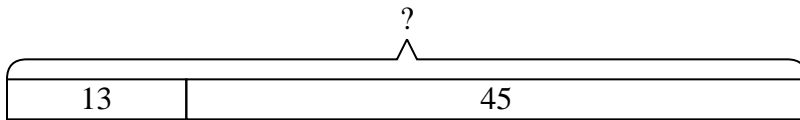
- 2) A restaurant sold 50 sodas in the morning and 14 in the afternoon. How many sodas did they sell total?



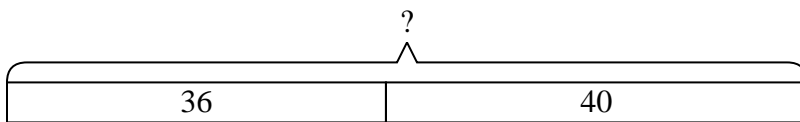
- 3) A fast food restaurant sold 42 small hotdogs and 38 large hotdogs. How many hotdogs did they sell total?



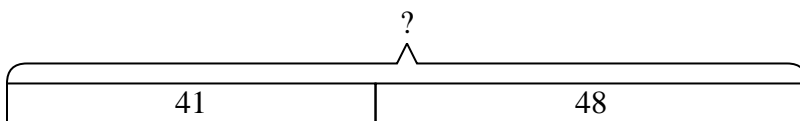
- 4) George had 13 dollars saved up. After doing some chores his mother gave him another 45 dollars. How much money does he have total?



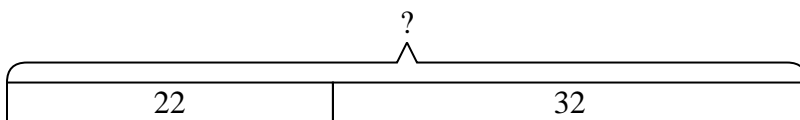
- 5) At the fair Carol started with 36 tickets and then bought 40 more. How many tickets did Carol have total?



- 6) Edward had \$41. Later he sold some of his old toys and got another \$48. How much money does he have total?



- 7) In the first half of a trivia game Cody scored 22 points. In the second half he scored 32 points. How many points did he score total?

**Answers**

1. **81**
2. **64**
3. **80**
4. **58**
5. **76**
6. **89**
7. **54**