

**Solve each problem.****Answers**

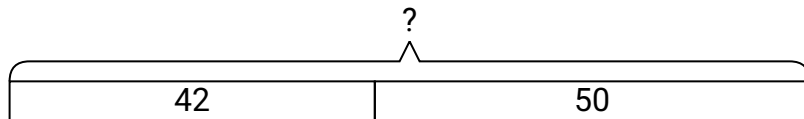
- 1) Janet had 42 sheets of paper in her desk and 50 more in her backpack. How many did she have total?
- 2) For Halloween Victor got 38 ounces of candy and Olivia got 23 ounces of candy. What is the combined weight they received?
- 3) A pet store had 46 kittens. If they got another 10 kittens, how many would they have total?
- 4) A baker already had 26 cakes but made 37 extra. How many cakes did the baker have total?
- 5) Tiffany spent 46 minutes drawing at school and 16 minutes drawing at home. How many minutes total did she spend drawing?
- 6) While playing a game John had 39 points. If he scored another 12 points, how many points would he have total?
- 7) Maria picked up 34 pieces of paper from the floor. If Henry picked up 13 pieces, how many did they pick up total?

1. _____
2. _____
3. _____
4. _____
5. _____
6. _____
7. _____

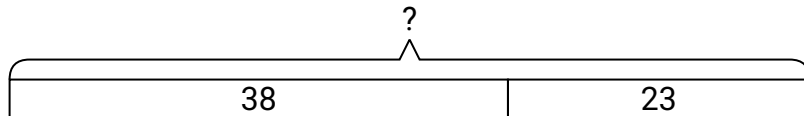


Solve each problem.

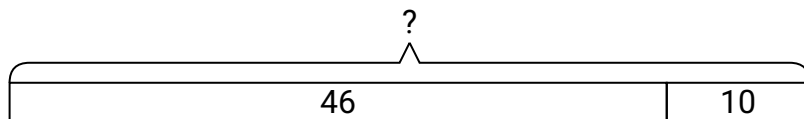
- 1) Janet had 42 sheets of paper in her desk and 50 more in her backpack. How many did she have total?



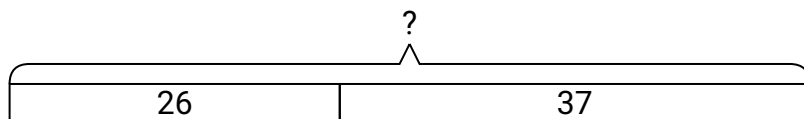
- 2) For Halloween Victor got 38 ounces of candy and Olivia got 23 ounces of candy. What is the combined weight they received?



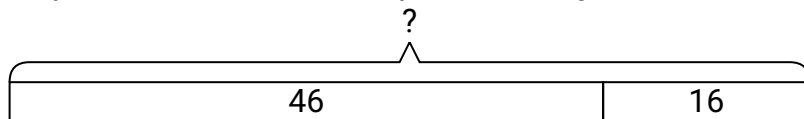
- 3) A pet store had 46 kittens. If they got another 10 kittens, how many would they have total?



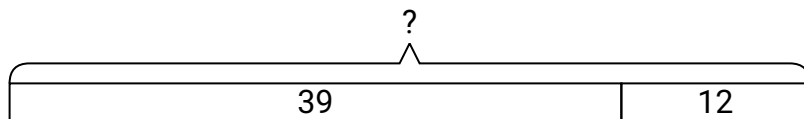
- 4) A baker already had 26 cakes but made 37 extra. How many cakes did the baker have total?



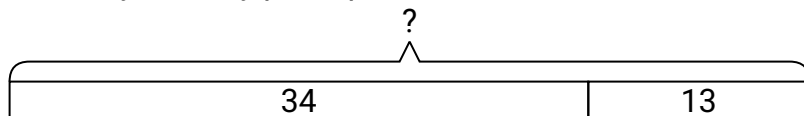
- 5) Tiffany spent 46 minutes drawing at school and 16 minutes drawing at home. How many minutes total did she spend drawing?



- 6) While playing a game John had 39 points. If he scored another 12 points, how many points would he have total?



- 7) Maria picked up 34 pieces of paper from the floor. If Henry picked up 13 pieces, how many did they pick up total?

**Answers**

1. **92**
2. **61**
3. **56**
4. **63**
5. **62**
6. **51**
7. **47**