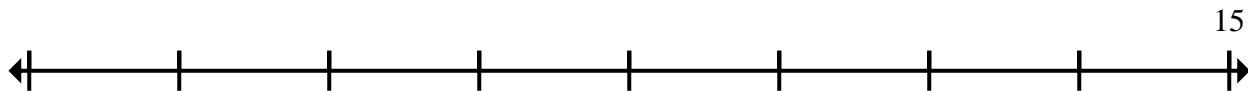





Fill in the blanks.

- 1) Start at 15 and count backward by 1.



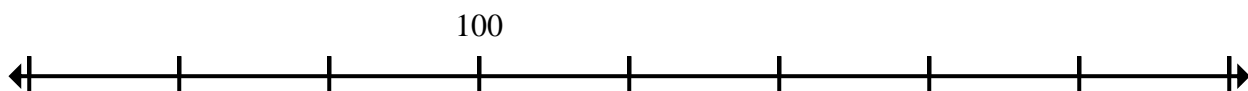
- 2) Start at 200 and count forward by 25.



- 3) Start at 6 and count forward by 2.



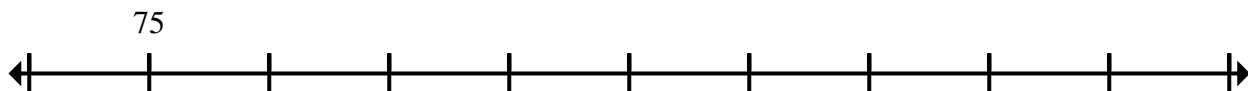
- 4) Start at 100 and count forward by 10.



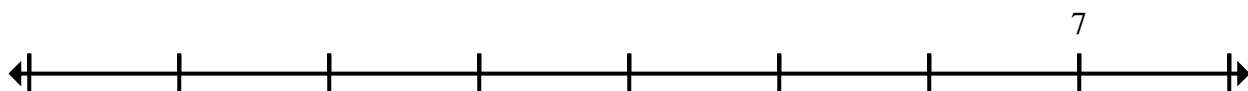
- 5) Start at 16 and count backward by 2.




- 6) Start at 75 and count forward by 25.



- 7) Start at 7 and count backward by 1.



- 8) Start at 850 and count backward by 50.



- 9) Start at 1500 and count backward by 100.



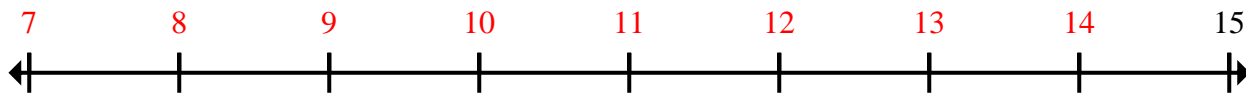
- 10) Start at 20 and count backward by 2.





Fill in the blanks.

- 1) Start at 15 and count backward by 1.



- 2) Start at 200 and count forward by 25.



- 3) Start at 6 and count forward by 2.



- 4) Start at 100 and count forward by 10.



- 5) Start at 16 and count backward by 2.



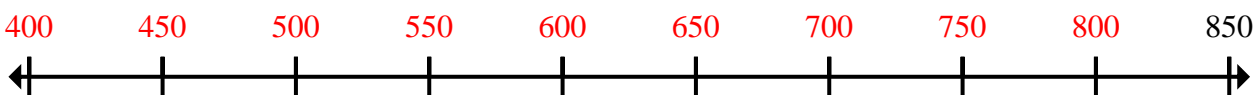
- 6) Start at 75 and count forward by 25.



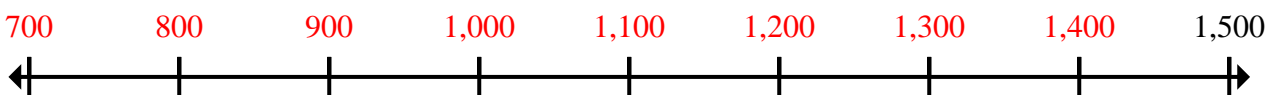
- 7) Start at 7 and count backward by 1.



- 8) Start at 850 and count backward by 50.



- 9) Start at 1500 and count backward by 100.



- 10) Start at 20 and count backward by 2.

