




Determine if the angle shown is 'less', 'more' or 'equal' to 90°.

Answers

Ex)



1)



2)

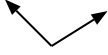


Ex. more

1. _____

2. _____

3)



4)



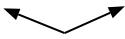
5)



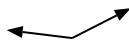
3. _____

4. _____

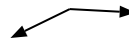
6)



7)



8)



5. _____

6. _____

7. _____

9)



10)



11)



8. _____

9. _____

10. _____

12)



13)



14)



11. _____

12. _____

13. _____

15)



16)



17)



14. _____

15. _____

16. _____

18)



19)



20)



17. _____

18. _____

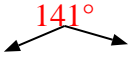
19. _____

20. _____



Determine if the angle shown is 'less', 'more' or 'equal' to 90°.

Ex)



1)



2)



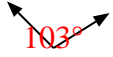
Answers

Ex. more

1. less

2. equal

3)



4)



5)



3. more

4. equal

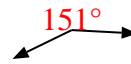
6)



7)



8)



5. equal

6. more

7. more

9)



10)



11)



8. more

9. less

10. less

12)



13)



14)



11. less

12. equal

13. less

15)



16)



17)



14. equal

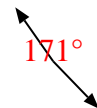
15. equal

16. more

18)



19)



20)



17. equal

18. less

19. more

20. less