







































Answers

Several students were helping to decorate the school halls by drawing pictures to hang up. The pictograph below shows the number of pictures each student drew.

Pictures Drawn

Ned	  
Sam	 
Vanessa	     
Luke	      
Isabel	       
Janet	    
Nancy	   

































 = 9 pictures drawn


- Who drew the fewest pictures?
- Who drew the most pictures?
- Who drew exactly 63 pictures?
- How many pictures did Vanessa draw?
- Did Ned or Sam draw more pictures?

- _____
- _____
- _____
- _____
- _____
- _____
- _____
- _____
- _____
- _____

Isabel and her friends were comparing the amount of candy they received on Halloween. They recorded their information in the pictograph below.

Candy Haul

Haley	 
Vanessa	   
Nancy	    
Maria	
Rachel	       
Isabel	      
Janet	    

 = 1 kilogram of candy

- Who got the most candy?
- Who got exactly 1 kilograms of candy?
- How many kilograms of candy did Nancy get?
- Who got more candy, Haley or Vanessa?
- Who got the least amount of candy?



Several students were helping to decorate the school halls by drawing pictures to hang up. The pictograph below shows the number of pictures each student drew.

Pictures Drawn

Ned		27
Sam		18
Vanessa		54
Luke		63
Isabel		72
Janet		45
Nancy		36

= 9 pictures drawn

- Who drew the fewest pictures?
- Who drew the most pictures?
- Who drew exactly 63 pictures?
- How many pictures did Vanessa draw?
- Did Ned or Sam draw more pictures?

Isabel and her friends were comparing the amount of candy they received on Halloween. They recorded their information in the pictograph below.

Candy Haul

Haley		2
Vanessa		4
Nancy		5
Maria		1
Rachel		10
Isabel		9
Janet		6

= 1 kilogram of candy

- Who got the most candy?
- Who got exactly 1 kilograms of candy?
- How many kilograms of candy did Nancy get?
- Who got more candy, Haley or Vanessa?
- Who got the least amount of candy?

Answers

- Sam**
- Isabel**
- Luke**
- 54**
- Ned**
- Rachel**
- Maria**
- 5**
- Vanessa**
- Maria**