



Answers

Luke and his friends were trying to see who could catch the most bugs in a day. They recorded their information in the pictograph below.

**Bug Catching Contest**



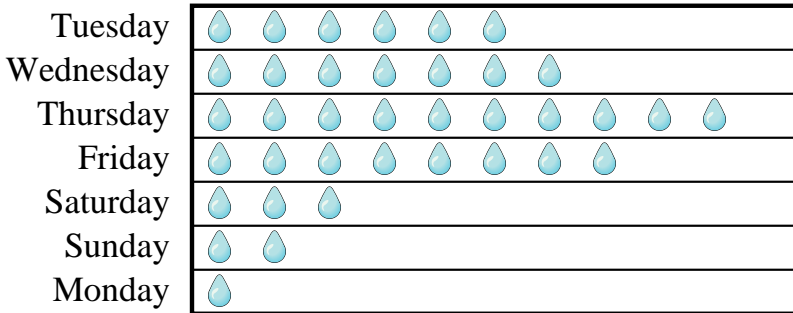
= 3 Bugs

- Who caught the fewest number of bugs?
- How many bugs did George catch?
- Who caught more bugs, Oliver or Edward?
- Who caught exactly 15 bugs?
- Who caught the greatest number of bugs?

- \_\_\_\_\_
- \_\_\_\_\_
- \_\_\_\_\_
- \_\_\_\_\_
- \_\_\_\_\_
- \_\_\_\_\_
- \_\_\_\_\_
- \_\_\_\_\_
- \_\_\_\_\_
- \_\_\_\_\_

Mr. Sanders class was performing an experiment to see which day of the week had the most rain. His class recorded their information in the pictograph below.

**Millimeters of Rain**




= 7 Millimeters of rain

- How much rain was there on Thursday?
- Did it rain more on Tuesday or Wednesday?
- Which day had the least rain?
- Which day was there exactly 56 millimeters of rain?
- Which day had the most rain?



Luke and his friends were trying to see who could catch the most bugs in a day. They recorded their information in the pictograph below.

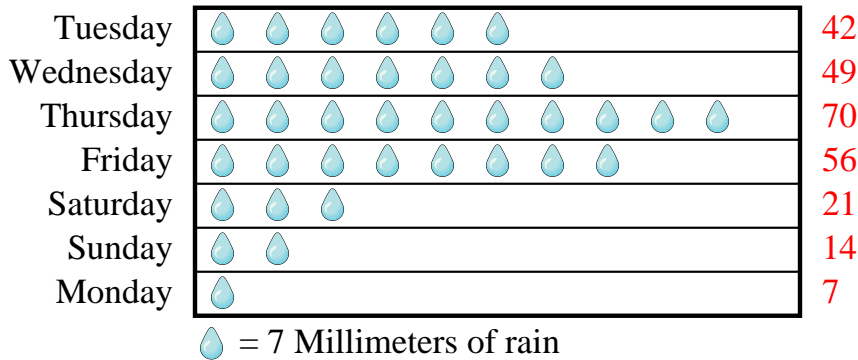
**Bug Catching Contest**



- Who caught the fewest number of bugs?
- How many bugs did George catch?
- Who caught more bugs, Oliver or Edward?
- Who caught exactly 15 bugs?
- Who caught the greatest number of bugs?

Mr. Sanders class was performing an experiment to see which day of the week had the most rain. His class recorded their information in the pictograph below.

**Millimeters of Rain**



- How much rain was there on Thursday?
- Did it rain more on Tuesday or Wednesday?
- Which day had the least rain?
- Which day was there exactly 56 millimeters of rain?
- Which day had the most rain?

Answers

- Dave
- 9
- Oliver
- Cody
- Oliver
- 70
- Wednesday
- Monday
- Friday
- Thursday