




Answers

Tom and his friends were trying to see who could catch the most bugs in a day. They recorded their information in the pictograph below.

**Bug Catching Contest**



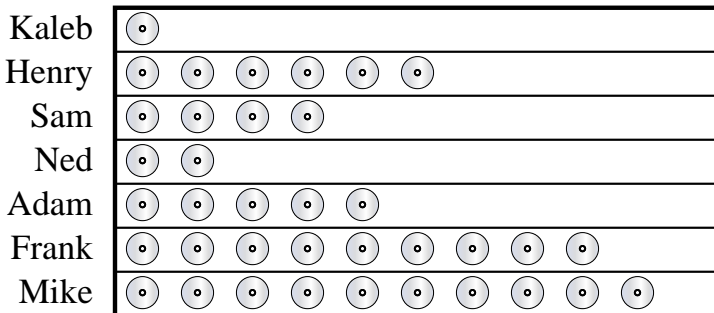
= 8 Bugs

- Who caught the greatest number of bugs?
- Who caught more bugs, Frank or Mike?
- Who caught exactly 56 bugs?
- Who caught the fewest number of bugs?
- How many bugs did Adam catch?

- \_\_\_\_\_
- \_\_\_\_\_
- \_\_\_\_\_
- \_\_\_\_\_
- \_\_\_\_\_
- \_\_\_\_\_
- \_\_\_\_\_
- \_\_\_\_\_
- \_\_\_\_\_
- \_\_\_\_\_

Henry and his friends were comparing the number of movies they owned. They organized the information in the pictograph below.

**DVDs owned**




= 5 DVDs

- Who owned the fewest DVDs?
- Who owned exactly 10 DVDs?
- Who had more DVDs, Kaleb or Henry?
- Who owned the largest number of DVDs?
- How many DVDs did Sam own?



Tom and his friends were trying to see who could catch the most bugs in a day. They recorded their information in the pictograph below.

**Bug Catching Contest**

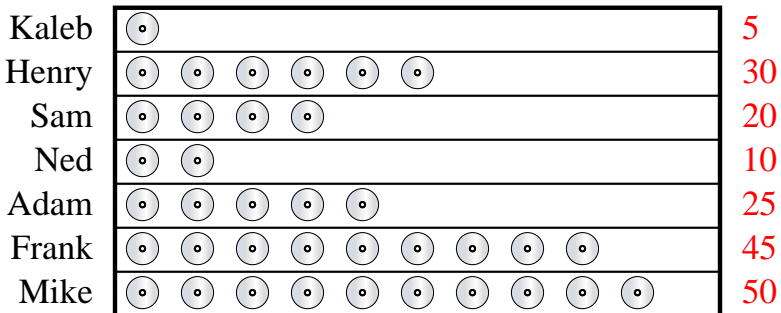


= 8 Bugs

- Who caught the greatest number of bugs?
- Who caught more bugs, Frank or Mike?
- Who caught exactly 56 bugs?
- Who caught the fewest number of bugs?
- How many bugs did Adam catch?

Henry and his friends were comparing the number of movies they owned. They organized the information in the pictograph below.

**DVDs owned**



= 5 DVDs

- Who owned the fewest DVDs?
- Who owned exactly 10 DVDs?
- Who had more DVDs, Kaleb or Henry?
- Who owned the largest number of DVDs?
- How many DVDs did Sam own?

Answers

- Henry**
- Mike**
- Henry**
- Frank**
- 24**
- Kaleb**
- Ned**
- Henry**
- Mike**
- 20**