



Determine which pictograph best represents the information in the chart.

**Answers**

1)

Name	Medals Earned
Haley	4
Bianca	10
Tom	8
Dave	6
Luke	18

2)

Name	Medals Earned
Haley	14
Bianca	10
Tom	20
Dave	4
Luke	16

3)

Name	Medals Earned
Haley	12
Bianca	8
Tom	16
Dave	4
Luke	6

4)

Name	Medals Earned
Haley	6
Bianca	2
Tom	16
Dave	8
Luke	14

5)

Name	Medals Earned
Haley	16
Bianca	6
Tom	2
Dave	8
Luke	14

6)

Name	Medals Earned
Haley	18
Bianca	16
Tom	6
Dave	20
Luke	4

1. \_\_\_\_\_

2. \_\_\_\_\_

3. \_\_\_\_\_


4. \_\_\_\_\_

5. \_\_\_\_\_






6. \_\_\_\_\_


A.

Name	Medals Earned
Haley	
Bianca	
Tom	
Dave	
Luke	

Each  = 2 medal


B.

Name	Medals Earned
Haley	
Bianca	
Tom	
Dave	
Luke	


Each  = 2 medal


C.

Name	Medals Earned
Haley	
Bianca	
Tom	
Dave	
Luke	





Each  = 2 medal


D.

Name	Medals Earned
Haley	
Bianca	
Tom	
Dave	
Luke	






Each  = 2 medal


E.

Name	Medals Earned
Haley	
Bianca	
Tom	
Dave	
Luke	

Each  = 2 medal

F.

Name	Medals Earned
Haley	
Bianca	
Tom	
Dave	
Luke	

Each  = 2 medal



Determine which pictograph best represents the information in the chart.

**Answers**

1)

Name	Medals Earned
Haley	4
Bianca	10
Tom	8
Dave	6
Luke	18

2)

Name	Medals Earned
Haley	14
Bianca	10
Tom	20
Dave	4
Luke	16

3)

Name	Medals Earned
Haley	12
Bianca	8
Tom	16
Dave	4
Luke	6

4)

Name	Medals Earned
Haley	6
Bianca	2
Tom	16
Dave	8
Luke	14

5)

Name	Medals Earned
Haley	16
Bianca	6
Tom	2
Dave	8
Luke	14


6)

Name	Medals Earned
Haley	18
Bianca	16
Tom	6
Dave	20
Luke	4




















1. **E**2. **D**3. **B**4. **F**5. **A**6. **C**


A.

Name	Medals Earned
Haley	       
Bianca	  
Tom	
Dave	   
Luke	      

Each  = 2 medal


B.

Name	Medals Earned
Haley	    
Bianca	  
Tom	     
Dave	 
Luke	  





















Each  = 2 medal


C.

Name	Medals Earned
Haley	       
Bianca	     
Tom	  
Dave	      
Luke	 

Each  = 2 medal


D.

Name	Medals Earned
Haley	    
Bianca	  
Tom	     
Dave	 
Luke	   

















Each  = 2 medal


E.

Name	Medals Earned
Haley	 
Bianca	    
Tom	   
Dave	  
Luke	     

Each  = 2 medal

F.

Name	Medals Earned
Haley	  
Bianca	
Tom	    
Dave	  
Luke	   

Each  = 2 medal