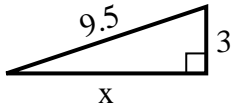




Find the value of X.

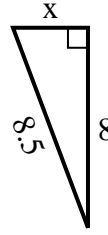
1) perimeter = 21.5 u



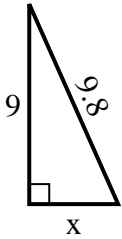
2) perimeter = 20.2 u



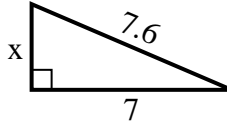
3) perimeter = 19.5 u



4) perimeter = 22.8 u



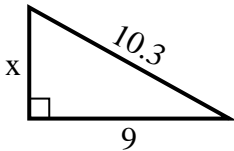
5) perimeter = 17.6 u



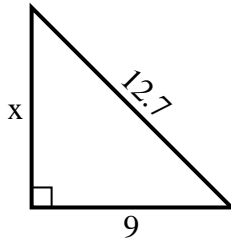
6) perimeter = 14.3 u



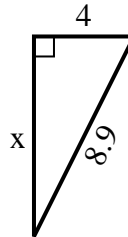
7) perimeter = 24.3 u



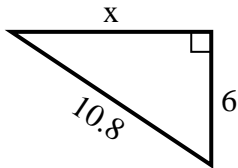
8) perimeter = 30.7 u



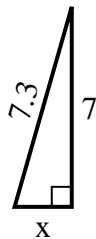
9) perimeter = 20.9 u



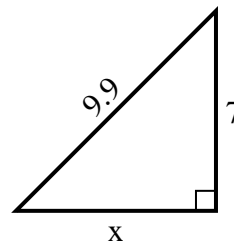
10) perimeter = 25.8 u



11) perimeter = 16.3 u



12) perimeter = 23.9 u



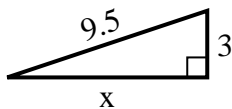
Answers

1. _____
2. _____
3. _____
4. _____
5. _____
6. _____
7. _____
8. _____
9. _____
10. _____
11. _____
12. _____



Find the value of X.

1) perimeter = 21.5 u



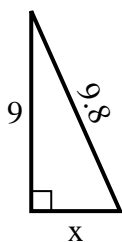
2) perimeter = 20.2 u



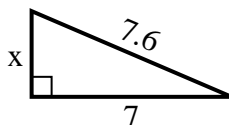
3) perimeter = 19.5 u



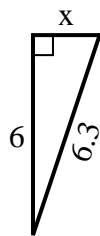
4) perimeter = 22.8 u



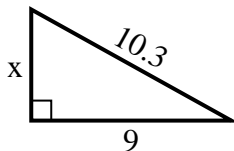
5) perimeter = 17.6 u



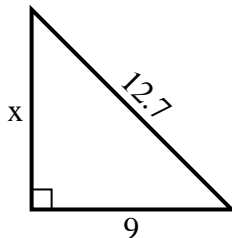
6) perimeter = 14.3 u



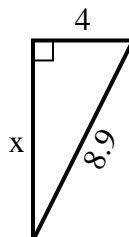
7) perimeter = 24.3 u



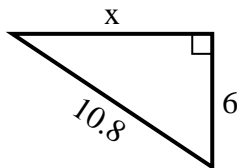
8) perimeter = 30.7 u



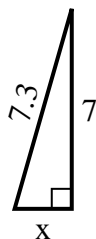
9) perimeter = 20.9 u



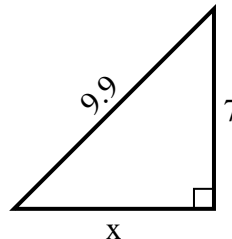
10) perimeter = 25.8 u



11) perimeter = 16.3 u



12) perimeter = 23.9 u



Answers

1. 9

2. 2

3. 3

4. 4

5. 3

6. 2

7. 5

8. 9

9. 8

10. 9

11. 2

12. 7