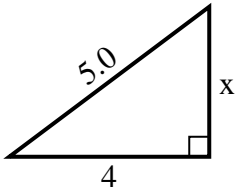


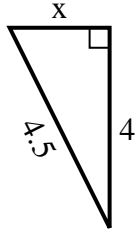


Find the value of X.

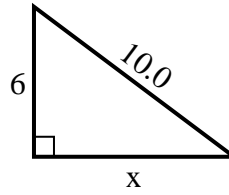
1) perimeter = 12 u



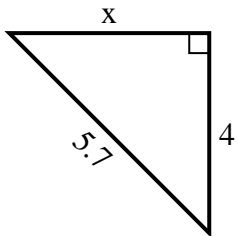
2) perimeter = 10.5 u



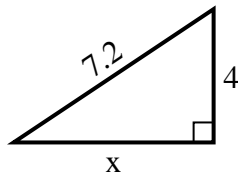
3) perimeter = 24 u



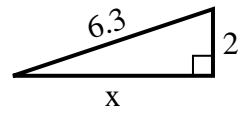
4) perimeter = 13.7 u



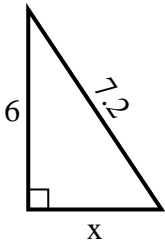
5) perimeter = 17.2 u



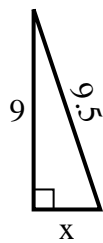
6) perimeter = 14.3 u



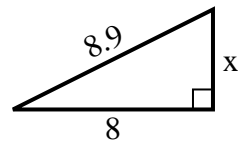
7) perimeter = 17.2 u



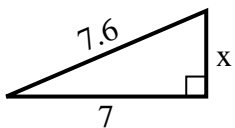
8) perimeter = 21.5 u



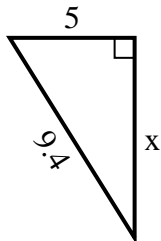
9) perimeter = 20.9 u



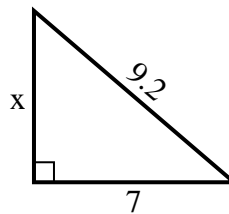
10) perimeter = 17.6 u



11) perimeter = 22.4 u



12) perimeter = 22.2 u



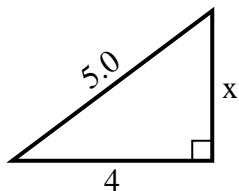
**Answers**

1. \_\_\_\_\_
2. \_\_\_\_\_
3. \_\_\_\_\_
4. \_\_\_\_\_
5. \_\_\_\_\_
6. \_\_\_\_\_
7. \_\_\_\_\_
8. \_\_\_\_\_
9. \_\_\_\_\_
10. \_\_\_\_\_
11. \_\_\_\_\_
12. \_\_\_\_\_

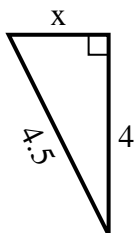


Find the value of X.

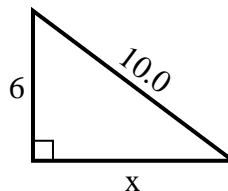
1) perimeter = 12 u



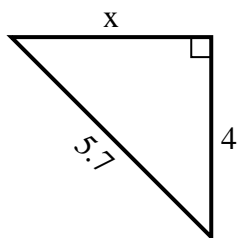
2) perimeter = 10.5 u



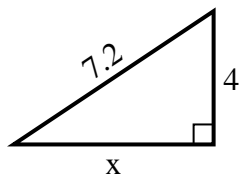
3) perimeter = 24 u



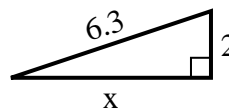
4) perimeter = 13.7 u



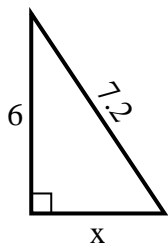
5) perimeter = 17.2 u



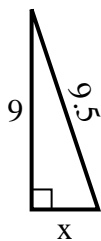
6) perimeter = 14.3 u



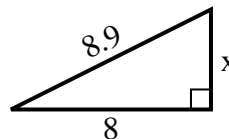
7) perimeter = 17.2 u



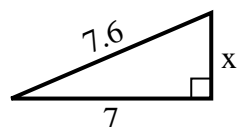
8) perimeter = 21.5 u



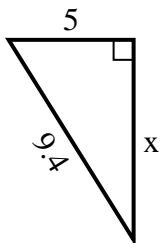
9) perimeter = 20.9 u



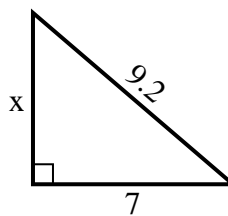
10) perimeter = 17.6 u



11) perimeter = 22.4 u



12) perimeter = 22.2 u



Answers

1. 3

2. 2

3. 8

4. 4

5. 6

6. 6

7. 4

8. 3

9. 4

10. 3

11. 8

12. 6