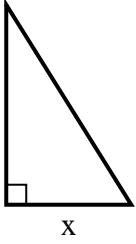


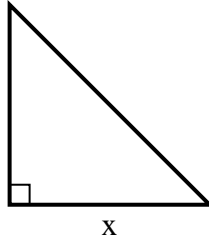


Find the value of X.

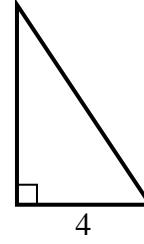
1) area =  $20 u^2$



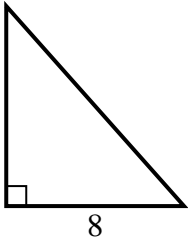
2) area =  $32 u^2$



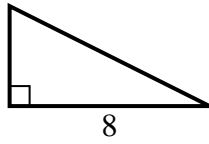
3) area =  $12 u^2$



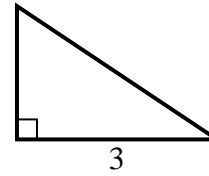
4) area =  $36 u^2$



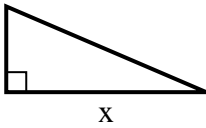
5) area =  $16 u^2$



6) area =  $3 u^2$



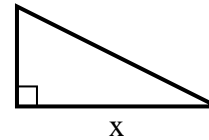
7) area =  $10.5 u^2$



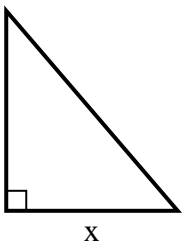
8) area =  $18 u^2$



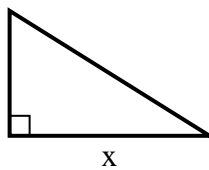
9) area =  $4 u^2$



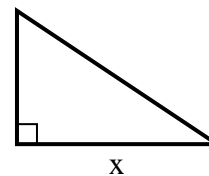
10) area =  $21 u^2$



11) area =  $20 u^2$



12) area =  $12 u^2$



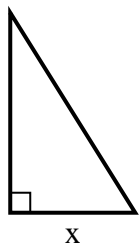
**Answers**

1. \_\_\_\_\_
2. \_\_\_\_\_
3. \_\_\_\_\_
4. \_\_\_\_\_
5. \_\_\_\_\_
6. \_\_\_\_\_
7. \_\_\_\_\_
8. \_\_\_\_\_
9. \_\_\_\_\_
10. \_\_\_\_\_
11. \_\_\_\_\_
12. \_\_\_\_\_

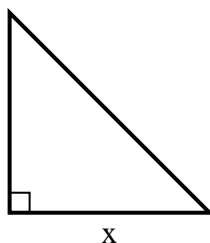


Find the value of X.

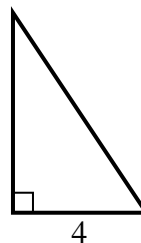
1) area =  $20 u^2$



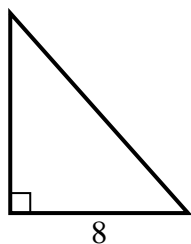
2) area =  $32 u^2$



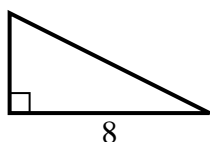
3) area =  $12 u^2$



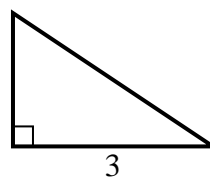
4) area =  $36 u^2$



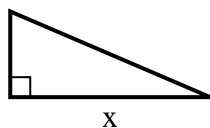
5) area =  $16 u^2$



6) area =  $3 u^2$



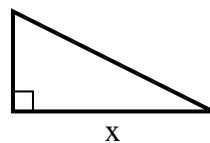
7) area =  $10.5 u^2$



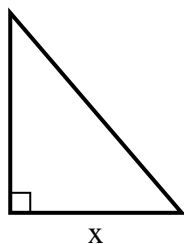
8) area =  $18 u^2$



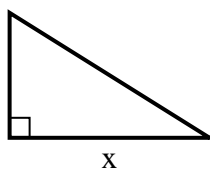
9) area =  $4 u^2$



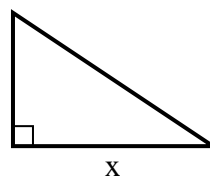
10) area =  $21 u^2$



11) area =  $20 u^2$



12) area =  $12 u^2$



Answers

1. 5

2. 8

3. 6

4. 9

5. 4

6. 2

7. 7

8. 9

9. 4

10. 6

11. 8

12. 6