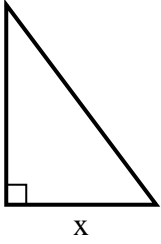


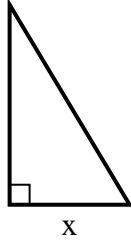


Find the value of X.

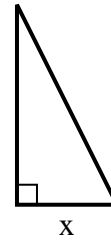
1) area =  $24 u^2$



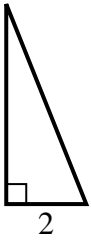
2) area =  $7.5 u^2$



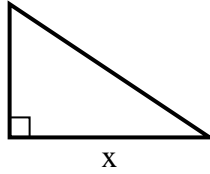
3) area =  $9 u^2$



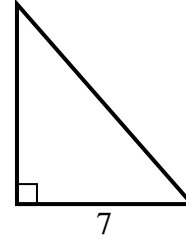
4) area =  $5 u^2$



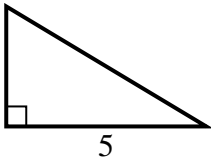
5) area =  $27 u^2$



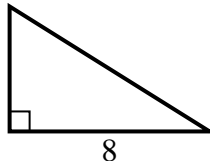
6) area =  $28 u^2$



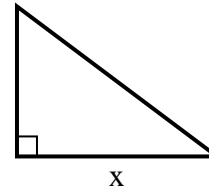
7) area =  $7.5 u^2$



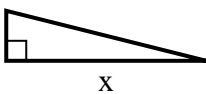
8) area =  $20 u^2$



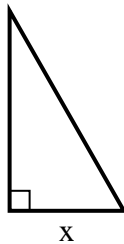
9) area =  $6 u^2$



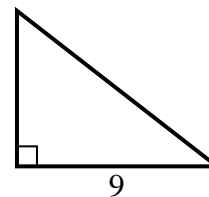
10) area =  $8 u^2$



11) area =  $14 u^2$



12) area =  $31.5 u^2$



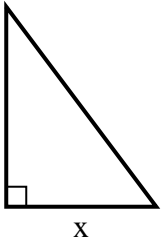
**Answers**

1. \_\_\_\_\_
2. \_\_\_\_\_
3. \_\_\_\_\_
4. \_\_\_\_\_
5. \_\_\_\_\_
6. \_\_\_\_\_
7. \_\_\_\_\_
8. \_\_\_\_\_
9. \_\_\_\_\_
10. \_\_\_\_\_
11. \_\_\_\_\_
12. \_\_\_\_\_

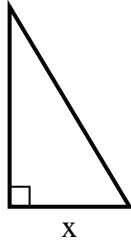


Find the value of X.

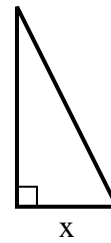
1) area =  $24 u^2$



2) area =  $7.5 u^2$



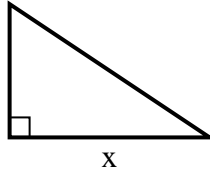
3) area =  $9 u^2$



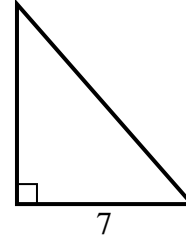
4) area =  $5 u^2$



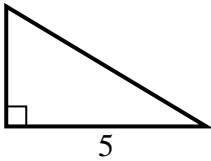
5) area =  $27 u^2$



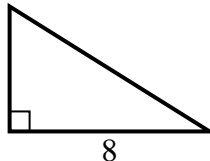
6) area =  $28 u^2$



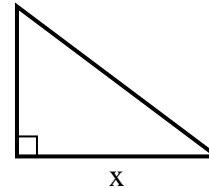
7) area =  $7.5 u^2$



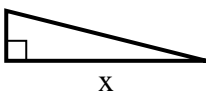
8) area =  $20 u^2$



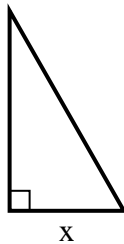
9) area =  $6 u^2$



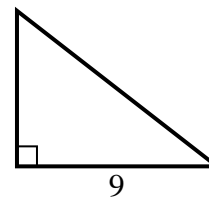
10) area =  $8 u^2$



11) area =  $14 u^2$



12) area =  $31.5 u^2$



Answers

1. 6

2. 3

3. 3

4. 5

5. 9

6. 8

7. 3

8. 5

9. 4

10. 8

11. 4

12. 7