



Determine which letter best represents the weight.

Gram (g)

A gram is about the weight of a paperclip.



Kilogram (kg)

A kilogram is about the weight of a thick book.




Remember:

Kilo means 1,000. So a kilogram is 1,000 grams.
1 Kilogram is also about the same weight as 2 pounds.

Answers

1. _____
2. _____
3. _____
4. _____
5. _____
6. _____
7. _____
8. _____
9. _____

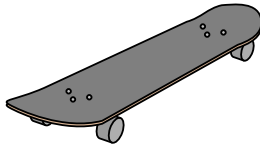
1)



Notebook Paper

- A. 1 kilogram
- B. 3 grams
- C. 500 grams
- D. 85 grams

2)



Skateboard

- A. 20 grams
- B. 15 kilograms
- C. 2 kilograms
- D. 200 grams


3)



Broom

- A. 500 grams
- B. 10 kilograms
- C. 10 grams
- D. 200 kilograms

4)



Pear

- A. 2 kilograms
- B. 170 kilograms
- C. 170 grams
- D. 2 grams

5)



Lawn Mower

- A. 500 grams
- B. 100 kilograms
- C. 200 grams
- D. 22 kilograms

6)



File Cabinet

- A. 55 kilograms
- B. 1 gram
- C. 300 grams
- D. 1 kilogram

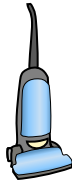
7)



Wrist Watch

- A. 1 gram
- B. 90 grams
- C. 1 kilogram
- D. 500 kilograms


8)



Vacuum

- A. 20 kilograms
- B. 90 grams
- C. 500 kilograms
- D. 50 grams

9)



Apple

- A. 5 grams
- B. 200 kilograms
- C. 200 grams
- D. 5 kilograms



Determine which letter best represents the weight.

Gram (g)

A gram is about the weight of a paperclip.



Kilogram (kg)

A kilogram is about the weight of a thick book.




Remember:

Kilo means 1,000. So a kilogram is 1,000 grams.

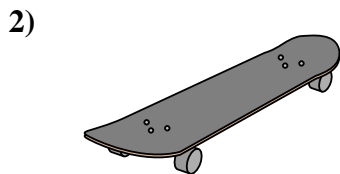
1 Kilogram is also about the same weight as 2 pounds.

Answers



Notebook Paper

- A. 1 kilogram
- B. 3 grams
- C. 500 grams
- D. 85 grams




Skateboard

- A. 20 grams
- B. 15 kilograms
- C. 2 kilograms
- D. 200 grams



Broom

- A. 500 grams
- B. 10 kilograms
- C. 10 grams
- D. 200 kilograms



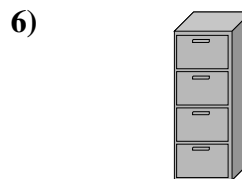
Pear

- A. 2 kilograms
- B. 170 kilograms
- C. 170 grams
- D. 2 grams




Lawn Mower

- A. 500 grams
- B. 100 kilograms
- C. 200 grams
- D. 22 kilograms



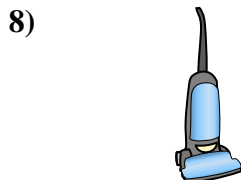
File Cabinet

- A. 55 kilograms
- B. 1 gram
- C. 300 grams
- D. 1 kilogram




Wrist Watch

- A. 1 gram
- B. 90 grams
- C. 1 kilogram
- D. 500 kilograms



Vacuum

- A. 20 kilograms
- B. 90 grams
- C. 500 kilograms
- D. 50 grams



Apple

- A. 5 grams
- B. 200 kilograms
- C. 200 grams
- D. 5 kilograms

- 1. **B**
- 2. **C**
- 3. **A**
- 4. **C**
- 5. **D**
- 6. **A**
- 7. **B**
- 8. **A**
- 9. **C**