




Determine which letter best represents the weight.

Ounce (oz)

An ounce is about the weight of a slice of bread.



Pound (lb)

A pound is about the weight of a can of vegetables.



Remember:

There are 16 ounces in 1 pound.

Answers

1. _____
2. _____
3. _____
4. _____
5. _____
6. _____
7. _____
8. _____
9. _____

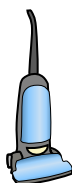
1)



File Cabinet

- A. 2 pounds
- B. 11 ounces
- C. 160 ounces
- D. 120 pounds

2)



Vacuum


- A. 1100 pounds
- B. 35 pounds
- C. 2 ounces
- D. 3 ounces

3)

Screw

- A. 0.04 ounces
- B. 2 pounds
- C. 10 ounces
- D. 1 pound

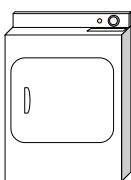
4)



Adult Horse

- A. 14 ounces
- B. 900 pounds
- C. 1 ounce
- D. 100 pounds


5)



Clothes Dryer

- A. 110 pounds
- B. 1 ounce
- C. 160 ounces
- D. 7 pounds

6)



Notebook Paper

- A. 3 ounces
- B. 10 ounces
- C. 2 pounds
- D. 0.1 ounces

7)

Big Screen TV

- A. 2000 pounds
- B. 160 ounces
- C. 1.25 ounces
- D. 40 pounds

8)



Lawn Mower

- A. 100 ounces
- B. 200 ounces
- C. 200 pounds
- D. 50 pounds

9)



Candle

- A. 0.2 ounces
- B. 16 ounces
- C. 1 pound
- D. 20 pounds




Determine which letter best represents the weight.

Ounce (oz)

Pound (lb)

An ounce is about the weight of a slice of bread.

A pound is about the weight of a can of vegetables.



Remember:
There are 16 ounces in 1 pound.

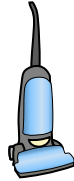
Answers

1)



- File Cabinet
 A. 2 pounds
 B. 11 ounces
 C. 160 ounces
 D. 120 pounds

2)




- Vacuum
 A. 1100 pounds
 B. 35 pounds
 C. 2 ounces
 D. 3 ounces

3)

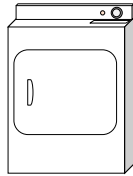
- Screw
 A. 0.04 ounces
 B. 2 pounds
 C. 10 ounces
 D. 1 pound

4)




- Adult Horse
 A. 14 ounces
 B. 900 pounds
 C. 1 ounce
 D. 100 pounds

5)



- Clothes Dryer
 A. 110 pounds
 B. 1 ounce
 C. 160 ounces
 D. 7 pounds

6)




- Notebook Paper
 A. 3 ounces
 B. 10 ounces
 C. 2 pounds
 D. 0.1 ounces

7)

- Big Screen TV
 A. 2000 pounds
 B. 160 ounces
 C. 1.25 ounces
 D. 40 pounds

8)



- Lawn Mower
 A. 100 ounces
 B. 200 ounces
 C. 200 pounds
 D. 50 pounds

9)



- Candle
 A. 0.2 ounces
 B. 16 ounces
 C. 1 pound
 D. 20 pounds

1. **D**
2. **B**
3. **A**
4. **B**
5. **A**
6. **D**
7. **D**
8. **D**
9. **A**