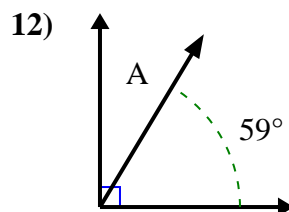
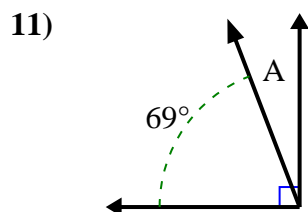
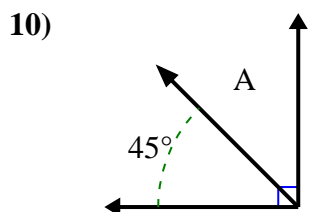
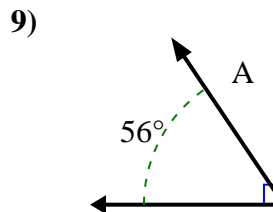
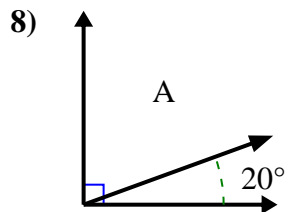
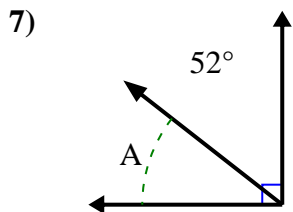
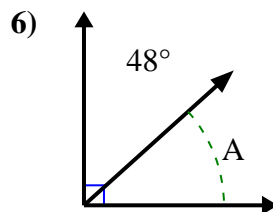
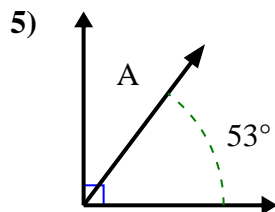
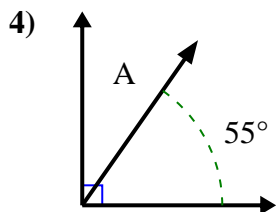
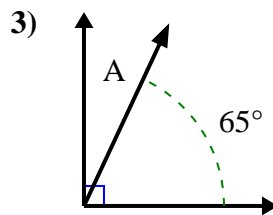
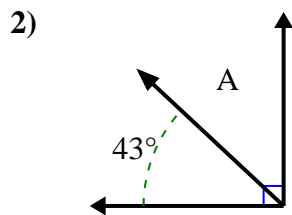
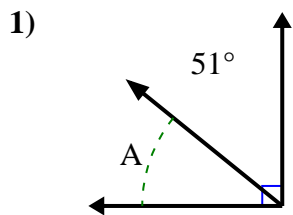




Find the value of 'A' in the set of complementary angles.

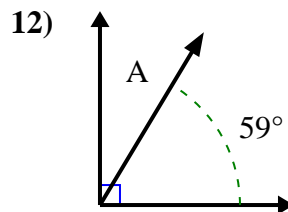
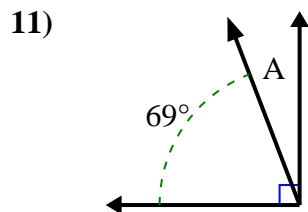
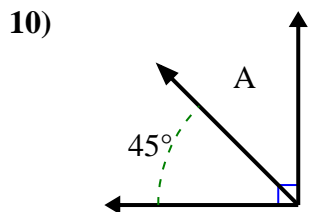
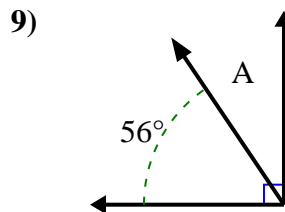
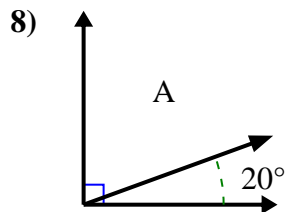
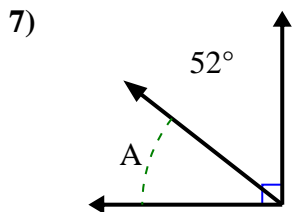
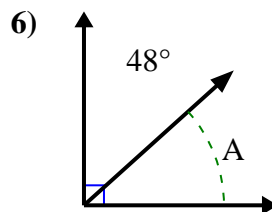
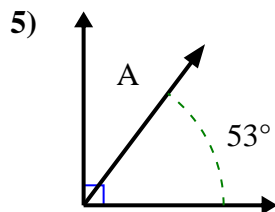
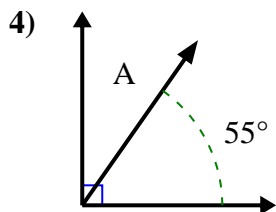
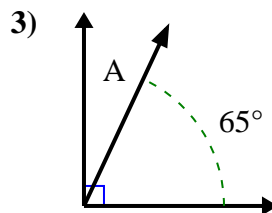
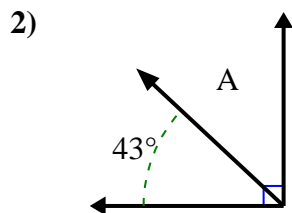
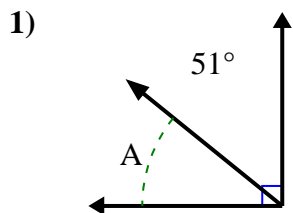


Answers

1. \_\_\_\_\_
2. \_\_\_\_\_
3. \_\_\_\_\_
4. \_\_\_\_\_
5. \_\_\_\_\_
6. \_\_\_\_\_
7. \_\_\_\_\_
8. \_\_\_\_\_
9. \_\_\_\_\_
10. \_\_\_\_\_
11. \_\_\_\_\_
12. \_\_\_\_\_



Find the value of 'A' in the set of complementary angles.



Answers

1. 39°

2. 47°

3. 25°

4. 35°

5. 37°

6. 42°

7. 38°

8. 70°

9. 34°

10. 45°

11. 21°

12. 31°