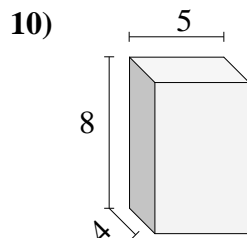
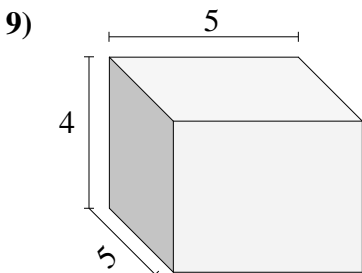
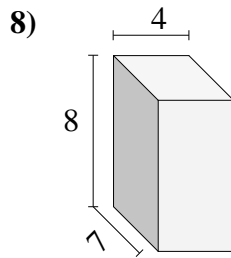
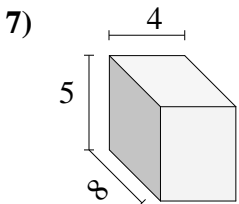
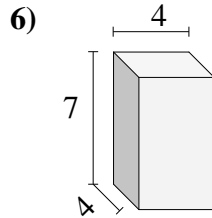
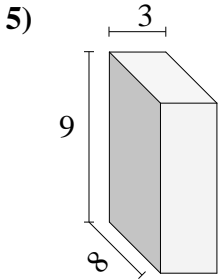
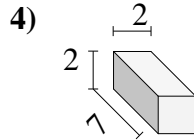
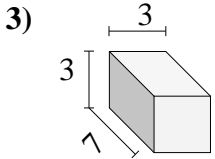
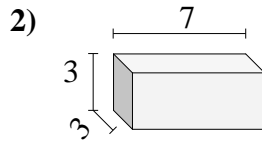
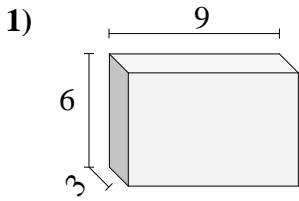




Find the volume of each of the rectangular prisms. Measured in cm (not to scale).

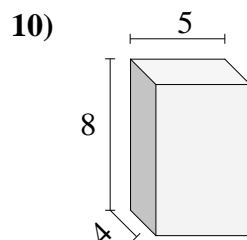
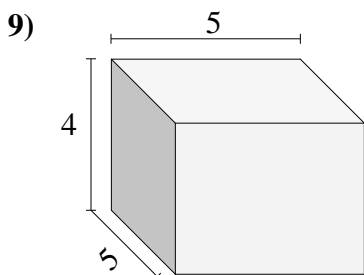
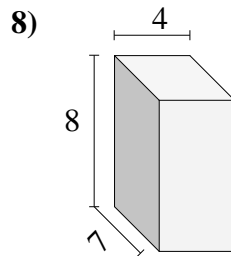
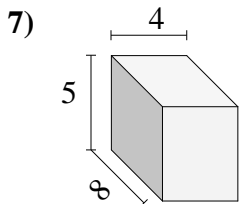
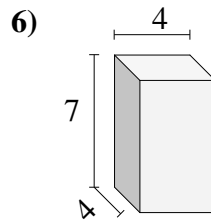
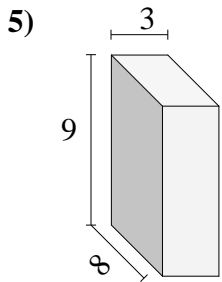
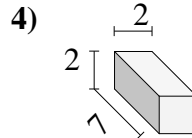
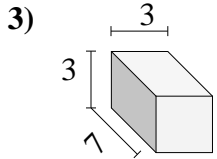
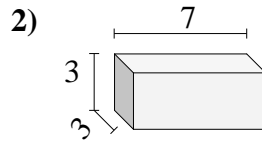
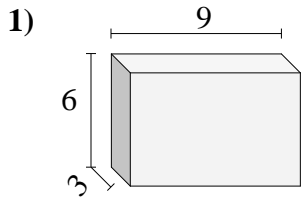


Answers

- 1. \_\_\_\_\_
- 2. \_\_\_\_\_
- 3. \_\_\_\_\_
- 4. \_\_\_\_\_
- 5. \_\_\_\_\_
- 6. \_\_\_\_\_
- 7. \_\_\_\_\_
- 8. \_\_\_\_\_
- 9. \_\_\_\_\_
- 10. \_\_\_\_\_

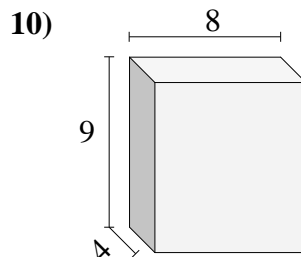
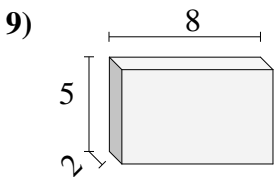
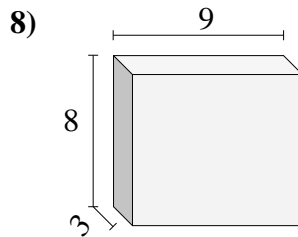
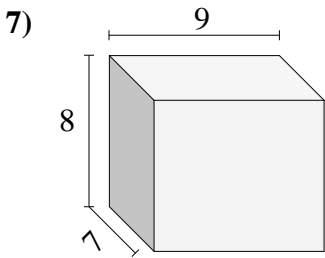
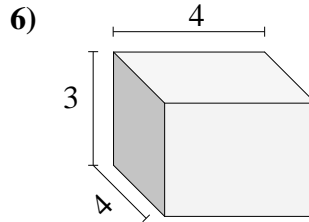
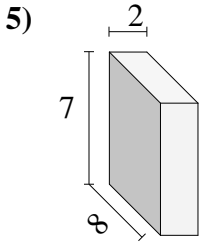
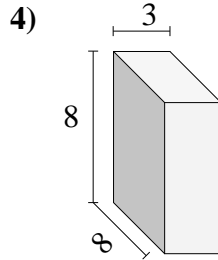
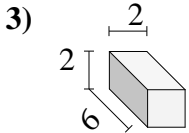
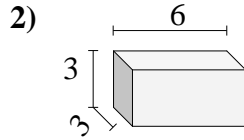
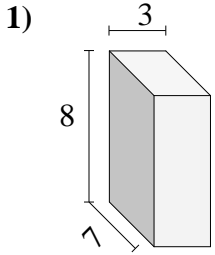


Find the volume of each of the rectangular prisms. Measured in cm (not to scale).

Answers1. 1622. 633. 634. 285. 2166. 1127. 1608. 2249. 10010. 160



Find the volume of each of the rectangular prisms. Measured in cm (not to scale).

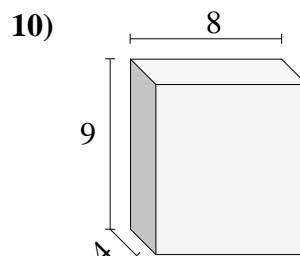
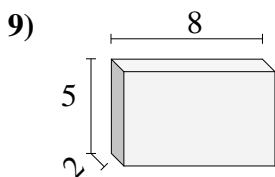
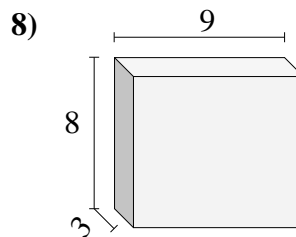
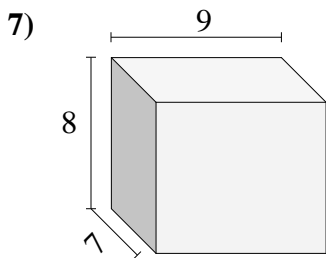
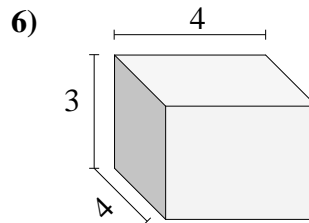
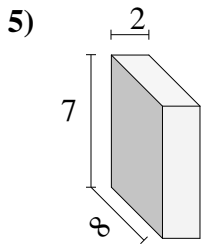
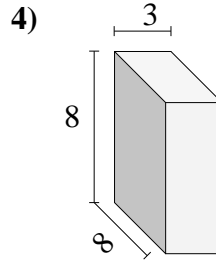
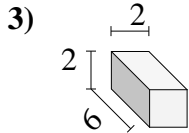
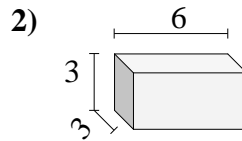
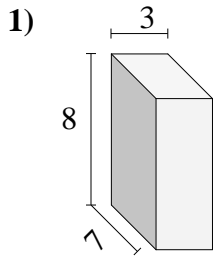


Answers

- 1. \_\_\_\_\_
- 2. \_\_\_\_\_
- 3. \_\_\_\_\_
- 4. \_\_\_\_\_
- 5. \_\_\_\_\_
- 6. \_\_\_\_\_
- 7. \_\_\_\_\_
- 8. \_\_\_\_\_
- 9. \_\_\_\_\_
- 10. \_\_\_\_\_

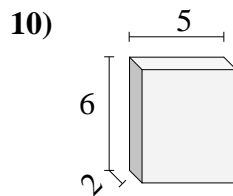
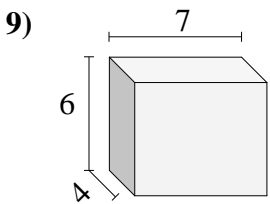
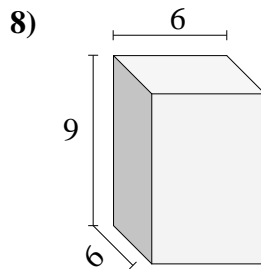
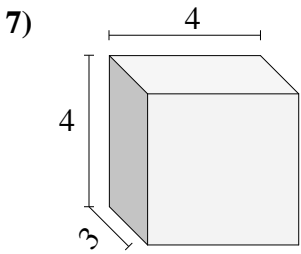
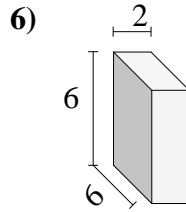
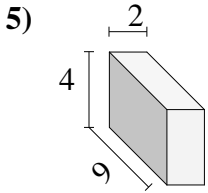
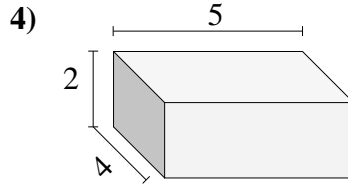
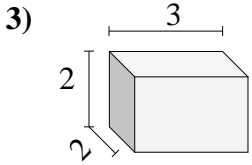
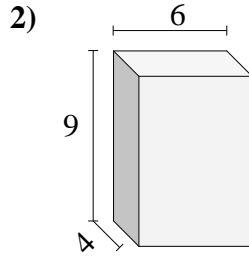
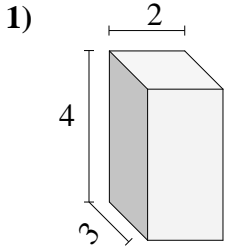


Find the volume of each of the rectangular prisms. Measured in cm (not to scale).

Answers1. 1682. 543. 244. 1925. 1126. 487. 5048. 2169. 8010. 288



Find the volume of each of the rectangular prisms. Measured in cm (not to scale).

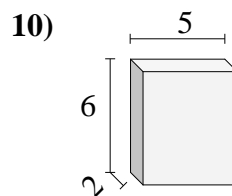
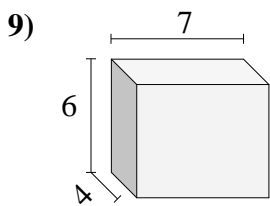
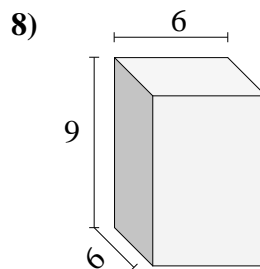
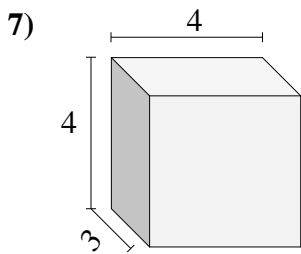
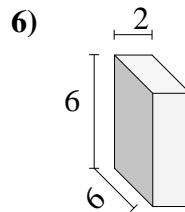
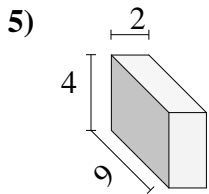
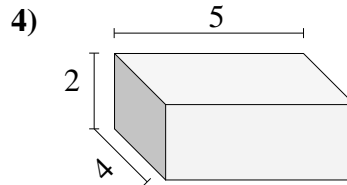
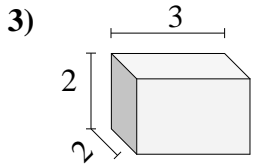
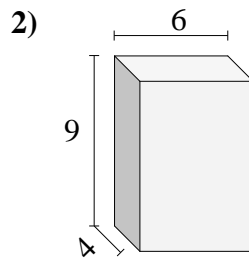
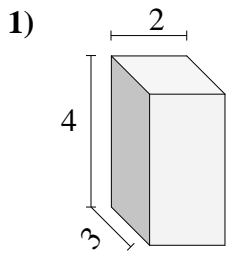


Answers

- 1. \_\_\_\_\_
- 2. \_\_\_\_\_
- 3. \_\_\_\_\_
- 4. \_\_\_\_\_
- 5. \_\_\_\_\_
- 6. \_\_\_\_\_
- 7. \_\_\_\_\_
- 8. \_\_\_\_\_
- 9. \_\_\_\_\_
- 10. \_\_\_\_\_

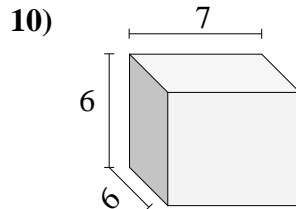
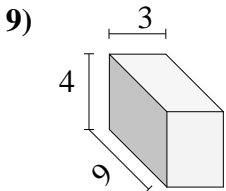
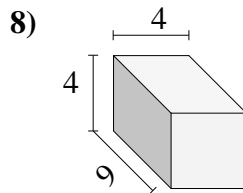
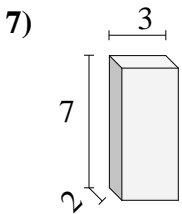
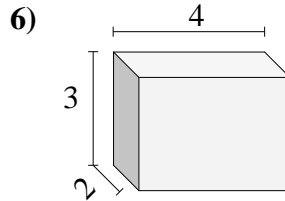
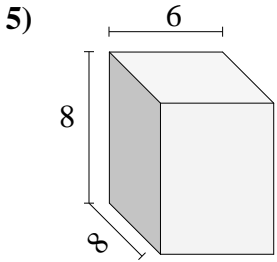
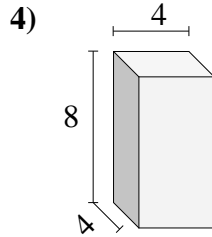
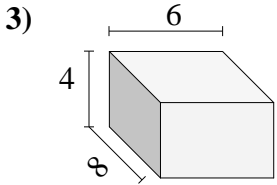
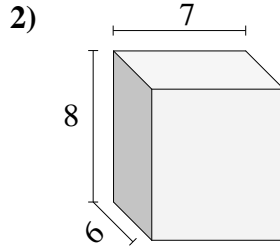
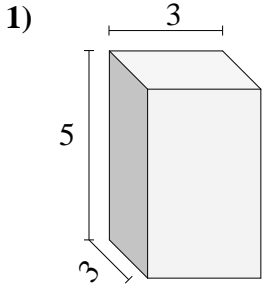


Find the volume of each of the rectangular prisms. Measured in cm (not to scale).

Answers1. 242. 2163. 124. 405. 726. 727. 488. 3249. 16810. 60



Find the volume of each of the rectangular prisms. Measured in cm (not to scale).

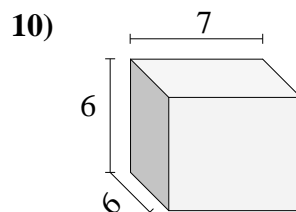
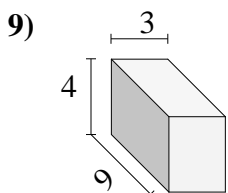
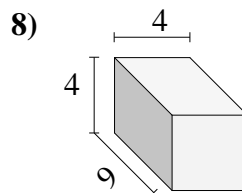
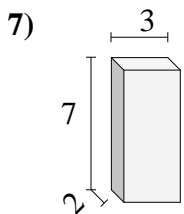
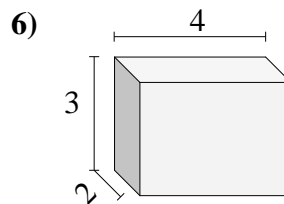
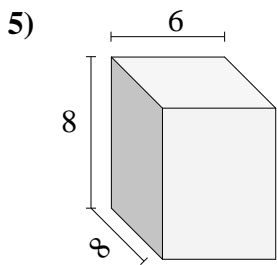
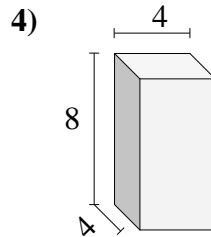
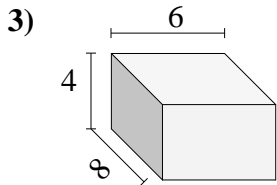
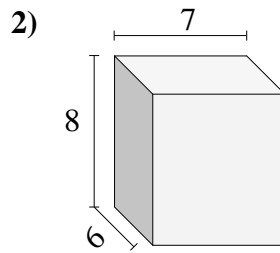
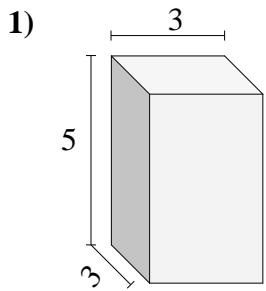


Answers

- 1. \_\_\_\_\_
- 2. \_\_\_\_\_
- 3. \_\_\_\_\_
- 4. \_\_\_\_\_
- 5. \_\_\_\_\_
- 6. \_\_\_\_\_
- 7. \_\_\_\_\_
- 8. \_\_\_\_\_
- 9. \_\_\_\_\_
- 10. \_\_\_\_\_



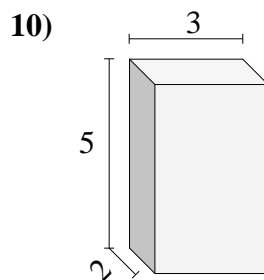
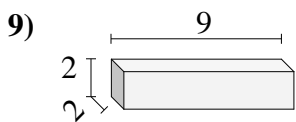
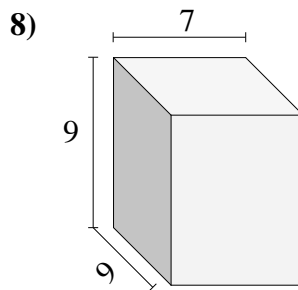
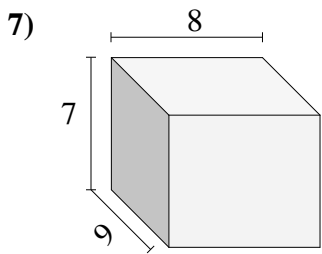
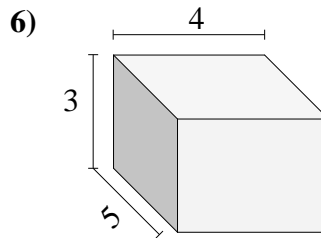
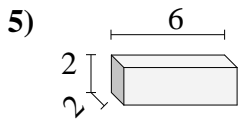
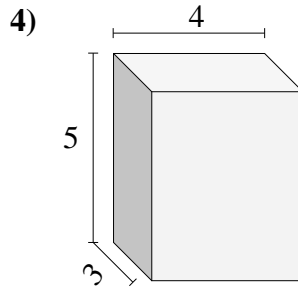
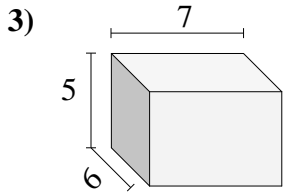
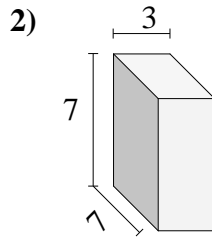
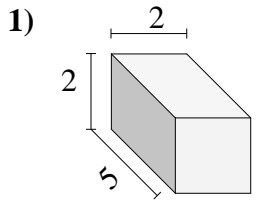
Find the volume of each of the rectangular prisms. Measured in cm (not to scale).

Answers1. 452. 3363. 1924. 1285. 3846. 247. 428. 1449. 10810. 252





Find the volume of each of the rectangular prisms. Measured in cm (not to scale).

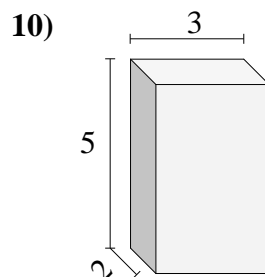
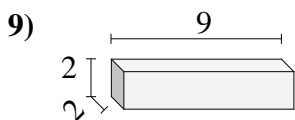
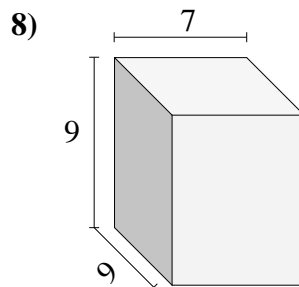
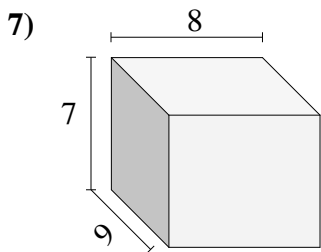
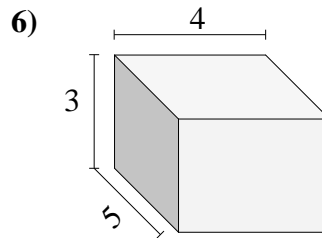
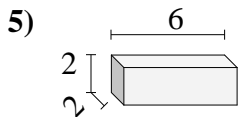
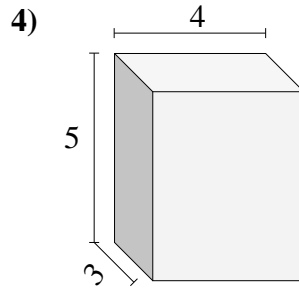
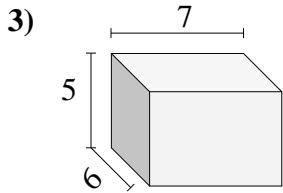
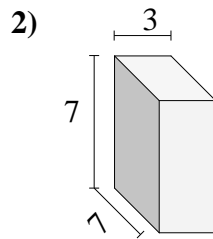
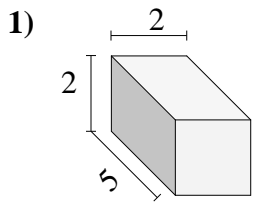


Answers

- 1. \_\_\_\_\_
- 2. \_\_\_\_\_
- 3. \_\_\_\_\_
- 4. \_\_\_\_\_
- 5. \_\_\_\_\_
- 6. \_\_\_\_\_
- 7. \_\_\_\_\_
- 8. \_\_\_\_\_
- 9. \_\_\_\_\_
- 10. \_\_\_\_\_

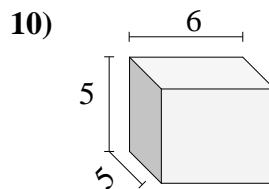
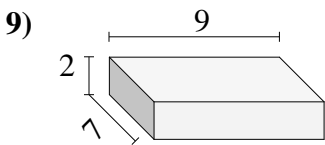
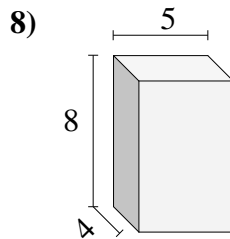
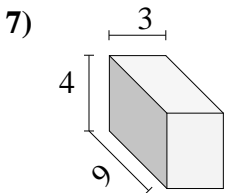
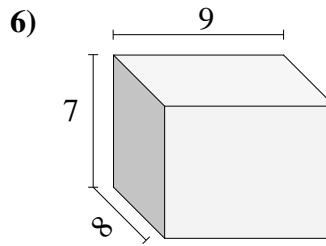
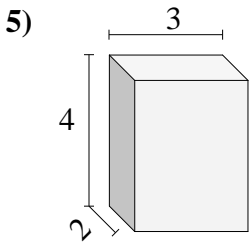
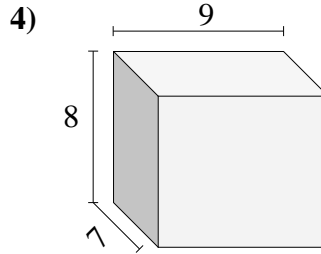
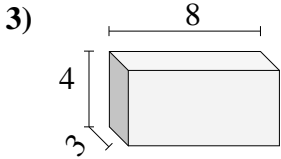
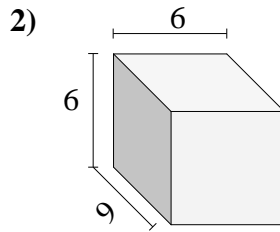
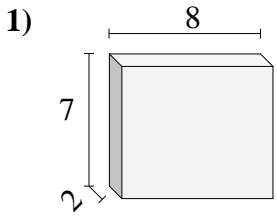


Find the volume of each of the rectangular prisms. Measured in cm (not to scale).

Answers1. 202. 1473. 2104. 605. 246. 607. 5048. 5679. 3610. 30



Find the volume of each of the rectangular prisms. Measured in cm (not to scale).

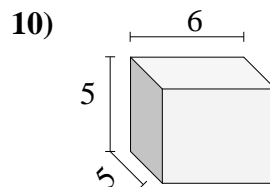
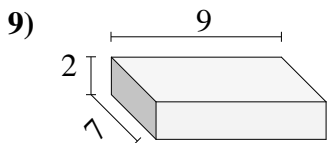
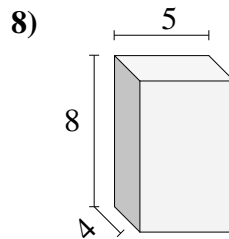
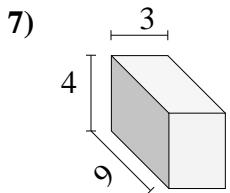
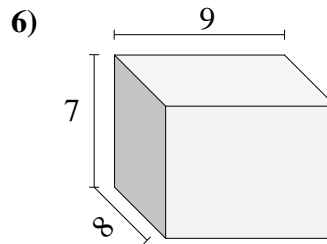
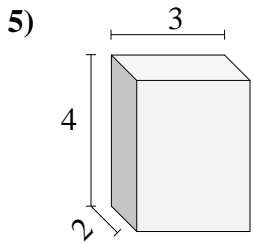
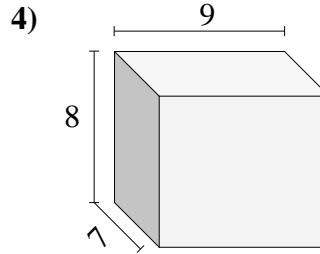
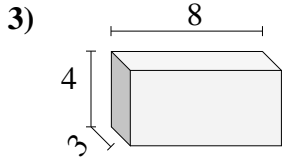
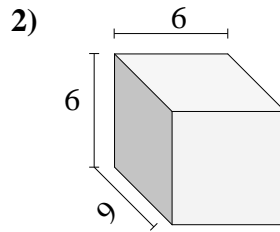
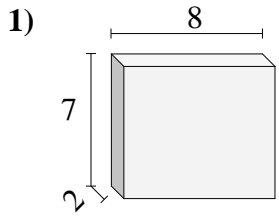


Answers

- 1. \_\_\_\_\_
- 2. \_\_\_\_\_
- 3. \_\_\_\_\_
- 4. \_\_\_\_\_
- 5. \_\_\_\_\_
- 6. \_\_\_\_\_
- 7. \_\_\_\_\_
- 8. \_\_\_\_\_
- 9. \_\_\_\_\_
- 10. \_\_\_\_\_

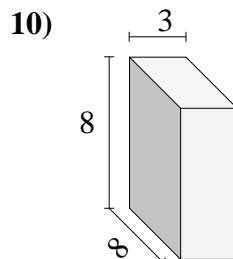
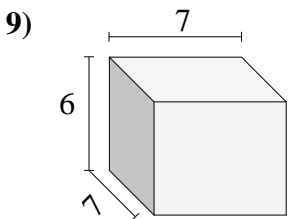
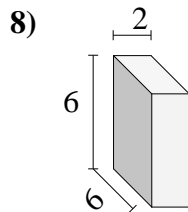
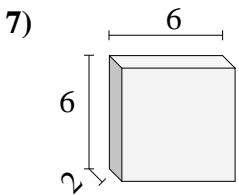
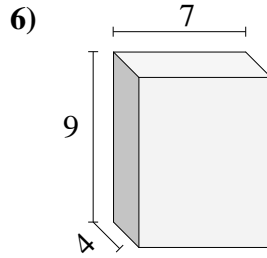
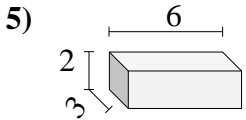
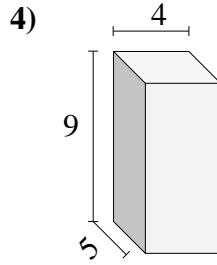
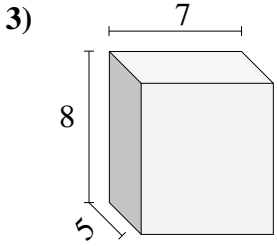
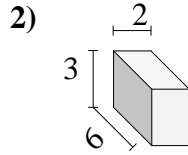
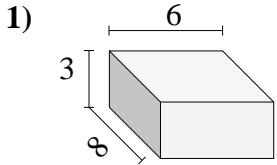


Find the volume of each of the rectangular prisms. Measured in cm (not to scale).

Answers1. 1122. 3243. 964. 5045. 246. 5047. 1088. 1609. 12610. 150



Find the volume of each of the rectangular prisms. Measured in cm (not to scale).

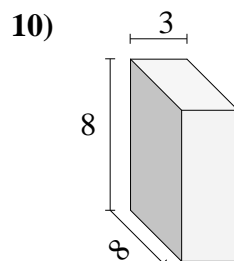
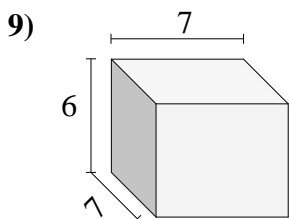
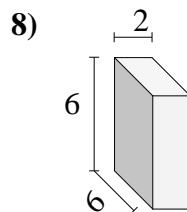
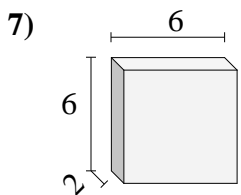
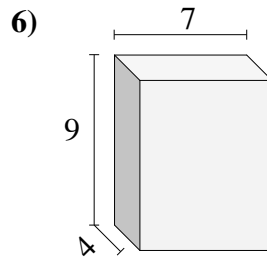
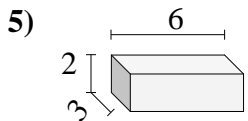
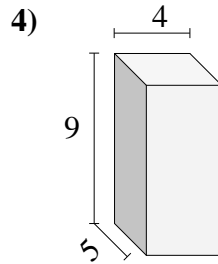
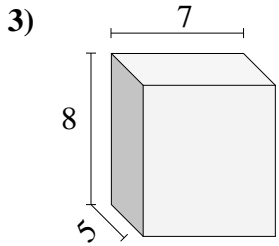
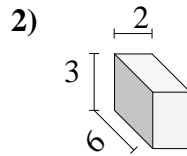
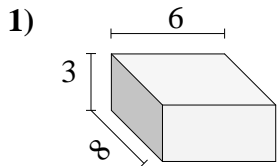


Answers

- 1. \_\_\_\_\_
- 2. \_\_\_\_\_
- 3. \_\_\_\_\_
- 4. \_\_\_\_\_
- 5. \_\_\_\_\_
- 6. \_\_\_\_\_
- 7. \_\_\_\_\_
- 8. \_\_\_\_\_
- 9. \_\_\_\_\_
- 10. \_\_\_\_\_

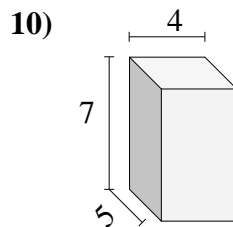
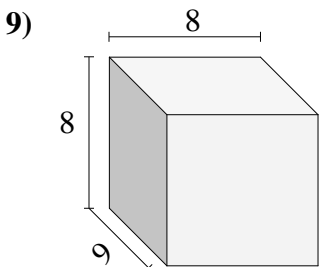
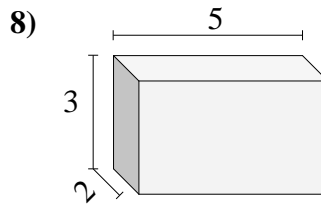
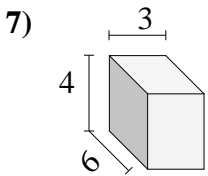
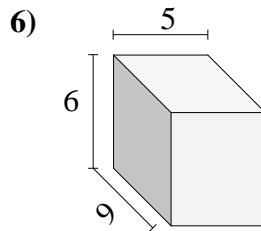
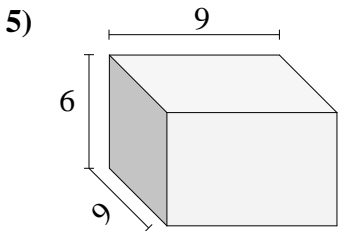
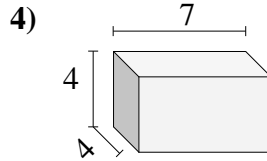
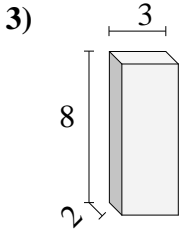
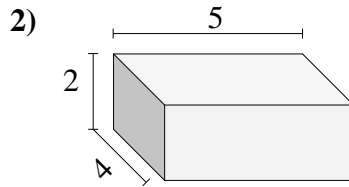
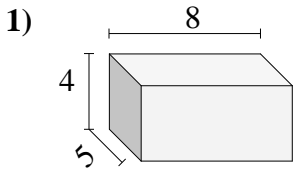


Find the volume of each of the rectangular prisms. Measured in cm (not to scale).

Answers1. 1442. 363. 2804. 1805. 366. 2527. 728. 729. 29410. 192



Find the volume of each of the rectangular prisms. Measured in cm (not to scale).

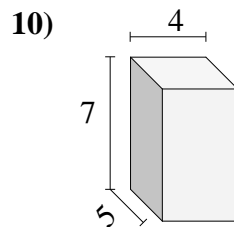
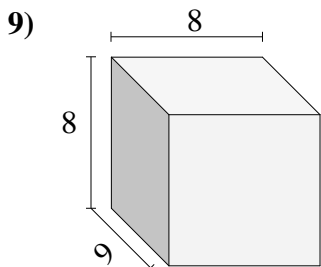
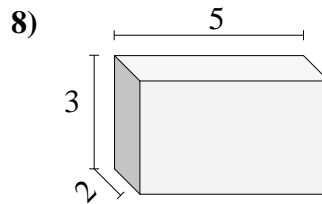
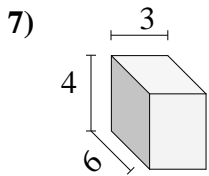
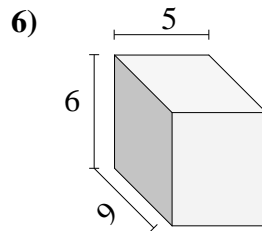
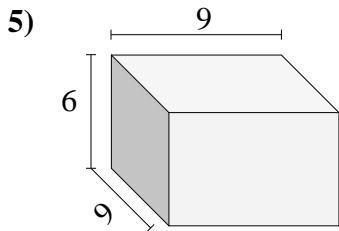
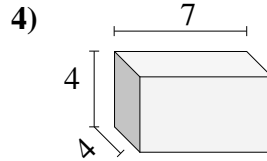
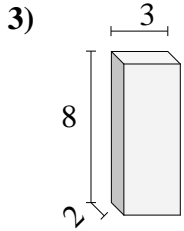
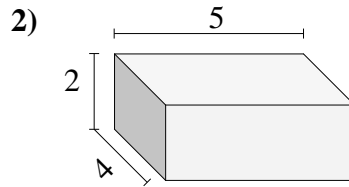
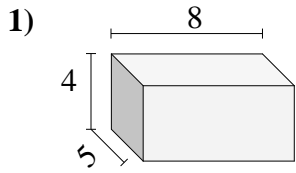


Answers

- 1. \_\_\_\_\_
- 2. \_\_\_\_\_
- 3. \_\_\_\_\_
- 4. \_\_\_\_\_
- 5. \_\_\_\_\_
- 6. \_\_\_\_\_
- 7. \_\_\_\_\_
- 8. \_\_\_\_\_
- 9. \_\_\_\_\_
- 10. \_\_\_\_\_



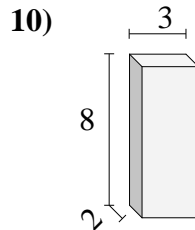
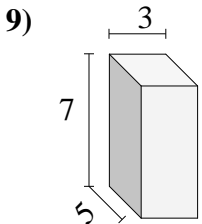
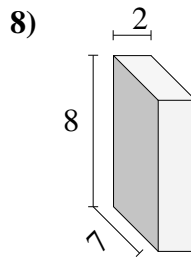
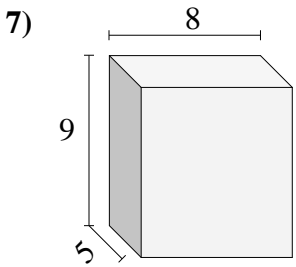
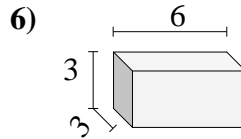
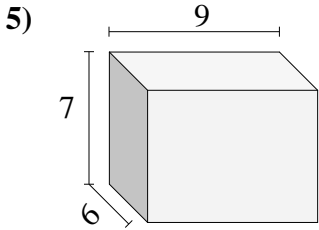
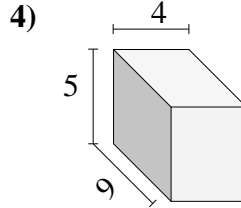
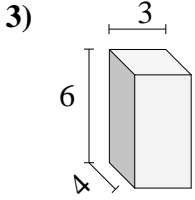
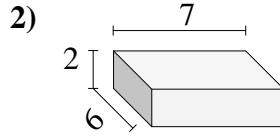
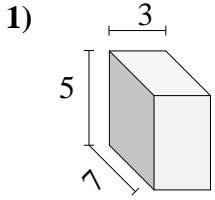
Find the volume of each of the rectangular prisms. Measured in cm (not to scale).

Answers1. 1602. 403. 484. 1125. 4866. 2707. 728. 309. 57610. 140





Find the volume of each of the rectangular prisms. Measured in cm (not to scale).

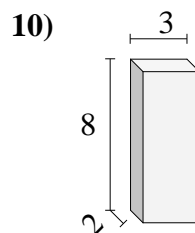
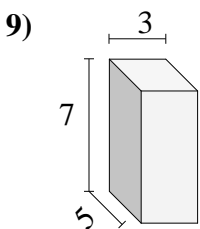
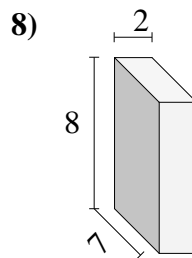
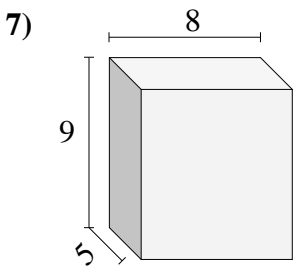
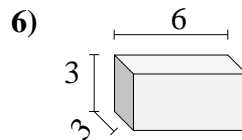
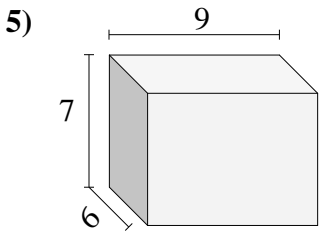
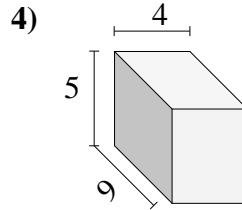
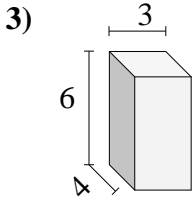
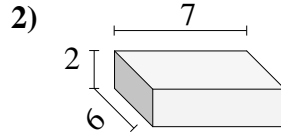
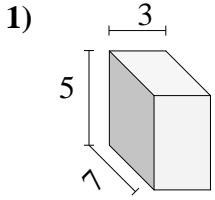


Answers

- 1. \_\_\_\_\_
- 2. \_\_\_\_\_
- 3. \_\_\_\_\_
- 4. \_\_\_\_\_
- 5. \_\_\_\_\_
- 6. \_\_\_\_\_
- 7. \_\_\_\_\_
- 8. \_\_\_\_\_
- 9. \_\_\_\_\_
- 10. \_\_\_\_\_

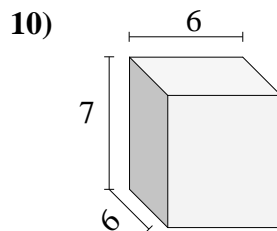
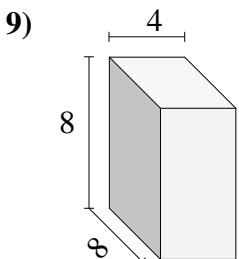
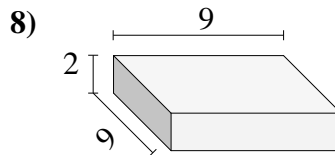
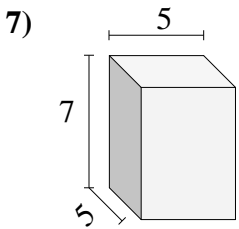
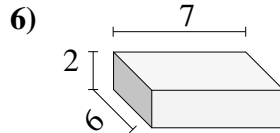
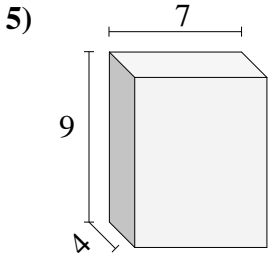
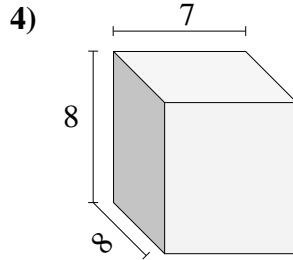
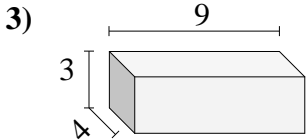
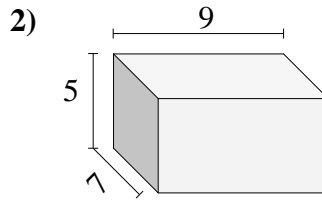
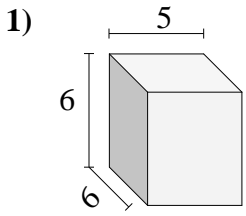


Find the volume of each of the rectangular prisms. Measured in cm (not to scale).

Answers1. 1052. 843. 724. 1805. 3786. 547. 3608. 1129. 10510. 48



Find the volume of each of the rectangular prisms. Measured in cm (not to scale).

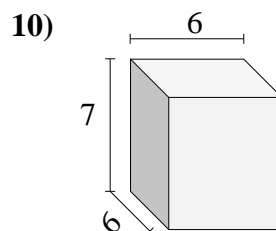
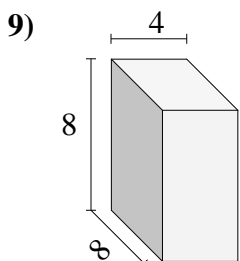
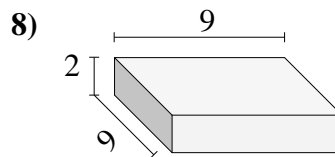
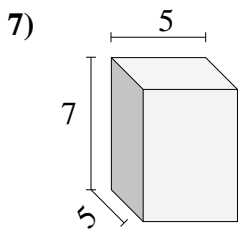
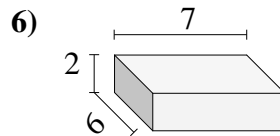
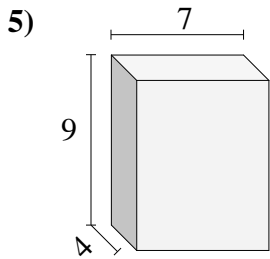
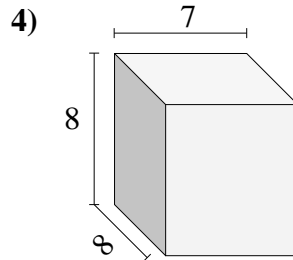
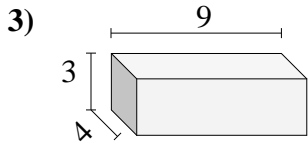
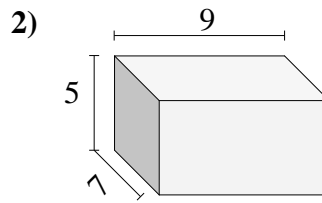
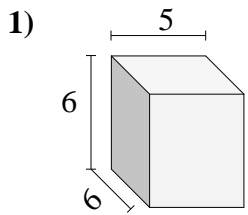


Answers

- 1. \_\_\_\_\_
- 2. \_\_\_\_\_
- 3. \_\_\_\_\_
- 4. \_\_\_\_\_
- 5. \_\_\_\_\_
- 6. \_\_\_\_\_
- 7. \_\_\_\_\_
- 8. \_\_\_\_\_
- 9. \_\_\_\_\_
- 10. \_\_\_\_\_



Find the volume of each of the rectangular prisms. Measured in cm (not to scale).

Answers1. 1802. 3153. 1084. 4485. 2526. 847. 1758. 1629. 25610. 252