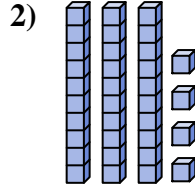
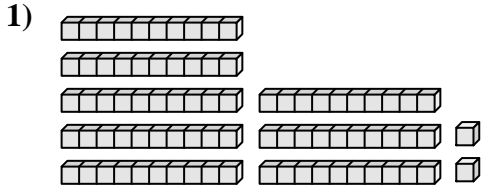




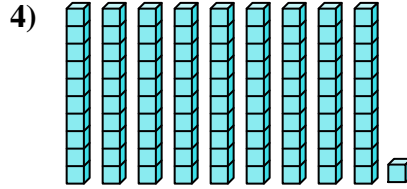
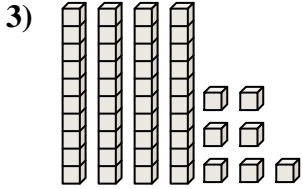
Count the total number of small blocks.

Answers



1. \_\_\_\_\_

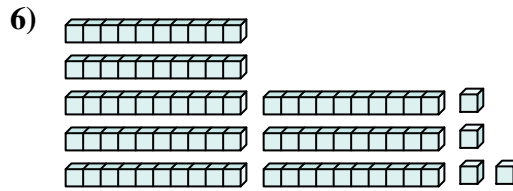
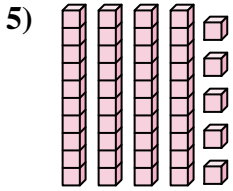
2. \_\_\_\_\_



3. \_\_\_\_\_

4. \_\_\_\_\_

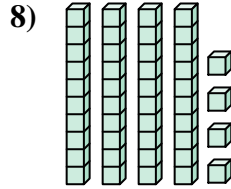
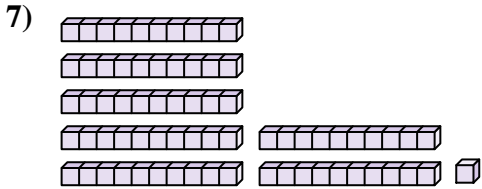
5. \_\_\_\_\_



6. \_\_\_\_\_

7. \_\_\_\_\_

8. \_\_\_\_\_

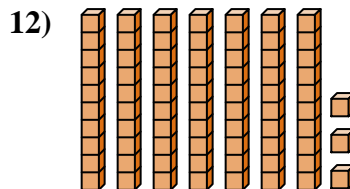
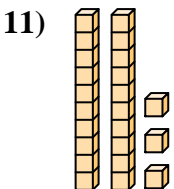
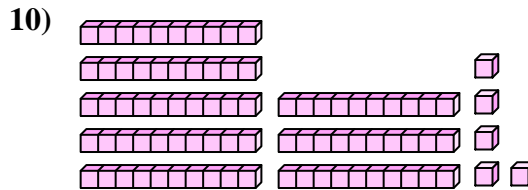
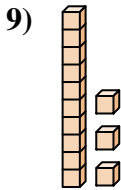


9. \_\_\_\_\_

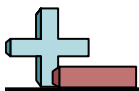
10. \_\_\_\_\_

11. \_\_\_\_\_

12. \_\_\_\_\_







Count the total number of small blocks.

45

71

44

84

47

34

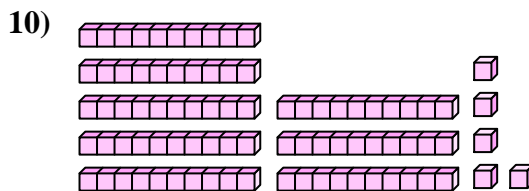
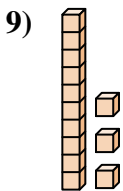
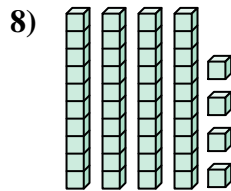
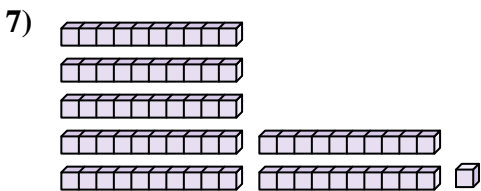
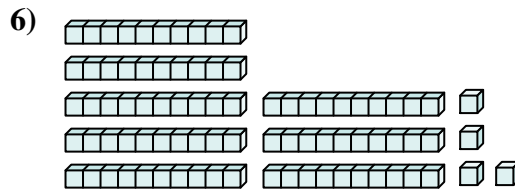
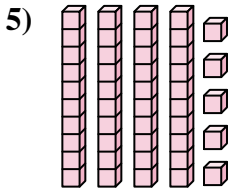
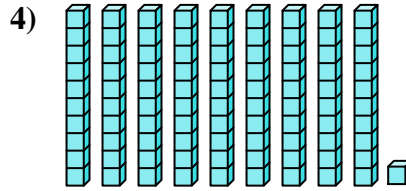
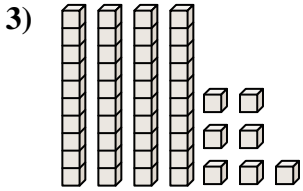
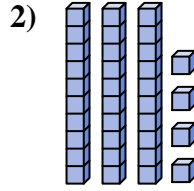
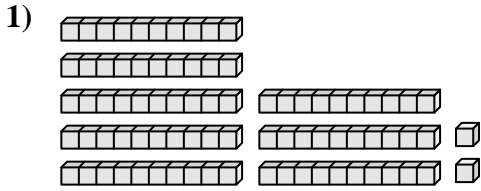
91

13

85

82

**Answers**



1. \_\_\_\_\_
2. \_\_\_\_\_
3. \_\_\_\_\_
4. \_\_\_\_\_
5. \_\_\_\_\_
6. \_\_\_\_\_
7. \_\_\_\_\_
8. \_\_\_\_\_
9. \_\_\_\_\_
10. \_\_\_\_\_