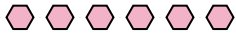




Use the visual model to solve each problem.

Answers

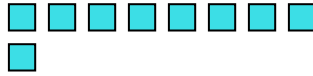
1) There are 6 hexagons below.



If you were to take away 1, how many would be left?

$6 - 1 = ?$

2) There are 9 squares below.



If you were to take away 7, how many would be left?

$9 - 7 = ?$

3) There are 2 circles below.



If you were to take away 1, how many would be left?

$2 - 1 = ?$

4) There are 3 pentagons below.



If you were to take away 2, how many would be left?

$3 - 2 = ?$

5) There are 5 circles below.



If you were to take away 4, how many would be left?

$5 - 4 = ?$

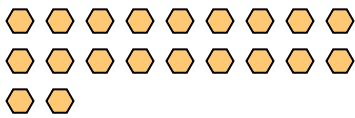
6) There are 3 squares below.



If you were to take away 1, how many would be left?

$3 - 1 = ?$

7) There are 20 hexagons below.



If you were to take away 16, how many would be left?

$20 - 16 = ?$

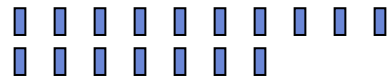
8) There are 6 triangles below.



If you were to take away 4, how many would be left?

$6 - 4 = ?$

9) There are 17 rectangles below.



If you were to take away 10, how many would be left?

$17 - 10 = ?$

10) There are 7 circles below.



If you were to take away 6, how many would be left?

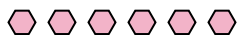
$7 - 6 = ?$

- 1. _____
- 2. _____
- 3. _____
- 4. _____
- 5. _____
- 6. _____
- 7. _____
- 8. _____
- 9. _____
- 10. _____



Use the visual model to solve each problem.


1) There are 6 hexagons below.



If you were to take away 1, how many would be left?

6 - 1 = ?

2) There are 9 squares below.



If you were to take away 7, how many would be left?

9 - 7 = ?

3) There are 2 circles below.



If you were to take away 1, how many would be left?

2 - 1 = ?

4) There are 3 pentagons below.



If you were to take away 2, how many would be left?

3 - 2 = ?

5) There are 5 circles below.



If you were to take away 4, how many would be left?

5 - 4 = ?

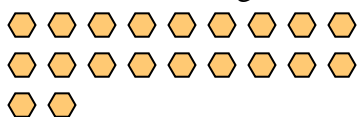
6) There are 3 squares below.



If you were to take away 1, how many would be left?

3 - 1 = ?

7) There are 20 hexagons below.



If you were to take away 16, how many would be left?

20 - 16 = ?

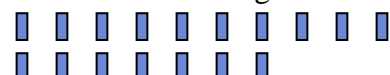
8) There are 6 triangles below.



If you were to take away 4, how many would be left?

6 - 4 = ?

9) There are 17 rectangles below.



If you were to take away 10, how many would be left?

17 - 10 = ?

10) There are 7 circles below.



If you were to take away 6, how many would be left?

7 - 6 = ?

Answers

1. 5

2. 2

3. 1

4. 1

5. 1

6. 2

7. 4

8. 2

9. 7

10. 1