



Use the numberlines to round each number to the nearest 100.

Ex)

1,224



Ex. 1,200

1)

9,937



1. _____

2)

81,895



2. _____

3)

791



3. _____

4)

3,821



4. _____

5)

216



5. _____

6)

45,078



6. _____

7)

21,436



7. _____

8)

85,063



8. _____

9)

232



9. _____

10)

608



10. _____

Answers

Ex. 1,200

1. _____

2. _____

3. _____

4. _____

5. _____

6. _____

7. _____

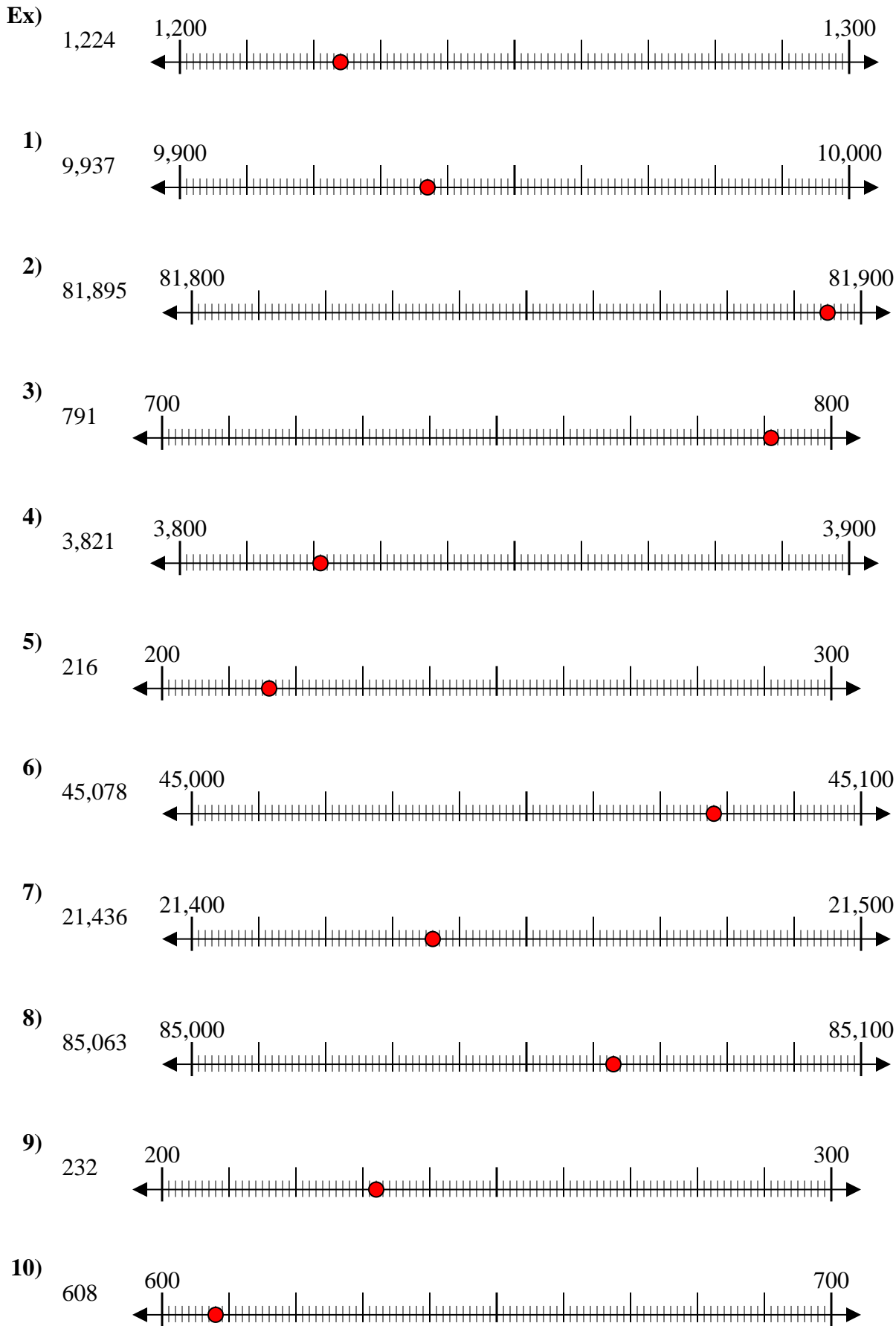
8. _____

9. _____

10. _____



Use the numberlines to round each number to the nearest 100.



Answers

- Ex. 1,200
1. 9,900
2. 81,900
3. 800
4. 3,800
5. 200
6. 45,100
7. 21,400
8. 85,100
9. 200
10. 600



Use the numberlines to round each number to the nearest 100.

Ex)

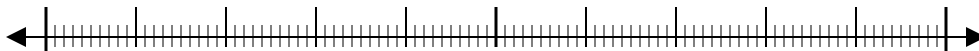
1,224



Ex. 1,200

1)

9,937



1. _____

2)

81,895



2. _____

3)

791



3. _____

4)

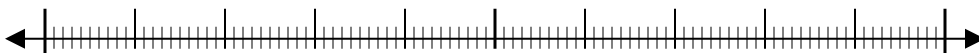
3,821



4. _____

5)

216



5. _____

6)

45,078



6. _____

7)

21,436



7. _____

8)

85,063



8. _____

9)

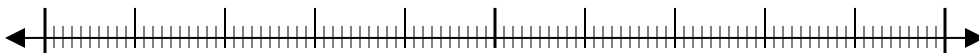
232



9. _____

10)

608



10. _____

Answers

Ex. 1,200

1. _____

2. _____

3. _____

4. _____

5. _____

6. _____

7. _____

8. _____

9. _____

10. _____