




Solve each problem.


**Answers**

1) Which letter best shows -96?




1. \_\_\_\_\_

2) Which letter best shows -96?




2. \_\_\_\_\_

3) Which letter best shows -102?




3. \_\_\_\_\_

4) Which letter best shows -61?



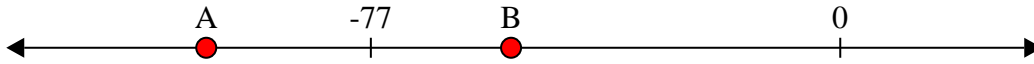
4. \_\_\_\_\_

5) Which letter best shows -31?




5. \_\_\_\_\_

6) Which letter best shows -104?




6. \_\_\_\_\_

7) Which letter best shows -82?



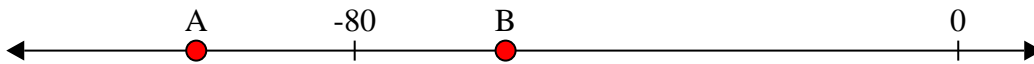
7. \_\_\_\_\_

8) Which letter best shows -26?




8. \_\_\_\_\_

9) Which letter best shows -101?



9. \_\_\_\_\_

10) Which letter best shows -126?




10. \_\_\_\_\_




Solve each problem.

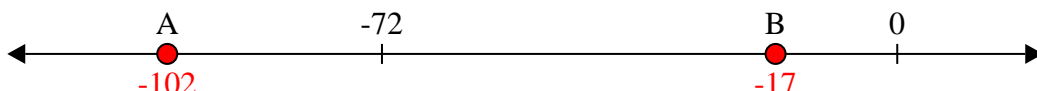
1) Which letter best shows -96?




2) Which letter best shows -96?




3) Which letter best shows -102?



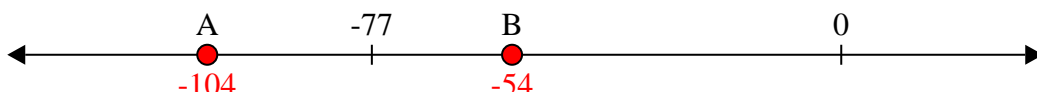
4) Which letter best shows -61?




5) Which letter best shows -31?




6) Which letter best shows -104?



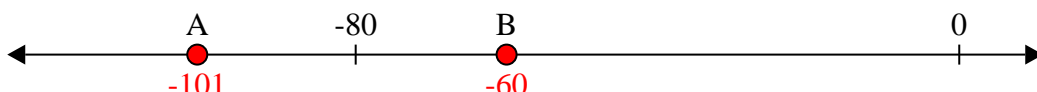
7) Which letter best shows -82?




8) Which letter best shows -26?



9) Which letter best shows -101?



10) Which letter best shows -126?



**Answers**

1. **A**

2. **A**

3. **A**

4. **B**

5. **B**

6. **A**

7. **A**

8. **B**

9. **A**

10. **A**