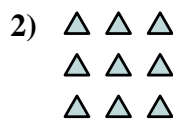




Write each array as an addition problem and solve.

Answers


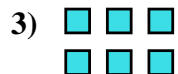


Ex. 2+2=4

1. _____

2. _____

3. _____





4. _____

5. _____

6. _____

7. _____

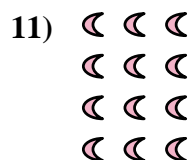



8. _____

9. _____

10. _____


11. _____



12. _____

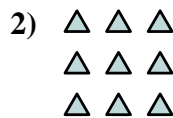

13. _____

14. _____





Write each array as an addition problem and solve.



Answers

Ex. 2+2=4

1. 2+2+2+2+2=10

2. 3+3+3=9

3. 3+3=6

4. 4+4+4=12

5. 2+2+2+2=8

6. 4+4+4+4+4=20

7. 5+5+5=15

8. 3+3+3+3+3=15

9. 5+5=10

10. 2+2+2=6

11. 3+3+3+3=12

12. 5+5+5+5=20

13. 4+4+4+4=16

14. 4+4=8

