




Determine the amount of money shown.

Answers



1. _____



2. _____



3. _____

4. _____



5. _____

6. _____



7. _____

8. _____





9. _____

10. _____





Determine the amount of money shown.



Answers

1. \$0.95

2. \$0.80

3. \$0.90

4. \$0.99

5. \$0.97

6. \$0.95

7. \$0.98

8. \$0.78

9. \$0.98

10. \$0.77



Determine the amount of money shown.

Answers



1. _____



2. _____



3. _____



4. _____




5. _____



6. _____



7. _____



8. _____




9. _____



10. _____



Determine the amount of money shown.



Answers

1. \$0.52

2. \$0.71

3. \$0.95

4. \$0.70

5. \$0.99

6. \$0.96

7. \$0.95

8. \$0.97

9. \$0.71

10. \$0.93



Determine the amount of money shown.

Answers



1. _____



2. _____




3. _____



4. _____



5. _____



6. _____



7. _____



8. _____



9. _____



10. _____



Determine the amount of money shown.



Answers

1. \$0.43

2. \$0.95

3. \$0.92

4. \$0.89

5. \$0.96

6. \$0.55

7. \$0.85

8. \$0.97

9. \$0.96

10. \$0.98




Determine the amount of money shown.

Answers



1. _____



2. _____



3. _____



4. _____



5. _____



6. _____



7. _____



8. _____





9. _____



10. _____



Determine the amount of money shown.



Answers

1. \$0.95

2. \$0.97

3. \$0.63

4. \$0.97

5. \$0.92

6. \$0.96

7. \$0.92

8. \$0.88

9. \$0.97

10. \$0.55



Determine the amount of money shown.

Answers



1. _____



2. _____



3. _____

4. _____



5. _____

6. _____



7. _____

8. _____



9. _____

10. _____





Determine the amount of money shown.



Answers

1. \$0.96

2. \$0.93

3. \$0.86

4. \$0.99

5. \$0.80

6. \$0.84

7. \$0.91

8. \$0.96

9. \$0.83

10. \$0.96



Determine the amount of money shown.

Answers




1. _____



2. _____



3. _____



4. _____



5. _____



6. _____




7. _____



8. _____




9. _____



10. _____



Determine the amount of money shown.



Answers

1. \$0.95

2. \$0.95

3. \$0.98

4. \$0.99

5. \$0.96

6. \$0.92

7. \$0.98

8. \$0.97

9. \$0.95

10. \$0.91



Determine the amount of money shown.

Answers



1. _____



2. _____



3. _____



4. _____



5. _____



6. _____



7. _____



8. _____





9. _____



10. _____



Determine the amount of money shown.



Answers

1. \$0.96

2. \$0.99

3. \$0.97

4. \$0.90

5. \$0.93

6. \$0.97

7. \$0.95

8. \$0.91

9. \$0.97

10. \$0.97



Determine the amount of money shown.

Answers



1. _____



2. _____



3. _____



4. _____



5. _____



6. _____



7. _____



8. _____



9. _____



10. _____



Determine the amount of money shown.



Answers

1. \$0.98

2. \$0.85

3. \$0.85

4. \$0.94

5. \$0.95

6. \$0.96

7. \$0.77

8. \$0.91

9. \$0.97

10. \$0.92



Determine the amount of money shown.

Answers



1. _____



2. _____



3. _____



4. _____



5. _____



6. _____



7. _____



8. _____




9. _____



10. _____



Determine the amount of money shown.



Answers

1. \$0.95

2. \$0.88

3. \$0.58

4. \$0.98

5. \$0.83

6. \$0.86

7. \$0.96

8. \$0.90


9. \$0.74

10. \$0.89




Determine the amount of money shown.

Answers



1. _____



2. _____



3. _____

4. _____



5. _____

6. _____



7. _____

8. _____




9. _____

10. _____





Determine the amount of money shown.



Answers

1. \$0.86

2. \$0.97

3. \$0.99

4. \$0.97

5. \$0.96

6. \$0.92

7. \$0.98

8. \$0.89

9. \$0.88

10. \$0.91