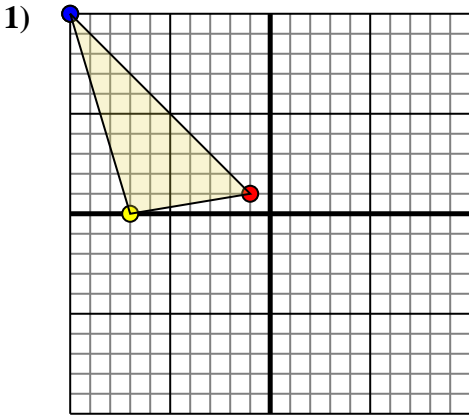




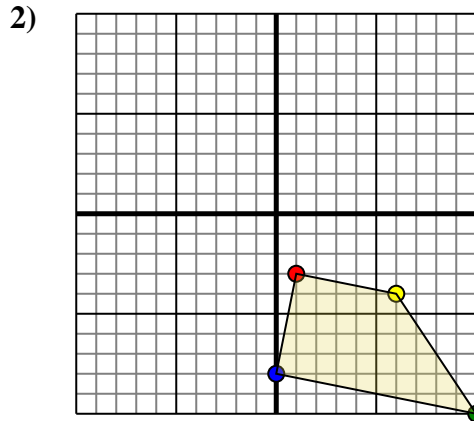
Rotate each shape as described.



The shape above has the following coordinates:

- A. (-1,1)
- B. (-7,0)
- C. (-10,10)

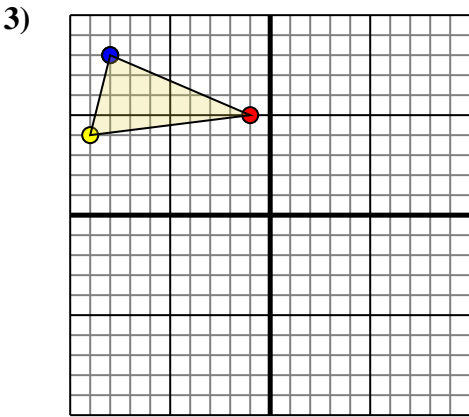
Rotate the shape 90° clockwise.



The shape above has the following coordinates:

- A. (1,-3)
- B. (6,-4)
- C. (10,-10)
- D. (0,-8)

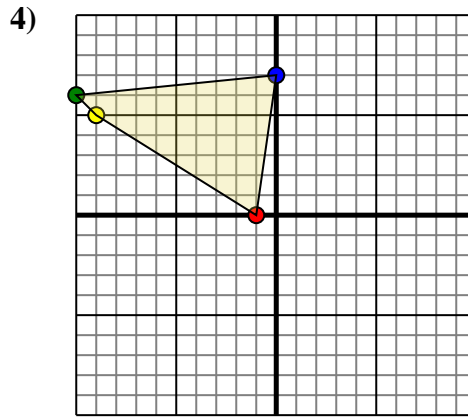
Rotate the shape 180° clockwise.



The shape above has the following coordinates:

- A. (-1,5)
- B. (-9,4)
- C. (-8,8)

Rotate the shape 180° clockwise.



The shape above has the following coordinates:

- A. (-1,0)
- B. (-9,5)
- C. (-10,6)
- D. (0,7)

Rotate the shape 90° clockwise.

Answers

1a. _____

1b. _____

1c. _____

1d. **Graph**

2a. _____

2b. _____

2c. _____

2d. _____

2e. **Graph**

3a. _____

3b. _____

3c. _____

3d. **Graph**

4a. _____

4b. _____

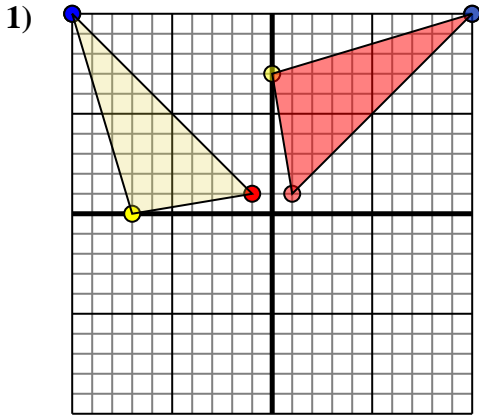
4c. _____

4d. _____

4e. **Graph**



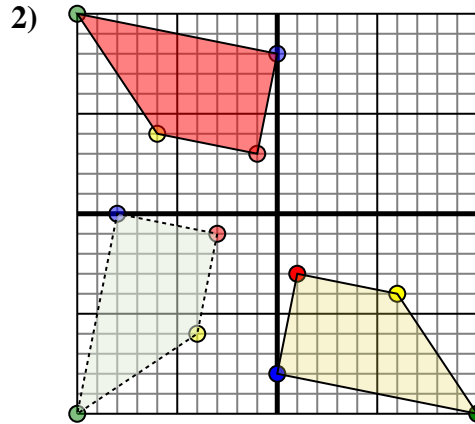
Rotate each shape as described.



The shape above has the following coordinates:

- A. (-1,1)
- B. (-7,0)
- C. (-10,10)

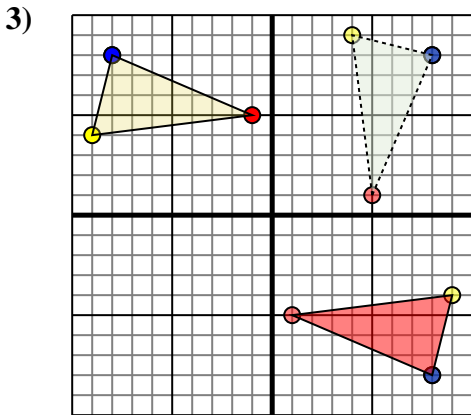
Rotate the shape 90° clockwise.



The shape above has the following coordinates:

- A. (1,-3)
- B. (6,-4)
- C. (10,-10)
- D. (0,-8)

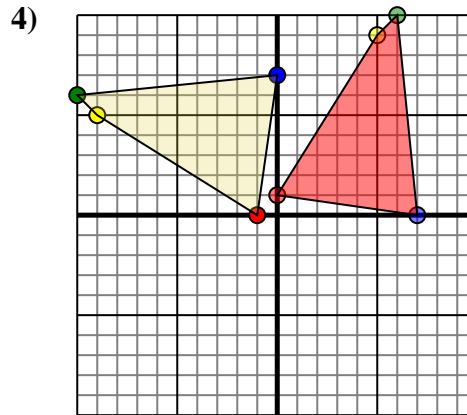
Rotate the shape 180° clockwise.



The shape above has the following coordinates:

- A. (-1,5)
- B. (-9,4)
- C. (-8,8)

Rotate the shape 180° clockwise.



The shape above has the following coordinates:

- A. (-1,0)
- B. (-9,5)
- C. (-10,6)
- D. (0,7)

Rotate the shape 90° clockwise.

Answers

1a. 1,1

1b. -0,7

1c. 10,10

1d. Graph

2a. -1,3

2b. -6,4

2c. -10,10

2d. -0,8

2e. Graph

3a. 1,-5

3b. 9,-4

3c. 8,-8

3d. Graph

4a. -0,1

4b. 5,9

4c. 6,10

4d. 7,0

4e. Graph