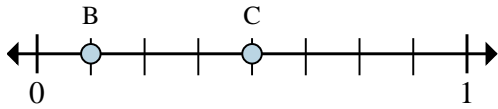




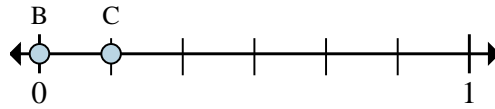
Solve each problem.

Ex)



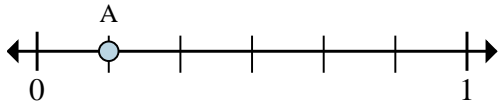
- On this numberline what is the value of 1 written as a fraction?
- On this numberline from B to C is how far (written as a fraction)?

1)



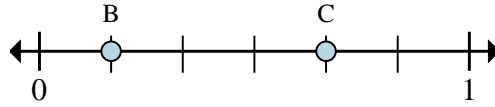
- On this numberline what is the value of 1 written as a fraction?
- On this numberline from B to C is how far (written as a fraction)?

2)



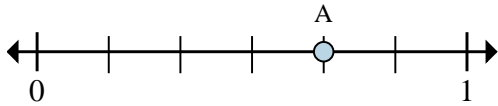
- This numberline is divided into how many pieces?
- What is the location of A (written as a fraction)?

3)



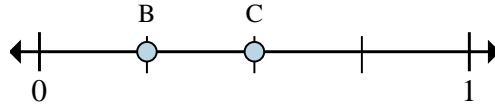
- On this numberline what is the value of 0 written as a fraction?
- On this numberline from B to C is how far (written as a fraction)?

4)



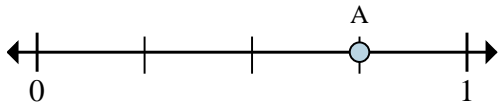
- This numberline is divided into how many pieces?
- What is the location of A (written as a fraction)?

5)



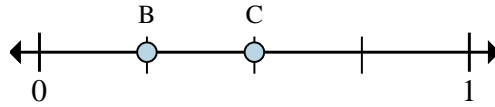
- On this numberline what is the value of 0 written as a fraction?
- On this numberline from B to C is how far (written as a fraction)?

6)



- This numberline is divided into how many pieces?
- What is the location of A (written as a fraction)?

7)



- On this numberline what is the value of 0 written as a fraction?
- On this numberline from B to C is how far (written as a fraction)?

Answers

Exa. $\frac{8}{8}$

Exb. $\frac{3}{8}$

1a. _____

1b. _____

2a. _____

2b. _____

3a. _____

3b. _____

4a. _____

4b. _____

5a. _____

5b. _____

6a. _____

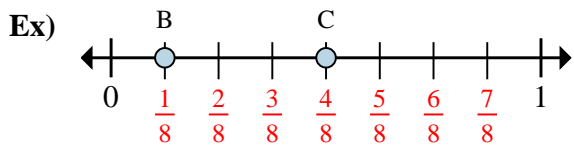
6b. _____

7a. _____

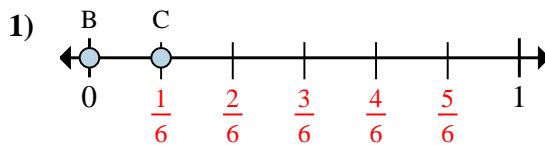
7b. _____



Solve each problem.



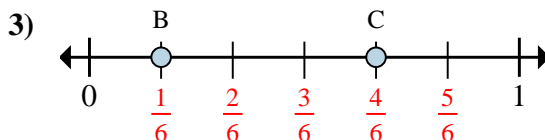
- On this numberline what is the value of 1 written as a fraction?
- On this numberline from B to C is how far (written as a fraction)?



- On this numberline what is the value of 1 written as a fraction?
- On this numberline from B to C is how far (written as a fraction)?



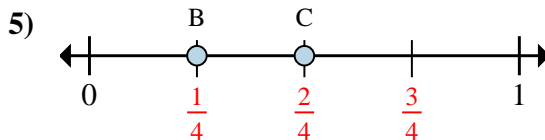
- This numberline is divided into how many pieces?
- What is the location of A (written as a fraction)?



- On this numberline what is the value of 0 written as a fraction?
- On this numberline from B to C is how far (written as a fraction)?



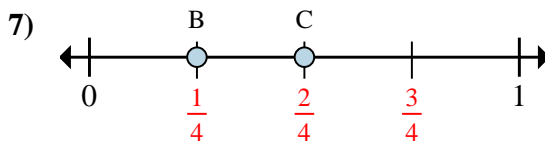
- This numberline is divided into how many pieces?
- What is the location of A (written as a fraction)?



- On this numberline what is the value of 0 written as a fraction?
- On this numberline from B to C is how far (written as a fraction)?



- This numberline is divided into how many pieces?
- What is the location of A (written as a fraction)?



- On this numberline what is the value of 0 written as a fraction?
- On this numberline from B to C is how far (written as a fraction)?

Answers

Exa. $\frac{8}{8}$

Exb. $\frac{3}{8}$

1a. $\frac{6}{6}$

1b. $\frac{1}{6}$

2a. **6**

2b. $\frac{1}{6}$

3a. $\frac{0}{6}$

3b. $\frac{3}{6}$

4a. **6**

4b. $\frac{4}{6}$

5a. $\frac{0}{4}$

5b. $\frac{1}{4}$

6a. **4**

6b. $\frac{3}{4}$

7a. $\frac{0}{4}$

7b. $\frac{1}{4}$