
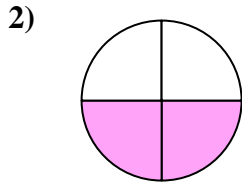




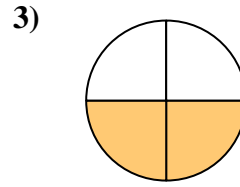
Determine which letter best describes the shaded portion.



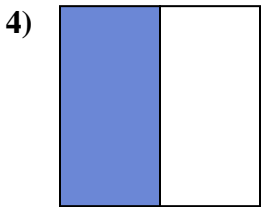
- A. two-halves
- B. one-fourth
- C. one-half



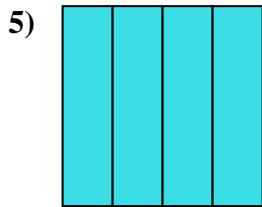
- A. two-fourths
- B. two-halves
- C. one-half



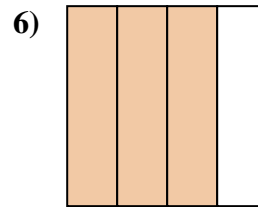
- A. two-quarters
- B. two-halves
- C. one-quarter



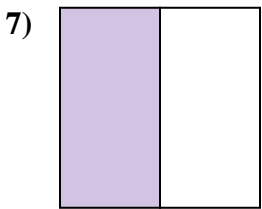
- A. three-quarters
- B. one-half
- C. four-fourths



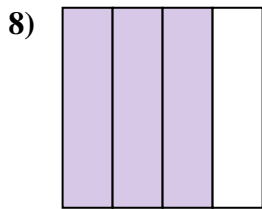
- A. two-quarters
- B. four-quarters
- C. two-halves



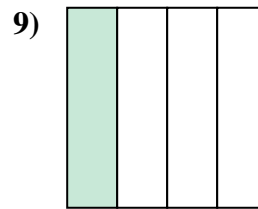
- A. one-half
- B. three-fourths
- C. two-halves



- A. three-quarters
- B. four-fourths
- C. one-half



- A. three-quarters
- B. one-half
- C. two-halves




- A. four-fourths
- B. one-fourth
- C. two-halves

**Answers**

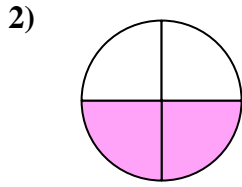
1. \_\_\_\_\_
2. \_\_\_\_\_
3. \_\_\_\_\_
4. \_\_\_\_\_
5. \_\_\_\_\_
6. \_\_\_\_\_
7. \_\_\_\_\_
8. \_\_\_\_\_
9. \_\_\_\_\_



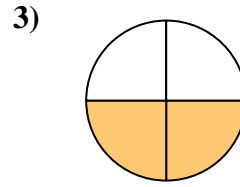
Determine which letter best describes the shaded portion.



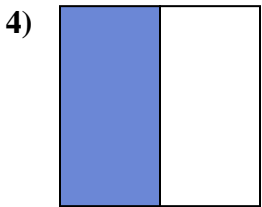
- A. two-halves
- B. one-fourth
- C. one-half



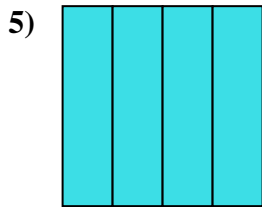
- A. two-fourths
- B. two-halves
- C. one-half



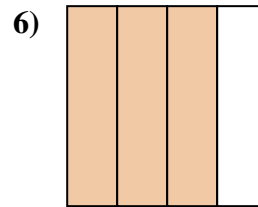
- A. two-quarters
- B. two-halves
- C. one-quarter



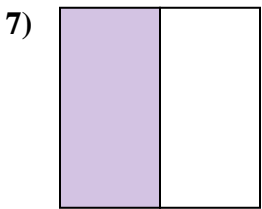
- A. three-quarters
- B. one-half
- C. four-fourths



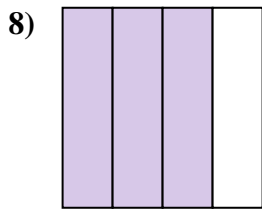
- A. two-quarters
- B. four-quarters
- C. two-halves



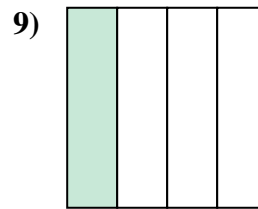
- A. one-half
- B. three-fourths
- C. two-halves



- A. three-quarters
- B. four-fourths
- C. one-half



- A. three-quarters
- B. one-half
- C. two-halves



- A. four-fourths
- B. one-fourth
- C. two-halves

**Answers**

- 1.   **A**
- 2.   **A**
- 3.   **A**
- 4.   **B**
- 5.   **B**
- 6.   **B**
- 7.   **C**
- 8.   **A**
- 9.   **B**