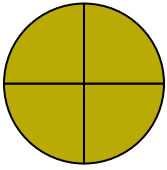




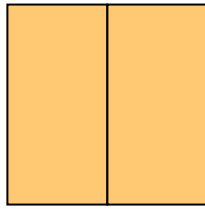
Determine which letter best describes the shaded portion.

1)



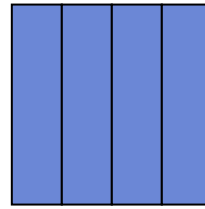
- A. two-halves
- B. four-fourths
- C. one-half

2)



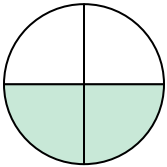
- A. one-quarter
- B. two-fourths
- C. two-halves

3)



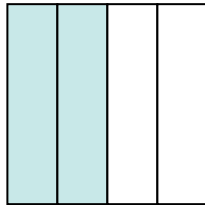
- A. two-halves
- B. two-quarters
- C. four-fourths

4)




- A. two-fourths
- B. one-fourth
- C. one-half

5)




- A. four-quarters
- B. three-quarters
- C. two-fourths

6)



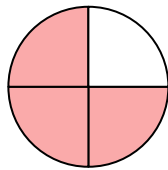
- A. four-quarters
- B. one-half
- C. one-quarter

7)



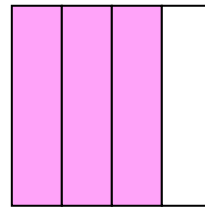
- A. one-half
- B. one-quarter
- C. two-halves

8)



- A. one-quarter
- B. four-quarters
- C. three-quarters

9)



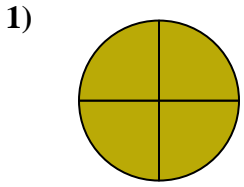
- A. three-quarters
- B. two-halves
- C. one-fourth

Answers

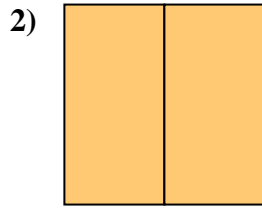
1. _____
2. _____
3. _____
4. _____
5. _____
6. _____
7. _____
8. _____
9. _____



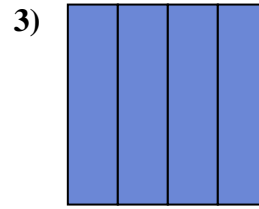
Determine which letter best describes the shaded portion.



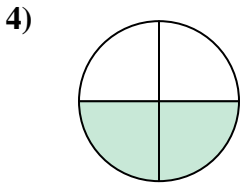
- A. two-halves
- B. four-fourths
- C. one-half



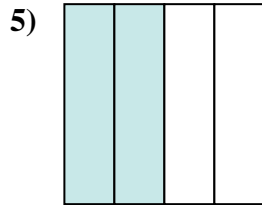
- A. one-quarter
- B. two-fourths
- C. two-halves



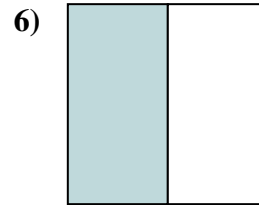
- A. two-halves
- B. two-quarters
- C. four-fourths




- A. two-fourths
- B. one-fourth
- C. one-half



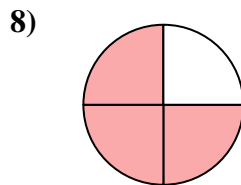
- A. four-quarters
- B. three-quarters
- C. two-fourths



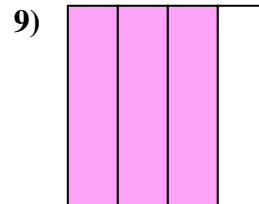
- A. four-quarters
- B. one-half
- C. one-quarter



- A. one-half
- B. one-quarter
- C. two-halves



- A. one-quarter
- B. four-quarters
- C. three-quarters



- A. three-quarters
- B. two-halves
- C. one-fourth

Answers

- 1. **B**
- 2. **C**
- 3. **C**
- 4. **A**
- 5. **C**
- 6. **B**
- 7. **C**
- 8. **C**
- 9. **A**