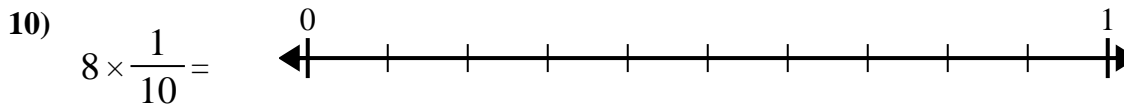
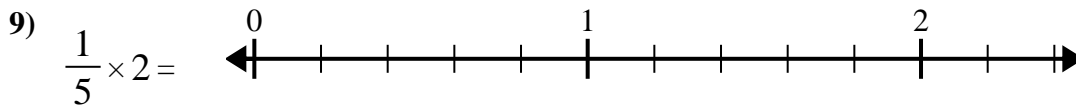
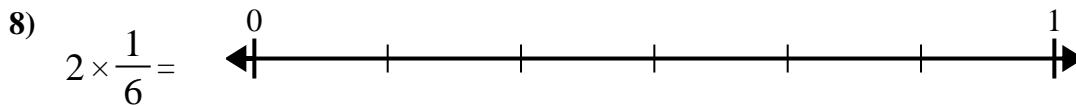
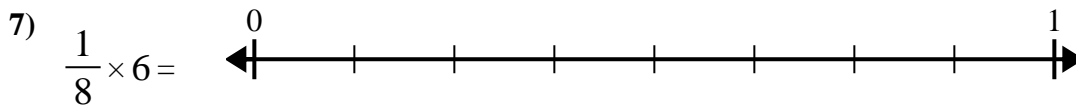
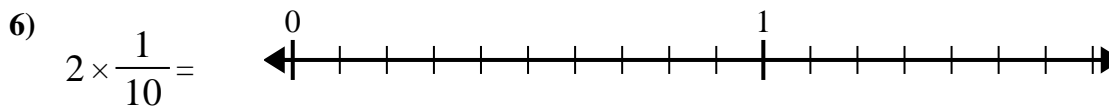
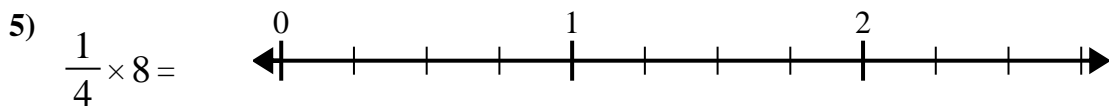
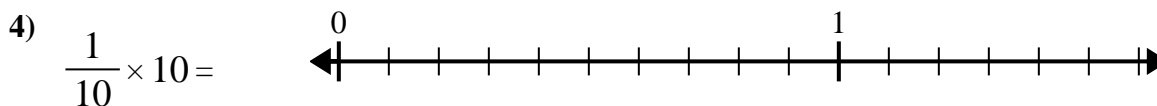
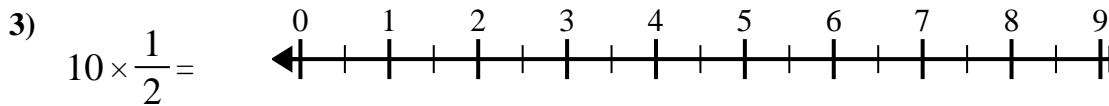
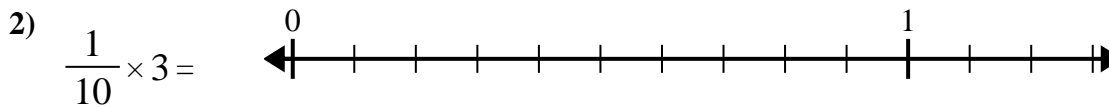
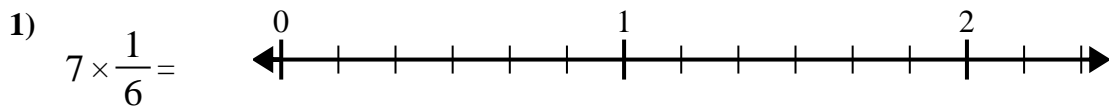




Use the numberline to solve.

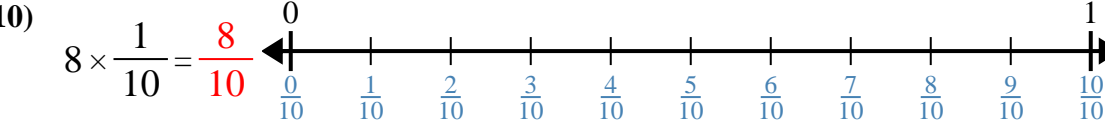
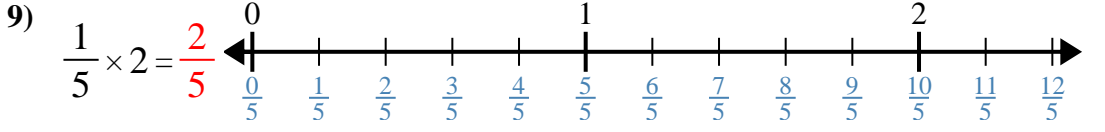
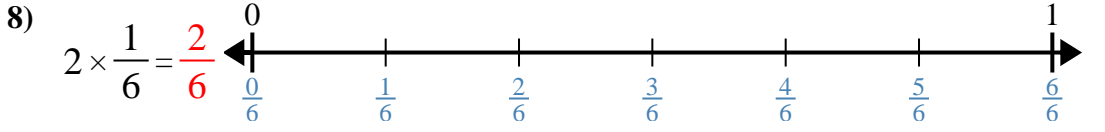
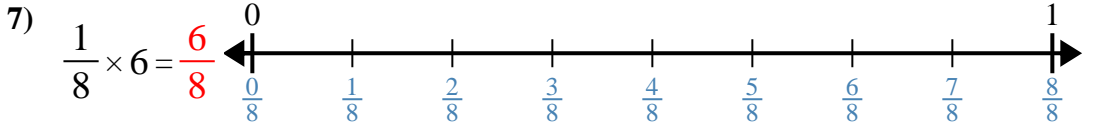
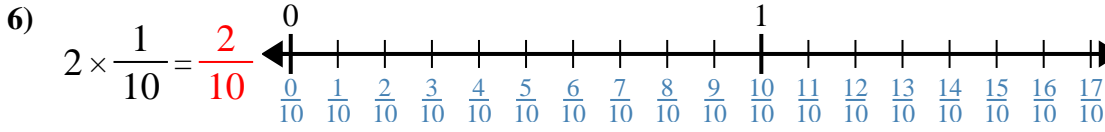
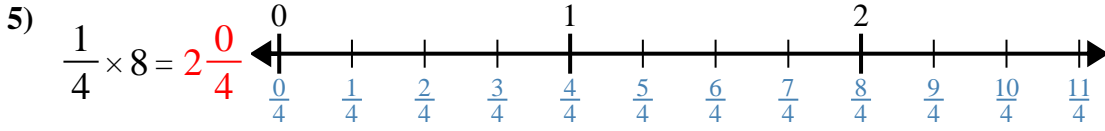
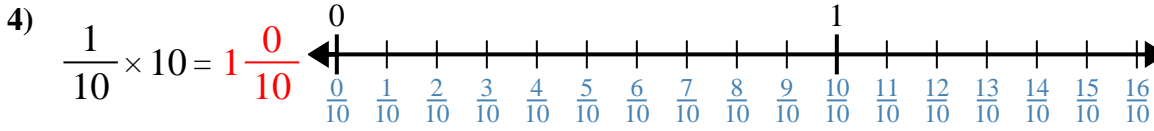
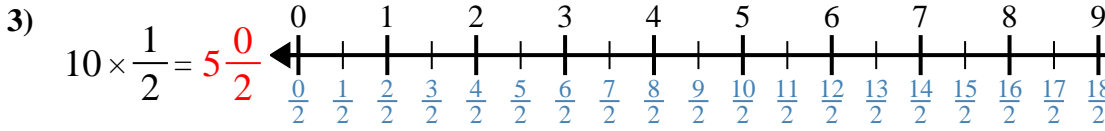
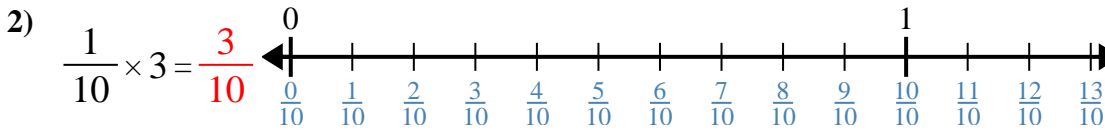
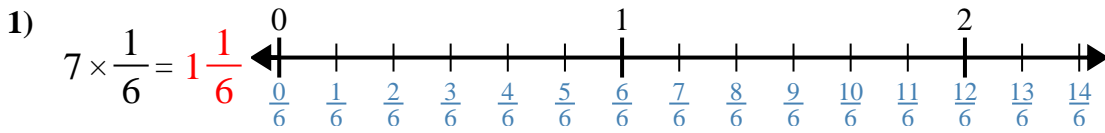


Answers

1. _____
2. _____
3. _____
4. _____
5. _____
6. _____
7. _____
8. _____
9. _____
10. _____



Use the numberline to solve.



Answers

1. $1\frac{1}{6}$
2. $\frac{3}{10}$
3. $5\frac{0}{2}$
4. $1\frac{0}{10}$
5. $2\frac{0}{4}$
6. $\frac{2}{10}$
7. $\frac{6}{8}$
8. $\frac{2}{6}$
9. $\frac{2}{5}$
10. $\frac{8}{10}$



Use the numberline to solve.

$\frac{8}{10}$	$\frac{6}{8}$	$1\frac{0}{10}$	$5\frac{0}{2}$
$\frac{2}{6}$	$\frac{2}{10}$	$\frac{2}{5}$	$2\frac{0}{4}$
$\frac{3}{10}$	$1\frac{1}{6}$		

Answers

1)

1. _____

2)

2. _____

3)

3. _____

4)

4. _____

5)

5. _____

6)

6. _____

7)

7. _____

8)

8. _____

9)

9. _____

10)

10. _____