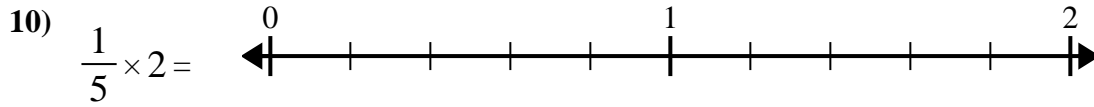
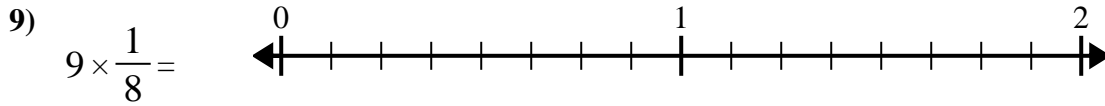
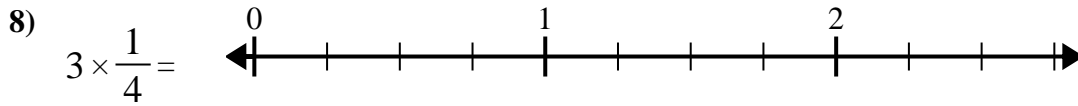
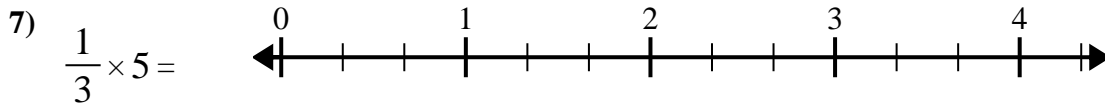
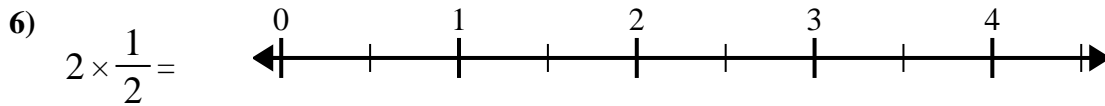
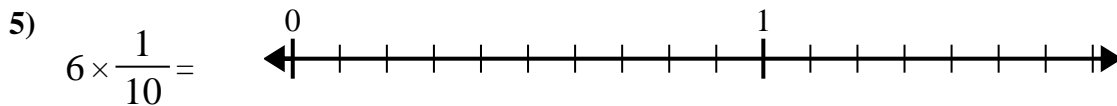
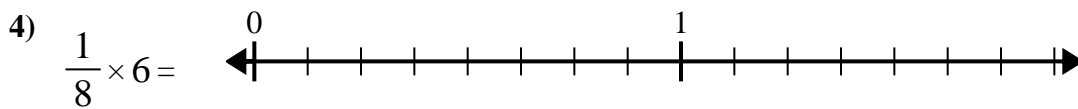
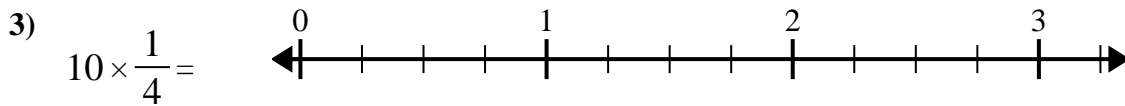
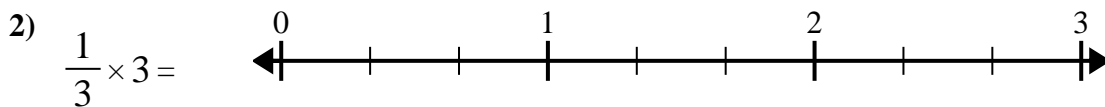
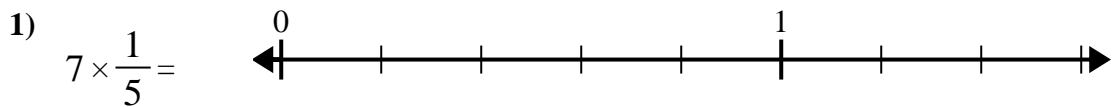




Use the numberline to solve.

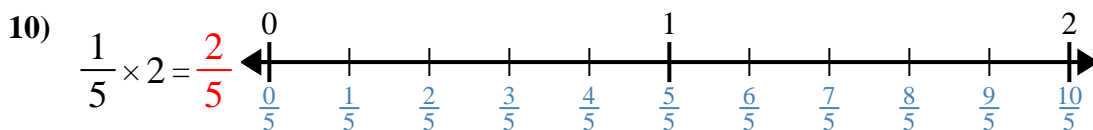
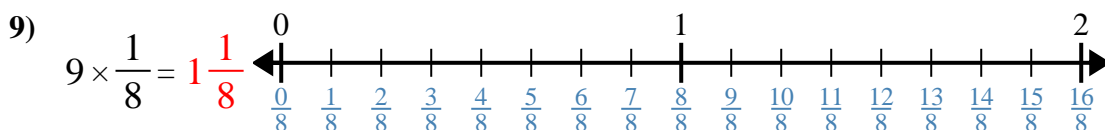
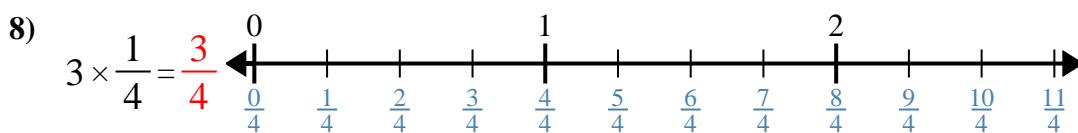
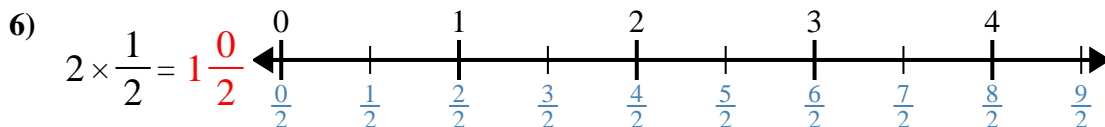
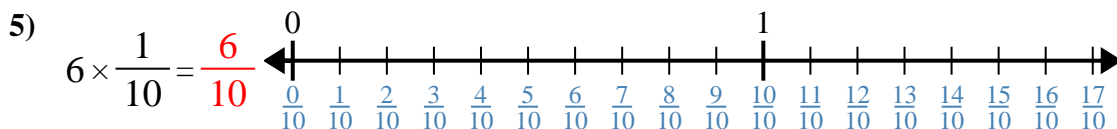
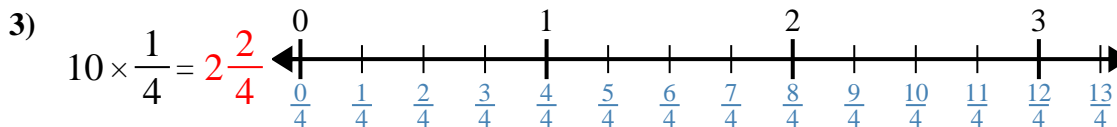
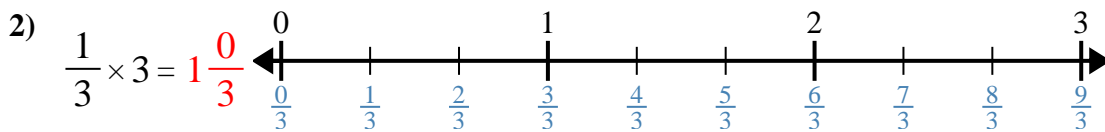


Answers

1. _____
2. _____
3. _____
4. _____
5. _____
6. _____
7. _____
8. _____
9. _____
10. _____



Use the numberline to solve.



Answers

1. $1\frac{2}{5}$

2. $1\frac{0}{3}$

3. $2\frac{2}{4}$

4. $\frac{6}{8}$

5. $\frac{6}{10}$

6. $1\frac{0}{2}$

7. $1\frac{2}{3}$

8. $\frac{3}{4}$

9. $1\frac{1}{8}$

10. $\frac{2}{5}$



Use the numberline to solve.

$1 \frac{0}{3}$

$1 \frac{0}{2}$

$\frac{6}{10}$

$\frac{2}{5}$

$1 \frac{2}{5}$

$\frac{6}{8}$

$\frac{3}{4}$

$1 \frac{1}{8}$

$1 \frac{2}{3}$

$2 \frac{2}{4}$

Answers

1)

1. _____

2)

2. _____

3)

3. _____

4)

4. _____

5)

5. _____

6)

6. _____

7)

7. _____

8)

8. _____

9)

9. _____

10)

10. _____