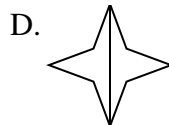
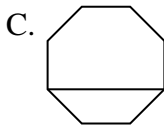
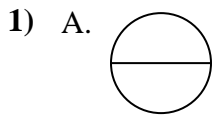


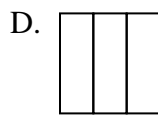
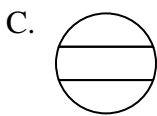
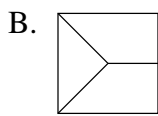
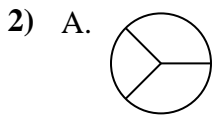


Determine which choice(s) show the shape partitioned so each piece has equal area. If none, write 'none'.

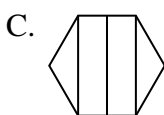
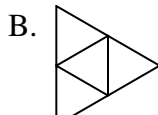
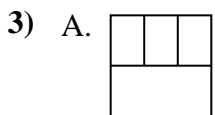
Answers



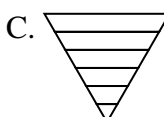
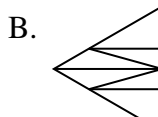
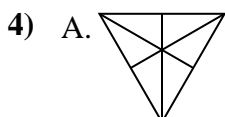
1. \_\_\_\_\_



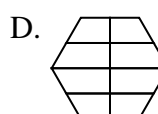
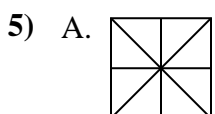
2. \_\_\_\_\_



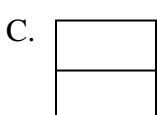

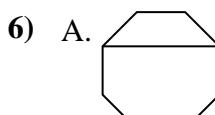
3. \_\_\_\_\_



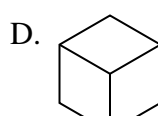
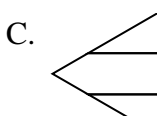
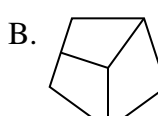
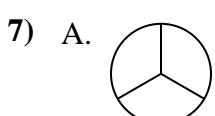
4. \_\_\_\_\_



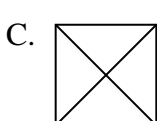
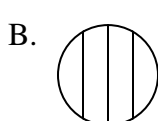
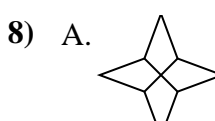
5. \_\_\_\_\_



6. \_\_\_\_\_



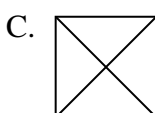
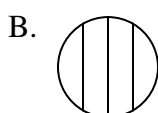
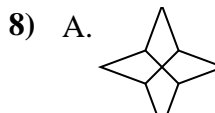
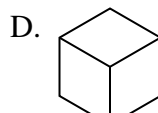
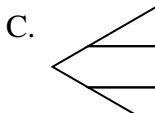
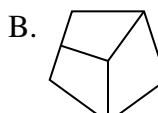
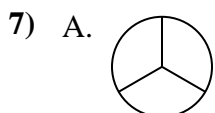
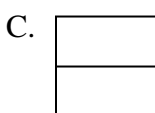
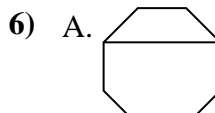
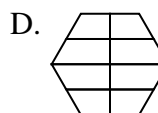
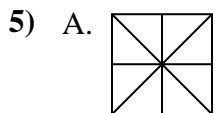
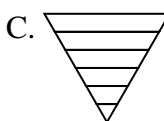
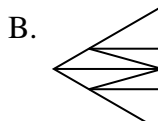
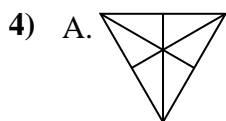
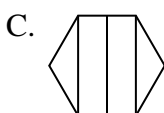
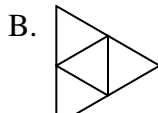
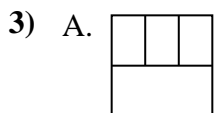
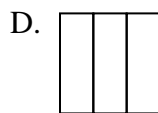
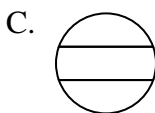
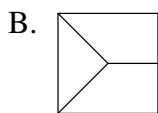
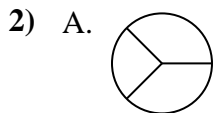
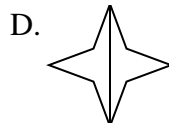
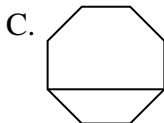
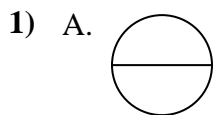
7. \_\_\_\_\_



8. \_\_\_\_\_



Determine which choice(s) show the shape partitioned so each piece has equal area. If none, write 'none'.



Answers

1. **A,B,D**

2. **D**

3. **B,D**

4. **A**

5. **A**

6. **B,C,D**

7. **A,D**

8. **A,C**