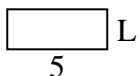





Determine the value of 'L'.

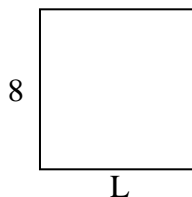
1) Area =  $10u^2$



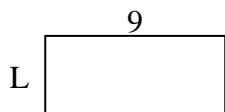
2) Area =  $40u^2$



3) Area =  $64u^2$



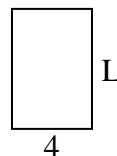
4) Area =  $36u^2$



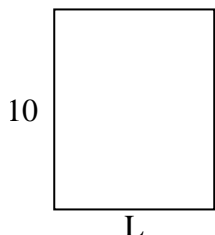
5) Area =  $12u^2$




6) Area =  $24u^2$



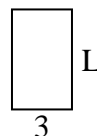
7) Area =  $80u^2$



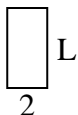
8) Area =  $20u^2$




9) Area =  $15u^2$



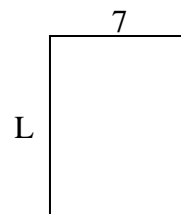
10) Area =  $8u^2$



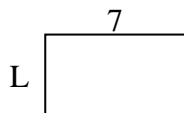
11) Area =  $50u^2$



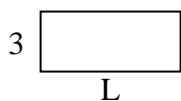
12) Area =  $63u^2$



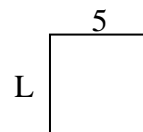
13) Area =  $28u^2$



14) Area =  $21u^2$



15) Area =  $25u^2$



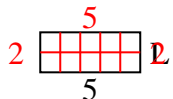
**Answers**

1. \_\_\_\_\_
2. \_\_\_\_\_
3. \_\_\_\_\_
4. \_\_\_\_\_
5. \_\_\_\_\_
6. \_\_\_\_\_
7. \_\_\_\_\_
8. \_\_\_\_\_
9. \_\_\_\_\_
10. \_\_\_\_\_
11. \_\_\_\_\_
12. \_\_\_\_\_
13. \_\_\_\_\_
14. \_\_\_\_\_
15. \_\_\_\_\_

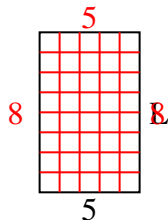


Determine the value of 'L'.

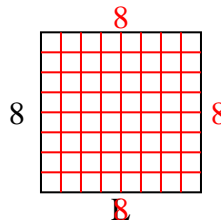
1) Area =  $10u^2$



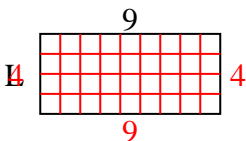
2) Area =  $40u^2$



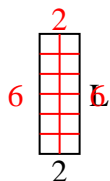
3) Area =  $64u^2$



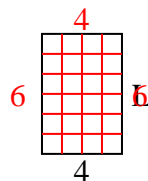
4) Area =  $36u^2$



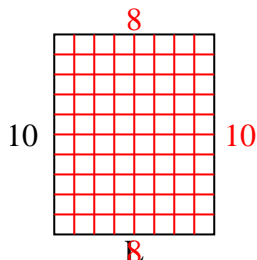
5) Area =  $12u^2$



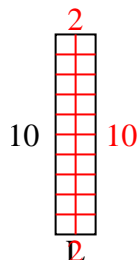
6) Area =  $24u^2$



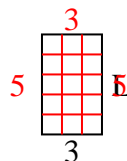
7) Area =  $80u^2$



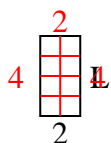
8) Area =  $20u^2$



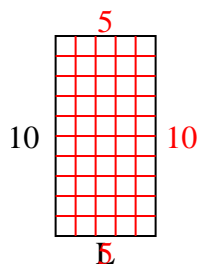
9) Area =  $15u^2$



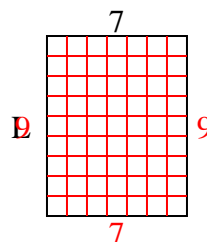
10) Area =  $8u^2$



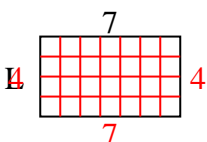
11) Area =  $50u^2$



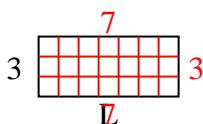
12) Area =  $63u^2$



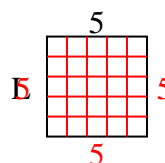
13) Area =  $28u^2$



14) Area =  $21u^2$



15) Area =  $25u^2$



Answers

1. 2

2. 8

3. 8

4. 4

5. 6

6. 6

7. 8

8. 2

9. 5

10. 4

11. 5

12. 9

13. 4

14. 7

15. 5