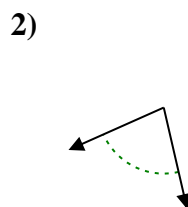
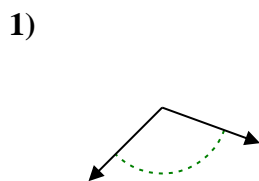
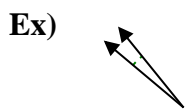




Determine if the angle shown is acute, obtuse, right or straight.

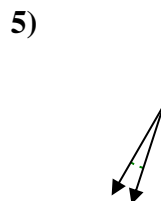
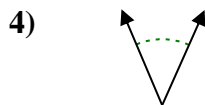
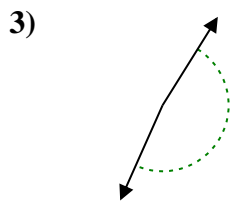
Answers



Ex. acute

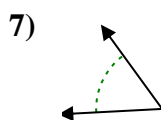
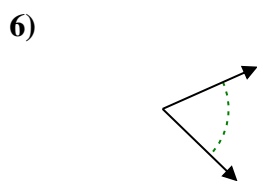
1. _____

2. _____



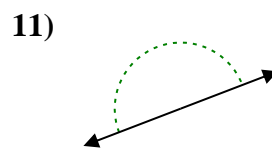
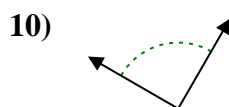
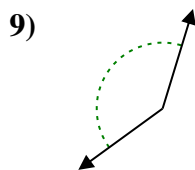
3. _____

4. _____



6. _____

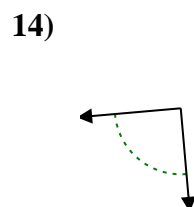
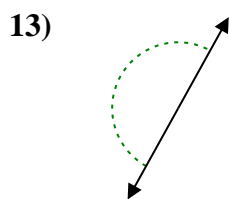
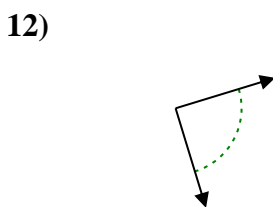
7. _____



9. _____

10. _____

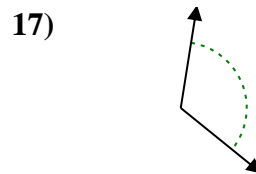
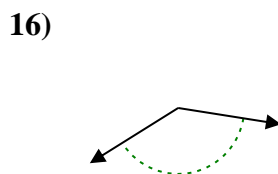
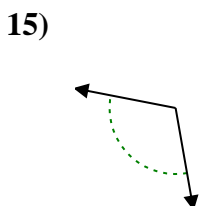
11. _____



12. _____

13. _____

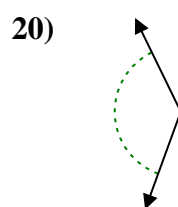
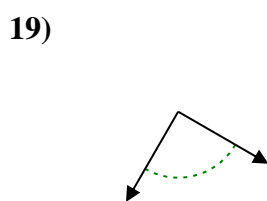
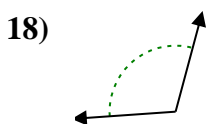
14. _____



15. _____

16. _____

17. _____



18. _____

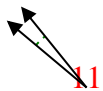
19. _____

20. _____

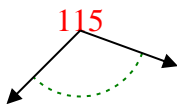


Determine if the angle shown is acute, obtuse, right or straight.

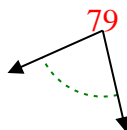
Ex)



1)



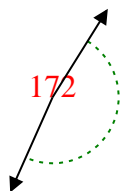
2)



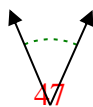
Answers

Ex. acute

3)



4)



5)



1. obtuse

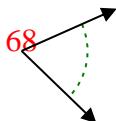
2. acute

3. obtuse

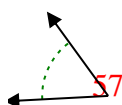
4. acute

5. acute

6)



7)



8)



6. acute

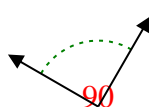
7. acute

8. acute

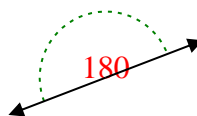
9)



10)



11)

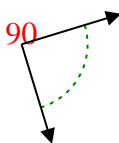


9. obtuse

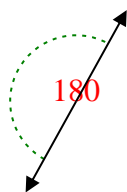
10. right

11. straight

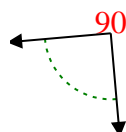
12)



13)



14)

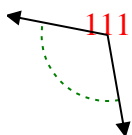


12. right

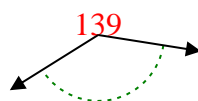
13. straight

14. right

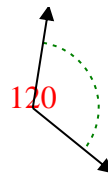
15)



16)



17)

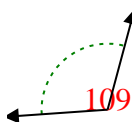


15. obtuse

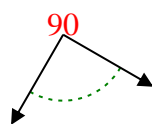
16. obtuse

17. obtuse

18)



19)



20)



18. obtuse

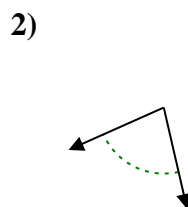
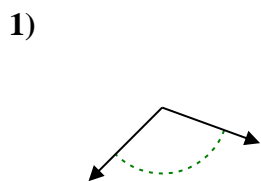
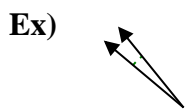
19. right

20. obtuse



Determine if the angle shown is acute, obtuse, right or straight.

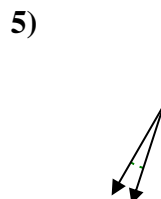
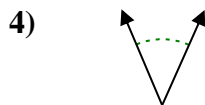
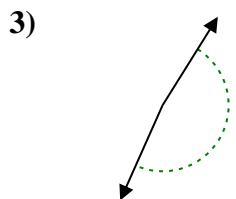
Answers



Ex. acute

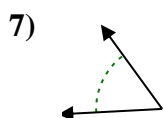
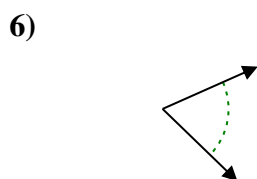
1. _____

2. _____



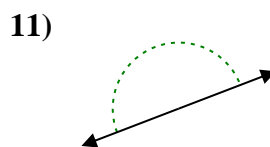
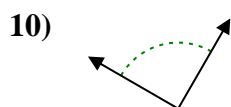
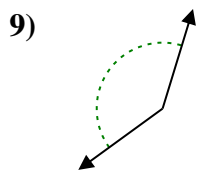
3. _____

4. _____



6. _____

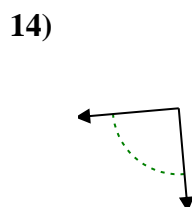
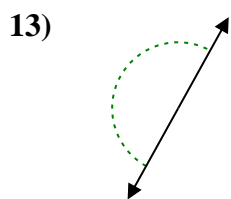
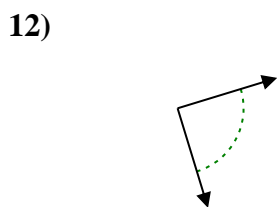
7. _____



9. _____

10. _____

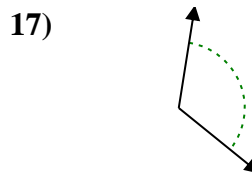
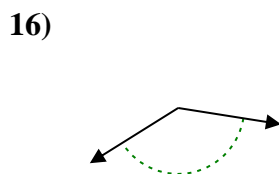
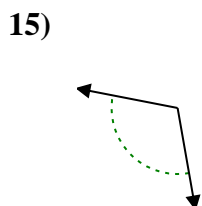
11. _____



12. _____

13. _____

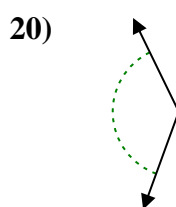
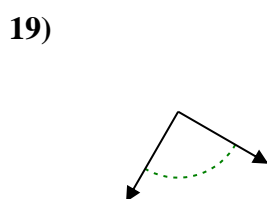
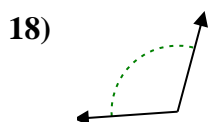
14. _____



15. _____

16. _____

17. _____



18. _____

19. _____

20. _____