



Determine if the angle shown is 'less', 'more' or 'equal' to 90°.

Answers

Ex)



1)



2)



Ex. equal

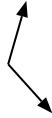
1. \_\_\_\_\_

2. \_\_\_\_\_

3)



4)



5)



3. \_\_\_\_\_

4. \_\_\_\_\_

6)



7)



8)



6. \_\_\_\_\_

7. \_\_\_\_\_

9)



10)



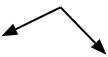
11)



9. \_\_\_\_\_

10. \_\_\_\_\_

12)



13)



14)



12. \_\_\_\_\_

13. \_\_\_\_\_

15)



16)



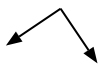
17)



15. \_\_\_\_\_

16. \_\_\_\_\_

18)



19)



20)



18. \_\_\_\_\_

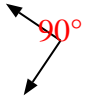
19. \_\_\_\_\_

20. \_\_\_\_\_



Determine if the angle shown is 'less', 'more' or 'equal' to  $90^\circ$ .

Ex)



1)



2)



Ex. equal

3)



4)

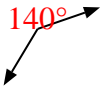


5)



1. more

6)



7)



8)



2. less

3. less

4. more

5. more

6. more

7. equal

8. less

9)



10)



11)

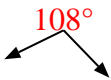


9. less

10. less

11. equal

12)



13)



14)



12. more

13. less

14. less

15)



16)



17)

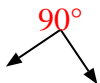


15. equal

16. more

17. more

18)



19)



20)



18. equal

19. equal

20. equal