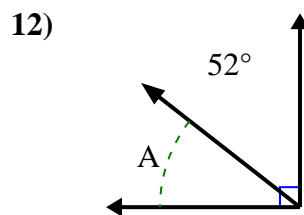
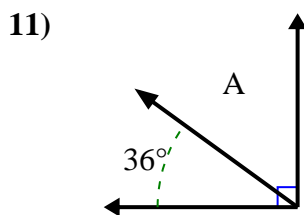
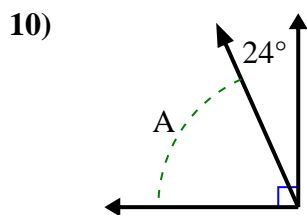
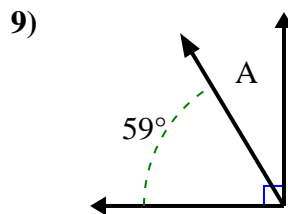
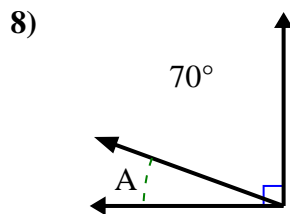
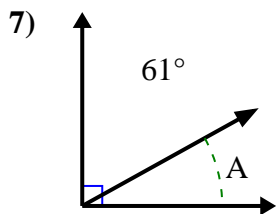
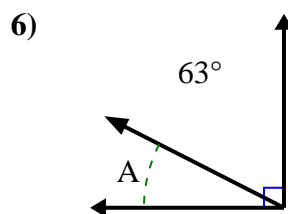
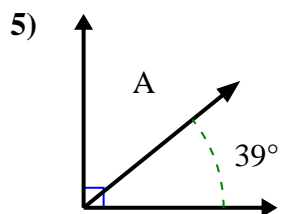
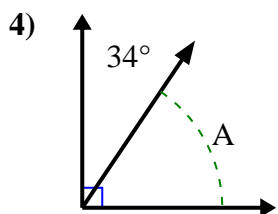
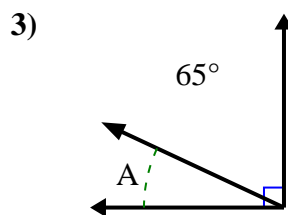
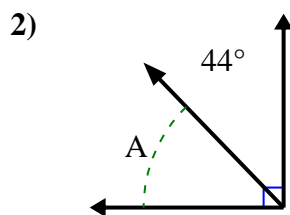
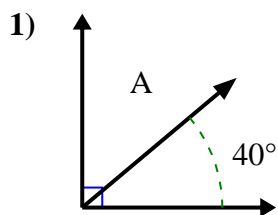




Find the value of 'A' in the set of complementary angles.

Answers

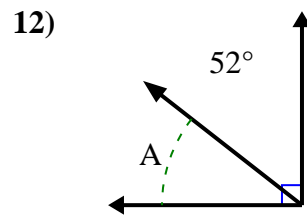
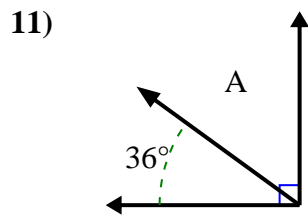
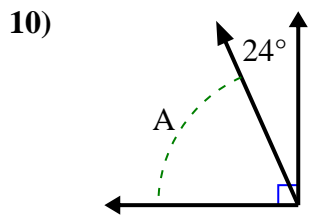
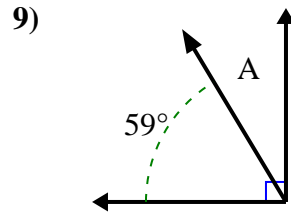
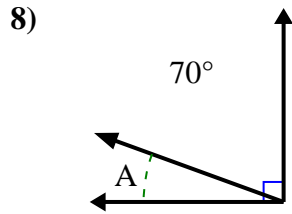
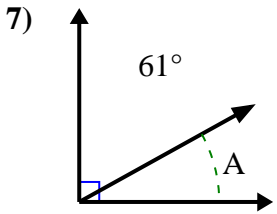
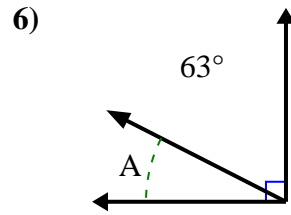
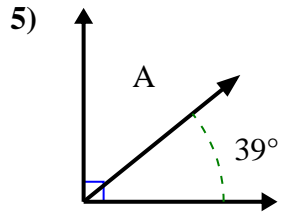
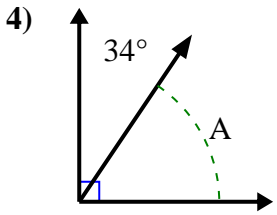
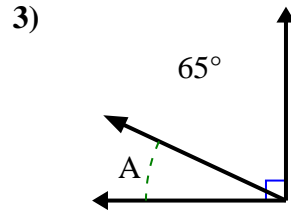
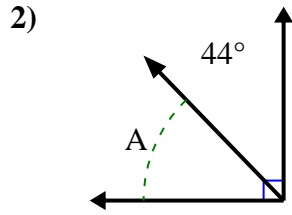
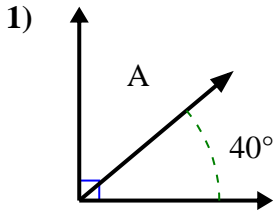


1. \_\_\_\_\_
2. \_\_\_\_\_
3. \_\_\_\_\_
4. \_\_\_\_\_
5. \_\_\_\_\_
6. \_\_\_\_\_
7. \_\_\_\_\_
8. \_\_\_\_\_
9. \_\_\_\_\_
10. \_\_\_\_\_
11. \_\_\_\_\_
12. \_\_\_\_\_



Find the value of 'A' in the set of complementary angles.

Answers



1. 50°

2. 46°

3. 25°

4. 56°

5. 51°

6. 27°

7. 29°

8. 20°

9. 31°

10. 66°

11. 54°

12. 38°