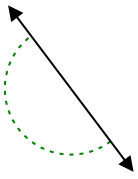


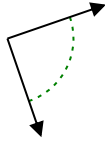


Determine if the angle shown is acute, obtuse, right or straight.

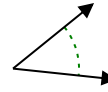
Ex)



1)



2)



Answers

Ex. straight

1. _____

2. _____

3. _____

4. _____

5. _____

6. _____

7. _____

8. _____

9. _____

10. _____

11. _____

12. _____

13. _____

14. _____

15. _____

16. _____

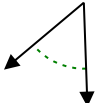
17. _____

18. _____

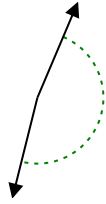
19. _____

20. _____

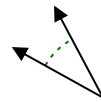
3)



4)



5)



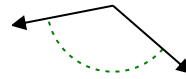
6)



7)



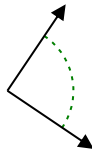
8)



9)



10)



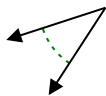
11)



12)



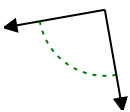
13)



14)



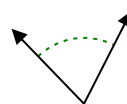
15)



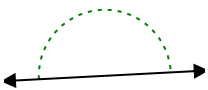
16)



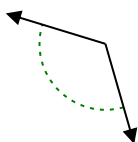
17)



18)



19)



20)

