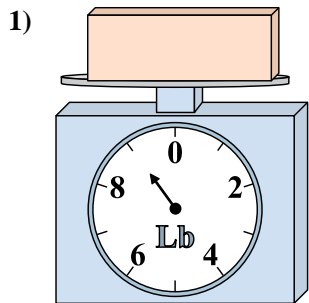
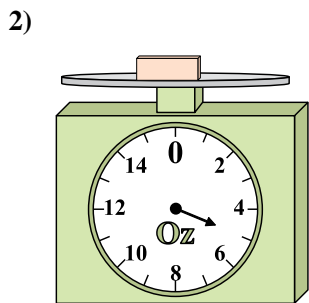




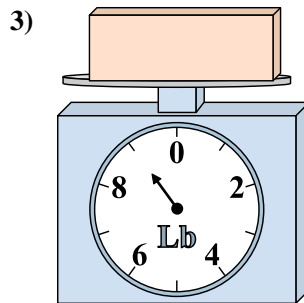
Use the scale to answer each question.



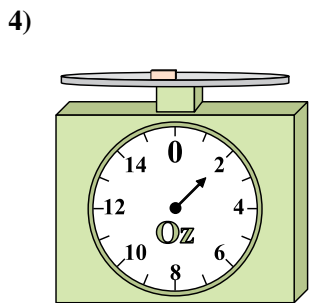
If the block shown were 4 pounds lighter, how much would it weigh?



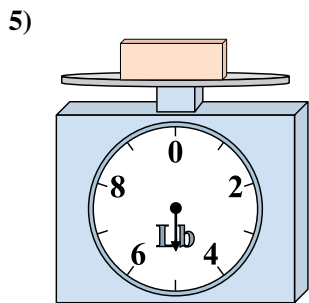
What is the weight (in ounces) of the block?



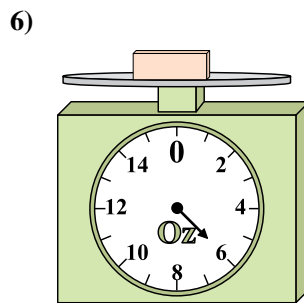
If you have 3 blocks that are the same weight, how many pounds total do the blocks weigh?



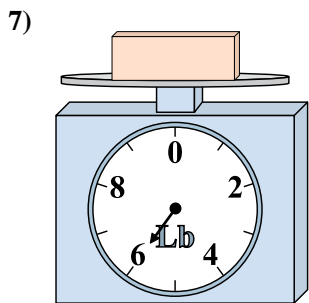
What is the weight (in ounces) of the block?



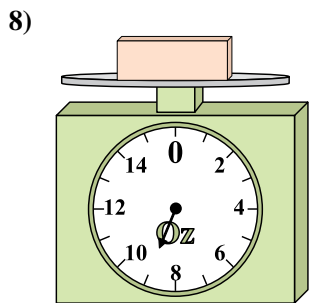
If the block shown were 7 pounds heavier, how much would it weigh?



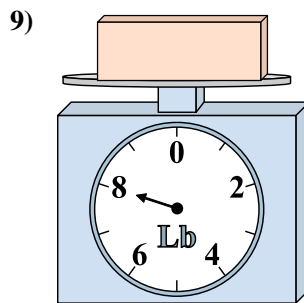
If the block shown were 2 ounces heavier, how much would it weigh?



If the block shown were 4 pounds lighter, how much would it weigh?



If you have 2 blocks that are the same weight, how many ounces total do the blocks weigh?



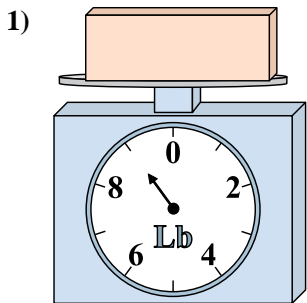
What is the weight (in pounds) of the block?

Answers

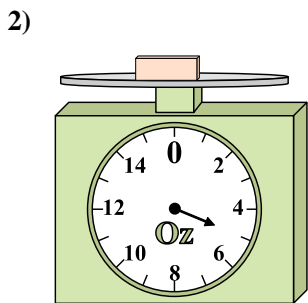
1. \_\_\_\_\_
2. \_\_\_\_\_
3. \_\_\_\_\_
4. \_\_\_\_\_
5. \_\_\_\_\_
6. \_\_\_\_\_
7. \_\_\_\_\_
8. \_\_\_\_\_
9. \_\_\_\_\_



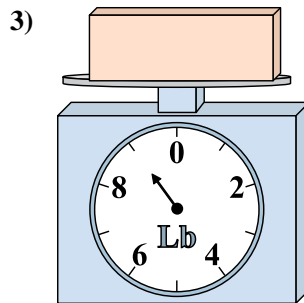
Use the scale to answer each question.



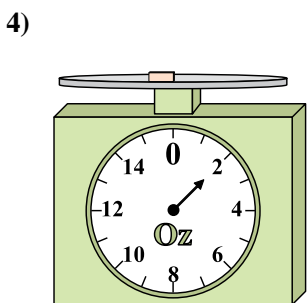
If the block shown were 4 pounds lighter, how much would it weigh?



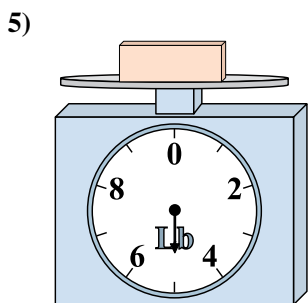
What is the weight (in ounces) of the block?



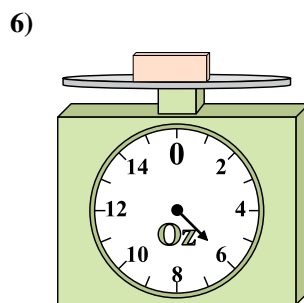
If you have 3 blocks that are the same weight, how many pounds total do the blocks weigh?



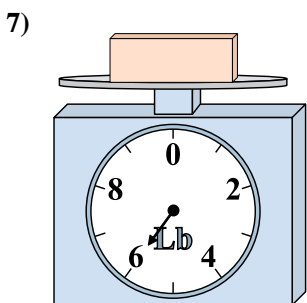
What is the weight (in ounces) of the block?



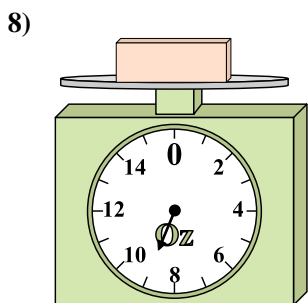
If the block shown were 7 pounds heavier, how much would it weigh?



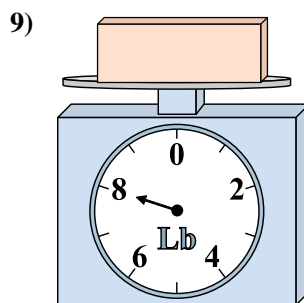
If the block shown were 2 ounces heavier, how much would it weigh?



If the block shown were 4 pounds lighter, how much would it weigh?



If you have 2 blocks that are the same weight, how many ounces total do the blocks weigh?



What is the weight (in pounds) of the block?

Answers

1. 5 lb

2. 5 oz

3. 27 lb

4. 2 oz

5. 12 lb

6. 8 oz

7. 2 lb

8. 18 oz

9. 8 lb