



Determine which letter best represents the weight.

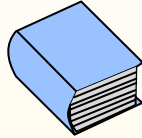
Gram (g)

A gram is about the weight of a paperclip.



Kilogram (kg)

A kilogram is about the weight of a thick book.




Remember:

Kilo means 1,000. So a kilogram is 1,000 grams.

1 Kilogram is also about the same weight as 2 pounds.

Answers

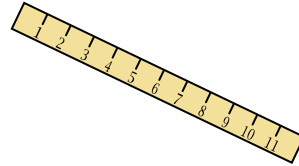
1. _____
2. _____
3. _____
4. _____
5. _____
6. _____
7. _____
8. _____
9. _____




- 1) Adult Horse
- A. 400 grams
 - B. 400 kilograms
 - C. 30 grams
 - D. 30 kilograms



- 2) Gallon of Milk
- A. 1 gram
 - B. 500 grams
 - C. 4 Kilograms
 - D. 30 kilograms



- 3) Ruler
- A. 1 gram
 - B. 999 grams
 - C. 20 grams
 - D. 30 kilograms



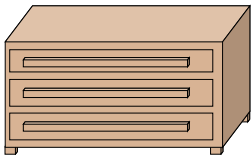
- 4) Lawn Mower
- A. 500 grams
 - B. 100 kilograms
 - C. 200 grams
 - D. 22 kilograms



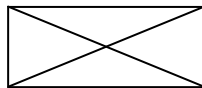
- 5) Frog
- A. 5,000 kilograms
 - B. 5,000 grams
 - C. 30 kilograms
 - D. 30 grams



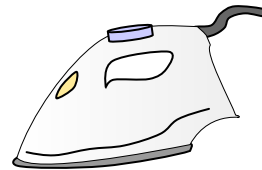
- 6) Baseball Cap
- A. 85 grams
 - B. 5 kilograms
 - C. 3 Grams
 - D. 200 Kilograms



- 7) Dresser
- A. 350 grams
 - B. 70 kilograms
 - C. 20 grams
 - D. 500 kilograms



- 8) Envelope
- A. 30 grams
 - B. 1 gram
 - C. 200 Kilograms
 - D. 675 grams



- 9) Clothes Iron
- A. 100 grams
 - B. 15 kilograms
 - C. 2 kilograms
 - D. 15 grams



Determine which letter best represents the weight.

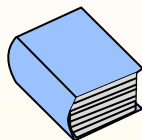
Gram (g)

A gram is about the weight of a paperclip.



Kilogram (kg)

A kilogram is about the weight of a thick book.




Remember:

Kilo means 1,000. So a kilogram is 1,000 grams.

1 Kilogram is also about the same weight as 2 pounds.

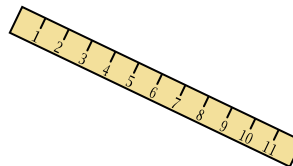
Answers




- 1) Adult Horse
 - A. 400 grams
 - B. 400 kilograms
 - C. 30 grams
 - D. 30 kilograms



- 2) Gallon of Milk
 - A. 1 gram
 - B. 500 grams
 - C. 4 Kilograms
 - D. 30 kilograms



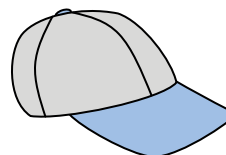
- 3) Ruler
 - A. 1 gram
 - B. 999 grams
 - C. 20 grams
 - D. 30 kilograms



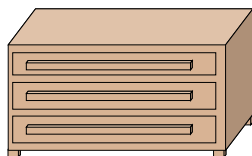
- 4) Lawn Mower
 - A. 500 grams
 - B. 100 kilograms
 - C. 200 grams
 - D. 22 kilograms



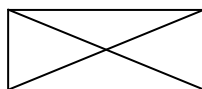
- 5) Frog
 - A. 5,000 kilograms
 - B. 5,000 grams
 - C. 30 kilograms
 - D. 30 grams




- 6) Baseball Cap
 - A. 85 grams
 - B. 5 kilograms
 - C. 3 Grams
 - D. 200 Kilograms



- 7) Dresser
 - A. 350 grams
 - B. 70 kilograms
 - C. 20 grams
 - D. 500 kilograms



- 8) Envelope
 - A. 30 grams
 - B. 1 gram
 - C. 200 Kilograms
 - D. 675 grams



- 9) Clothes Iron
 - A. 100 grams
 - B. 15 kilograms
 - C. 2 kilograms
 - D. 15 grams

- 1. **B**
- 2. **C**
- 3. **C**
- 4. **D**
- 5. **D**
- 6. **A**
- 7. **B**
- 8. **B**
- 9. **C**



Determine which letter best represents the weight.

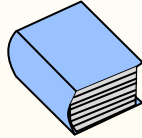
Gram (g)

A gram is about the weight of a paperclip.



Kilogram (kg)

A kilogram is about the weight of a thick book.



Remember:

Kilo means 1,000. So a kilogram is 1,000 grams.

1 Kilogram is also about the same weight as 2 pounds.

Answers


1. _____
2. _____
3. _____
4. _____
5. _____
6. _____
7. _____
8. _____
9. _____



- 1) Spider
- A. 15 grams
 - B. 500 grams
 - C. 1 gram
 - D. 1 kilogram




- 2) Spoon
- A. 500 kilograms
 - B. 3 kilograms
 - C. 3 grams
 - D. 25 grams



- 3) Adult Horse
- A. 30 grams
 - B. 30 kilograms
 - C. 400 grams
 - D. 400 kilograms



- 4) Tennis Ball
- A. 50 grams
 - B. 1 gram
 - C. 1 Kilogram
 - D. 15 kilograms



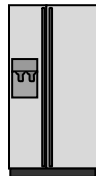
- 5) Elephant
- A. 90 grams
 - B. 5,000 grams
 - C. 30 kilograms
 - D. 5,000 kilograms



- 6) Toothbrush
- A. 30 grams
 - B. 1 gram
 - C. 15 kilograms
 - D. 500 kilograms



- 7) Dog
- A. 300 kilograms
 - B. 1 grams
 - C. 25 kilograms
 - D. 20 grams



- 8) Refrigerator
- A. 40 grams
 - B. 200 grams
 - C. 10 kilograms
 - D. 90 kilograms



- 9) Pencil
- A. 1 gram
 - B. 20 Kilograms
 - C. 1 kilogram
 - D. 20 grams



Determine which letter best represents the weight.

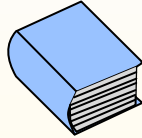
Gram (g)

A gram is about the weight of a paperclip.



Kilogram (kg)

A kilogram is about the weight of a thick book.



Remember:

Kilo means 1,000. So a kilogram is 1,000 grams.

1 Kilogram is also about the same weight as 2 pounds.

Answers

1. **C**

2. **D**

3. **D**

4. **A**


5. **D**

6. **A**

7. **C**

8. **D**


9. **D**



- 1) Spider
- A. 15 grams
- B. 500 grams
- C. 1 gram
- D. 1 kilogram

- 2) Spoon
- A. 500 kilograms
- B. 3 kilograms
- C. 3 grams
- D. 25 grams

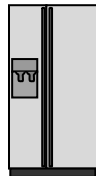
- 3) Adult Horse
- A. 30 grams
- B. 30 kilograms
- C. 400 grams
- D. 400 kilograms



- 4) Tennis Ball
- A. 50 grams
- B. 1 gram
- C. 1 Kilogram
- D. 15 kilograms

- 5) Elephant
- A. 90 grams
- B. 5,000 grams
- C. 30 kilograms
- D. 5,000 kilograms

- 6) Toothbrush
- A. 30 grams
- B. 1 gram
- C. 15 kilograms
- D. 500 kilograms



- 7) Dog
- A. 300 kilograms
- B. 1 grams
- C. 25 kilograms
- D. 20 grams

- 8) Refrigerator
- A. 40 grams
- B. 200 grams
- C. 10 kilograms
- D. 90 kilograms

- 9) Pencil
- A. 1 gram
- B. 20 Kilograms
- C. 1 kilogram
- D. 20 grams



Determine which letter best represents the weight.

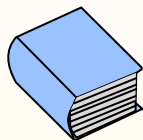
Gram (g)

A gram is about the weight of a paperclip.



Kilogram (kg)

A kilogram is about the weight of a thick book.




Remember:

Kilo means 1,000. So a kilogram is 1,000 grams.

1 Kilogram is also about the same weight as 2 pounds.

Answers

1. _____
2. _____
3. _____
4. _____
5. _____
6. _____
7. _____
8. _____
9. _____



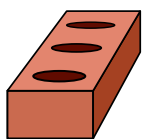
- 1) Can of Soda
- A. 500 kilograms
 - B. 1 gram
 - C. 250 grams
 - D. 2 kilograms



- 2) Baseball Cap
- A. 85 grams
 - B. 200 Kilograms
 - C. 5 kilograms
 - D. 3 Grams



- 3) Flash Drive
- A. 10 kilograms
 - B. 90 kilograms
 - C. 10 grams
 - D. 1 kilogram



- 4) Brick
- A. 500 kilograms
 - B. 3 grams
 - C. 500 grams
 - D. 2 kilograms



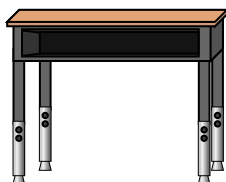
- 5) Dog
- A. 20 grams
 - B. 25 kilograms
 - C. 1 grams
 - D. 300 kilograms



- 6) Weight Set
- A. 1 Kilogram
 - B. 100 grams
 - C. 100 Kilograms
 - D. 200 grams



- 7) Big Screen TV
- A. 1,000 kilograms
 - B. 100 grams
 - C. 20 kilograms
 - D. 20 grams



- 8) Desk
- A. 300 kilograms
 - B. 15 grams
 - C. 300 grams
 - D. 15 kilograms



- 9) Toothbrush
- A. 15 kilograms
 - B. 1 gram
 - C. 30 grams
 - D. 500 kilograms



Determine which letter best represents the weight.

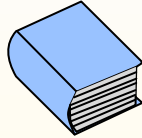
Gram (g)

A gram is about the weight of a paperclip.



Kilogram (kg)

A kilogram is about the weight of a thick book.



Remember:

Kilo means 1,000. So a kilogram is 1,000 grams.

1 Kilogram is also about the same weight as 2 pounds.

Answers

1. **C**

2. **A**

3. **C**

4. **D**


5. **B**

6. **C**

7. **C**

8. **D**

9. **C**



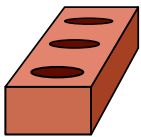
- 1) Can of Soda
- A. 500 kilograms
 - B. 1 gram
 - C. 250 grams
 - D. 2 kilograms



- 2) Baseball Cap
- A. 85 grams
 - B. 200 Kilograms
 - C. 5 kilograms
 - D. 3 Grams



- 3) Flash Drive
- A. 10 kilograms
 - B. 90 kilograms
 - C. 10 grams
 - D. 1 kilogram



- 4) Brick
- A. 500 kilograms
 - B. 3 grams
 - C. 500 grams
 - D. 2 kilograms



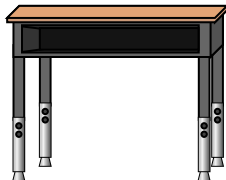
- 5) Dog
- A. 20 grams
 - B. 25 kilograms
 - C. 1 grams
 - D. 300 kilograms



- 6) Weight Set
- A. 1 Kilogram
 - B. 100 grams
 - C. 100 Kilograms
 - D. 200 grams



- 7) Big Screen TV
- A. 1,000 kilograms
 - B. 100 grams
 - C. 20 kilograms
 - D. 20 grams



- 8) Desk
- A. 300 kilograms
 - B. 15 grams
 - C. 300 grams
 - D. 15 kilograms



- 9) Toothbrush
- A. 15 kilograms
 - B. 1 gram
 - C. 30 grams
 - D. 500 kilograms



Determine which letter best represents the weight.

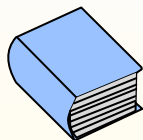
Gram (g)

A gram is about the weight of a paperclip.



Kilogram (kg)

A kilogram is about the weight of a thick book.



Remember:

Kilo means 1,000. So a kilogram is 1,000 grams.

1 Kilogram is also about the same weight as 2 pounds.

Answers


1. _____
2. _____
3. _____
4. _____
5. _____
6. _____
7. _____
8. _____
9. _____



- 1) Broom
- A. 10 grams
 - B. 10 kilograms
 - C. 500 grams
 - D. 200 kilograms




- 2) Pen
- A. 5 kilograms
 - B. 5 grams
 - C. 500 grams
 - D. 5,000 grams



- 3) Notebook Paper
- A. 3 grams
 - B. 500 grams
 - C. 85 grams
 - D. 1 kilogram



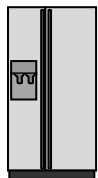
- 4) Bicycle
- A. 15 kilograms
 - B. 100 kilograms
 - C. 15 grams
 - D. 100 grams



- 5) Pear
- A. 170 kilograms
 - B. 170 grams
 - C. 2 kilograms
 - D. 2 grams




- 6) Monitor
- A. 8 grams
 - B. 500 grams
 - C. 8 kilograms
 - D. 500 kilograms



- 7) Refrigerator
- A. 200 grams
 - B. 90 kilograms
 - C. 40 grams
 - D. 10 kilograms



- 8) Tennis Ball
- A. 1 Kilogram
 - B. 50 grams
 - C. 1 gram
 - D. 15 kilograms



- 9) Key
- A. 1 kilogram
 - B. 1 gram
 - C. 100 grams
 - D. 100 kilograms



Determine which letter best represents the weight.

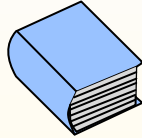
Gram (g)

A gram is about the weight of a paperclip.



Kilogram (kg)

A kilogram is about the weight of a thick book.



Remember:

Kilo means 1,000. So a kilogram is 1,000 grams.

1 Kilogram is also about the same weight as 2 pounds.

Answers

1. **C**

2. **B**

3. **A**

4. **A**

5. **B**

6. **C**

7. **B**

8. **B**


9. **C**



- 1) Broom
 - A. 10 grams
 - B. 10 kilograms
 - C. 500 grams
 - D. 200 kilograms




- 2) Pen
 - A. 5 kilograms
 - B. 5 grams
 - C. 500 grams
 - D. 5,000 grams



- 3) Notebook Paper
 - A. 3 grams
 - B. 500 grams
 - C. 85 grams
 - D. 1 kilogram



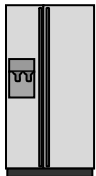
- 4) Bicycle
 - A. 15 kilograms
 - B. 100 kilograms
 - C. 15 grams
 - D. 100 grams



- 5) Pear
 - A. 170 kilograms
 - B. 170 grams
 - C. 2 kilograms
 - D. 2 grams




- 6) Monitor
 - A. 8 grams
 - B. 500 grams
 - C. 8 kilograms
 - D. 500 kilograms



- 7) Refrigerator
 - A. 200 grams
 - B. 90 kilograms
 - C. 40 grams
 - D. 10 kilograms



- 8) Tennis Ball
 - A. 1 Kilogram
 - B. 50 grams
 - C. 1 gram
 - D. 15 kilograms



- 9) Key
 - A. 1 kilogram
 - B. 1 gram
 - C. 100 grams
 - D. 100 kilograms



Determine which letter best represents the weight.

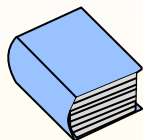
Gram (g)

A gram is about the weight of a paperclip.



Kilogram (kg)

A kilogram is about the weight of a thick book.



Remember:

Kilo means 1,000. So a kilogram is 1,000 grams.

1 Kilogram is also about the same weight as 2 pounds.


Answers

1. _____
2. _____
3. _____
4. _____
5. _____
6. _____
7. _____
8. _____
9. _____



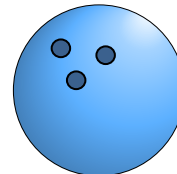
1) Spoon

- A. 25 grams
- B. 3 kilograms
- C. 500 kilograms
- D. 3 grams



2) Apple

- A. 5 kilograms
- B. 200 grams
- C. 5 grams
- D. 200 Kilograms



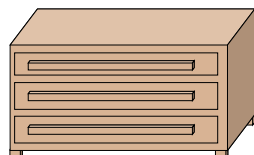
3) Bowling Ball

- A. 50 kilograms
- B. 7 kilograms
- C. 90 kilograms
- D. 200 grams



4) Football

- A. 6 kilograms
- B. 30 kilograms
- C. 500 grams
- D. 5 grams



5) Dresser

- A. 500 kilograms
- B. 20 grams
- C. 350 grams
- D. 70 kilograms



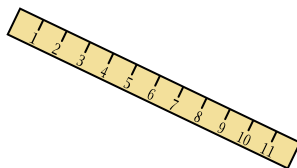
6) Bicycle

- A. 100 kilograms
- B. 100 grams
- C. 15 grams
- D. 15 kilograms




7) Monitor

- A. 500 grams
- B. 8 kilograms
- C. 500 kilograms
- D. 8 grams



8) Ruler

- A. 20 grams
- B. 999 grams
- C. 30 kilograms
- D. 1 gram



9) Car

- A. 15 grams
- B. 2,000 kilograms
- C. 6,000 grams
- D. 2 kilograms



Determine which letter best represents the weight.

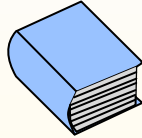
Gram (g)

A gram is about the weight of a paperclip.



Kilogram (kg)

A kilogram is about the weight of a thick book.



Remember:


Kilo means 1,000. So a kilogram is 1,000 grams.

1 Kilogram is also about the same weight as 2 pounds.

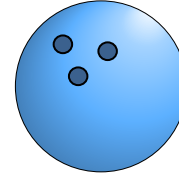
Answers



- 1) Spoon
 - A. 25 grams
 - B. 3 kilograms
 - C. 500 kilograms
 - D. 3 grams



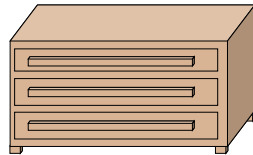
- 2) Apple
 - A. 5 kilograms
 - B. 200 grams
 - C. 5 grams
 - D. 200 Kilograms



- 3) Bowling Ball
 - A. 50 kilograms
 - B. 7 kilograms
 - C. 90 kilograms
 - D. 200 grams



- 4) Football
 - A. 6 kilograms
 - B. 30 kilograms
 - C. 500 grams
 - D. 5 grams



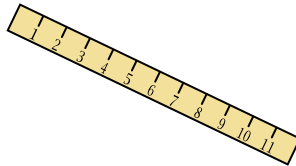
- 5) Dresser
 - A. 500 kilograms
 - B. 20 grams
 - C. 350 grams
 - D. 70 kilograms




- 6) Bicycle
 - A. 100 kilograms
 - B. 100 grams
 - C. 15 grams
 - D. 15 kilograms



- 7) Monitor
 - A. 500 grams
 - B. 8 kilograms
 - C. 500 kilograms
 - D. 8 grams



- 8) Ruler
 - A. 20 grams
 - B. 999 grams
 - C. 30 kilograms
 - D. 1 gram



- 9) Car
 - A. 15 grams
 - B. 2,000 kilograms
 - C. 6,000 grams
 - D. 2 kilograms

- 1. **A**
- 2. **B**
- 3. **B**
- 4. **C**
- 5. **D**
- 6. **D**
- 7. **B**
- 8. **A**
- 9. **B**



Determine which letter best represents the weight.

Answers

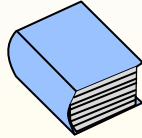
Gram (g)

A gram is about the weight of a paperclip.



Kilogram (kg)

A kilogram is about the weight of a thick book.



Remember:


Kilo means 1,000. So a kilogram is 1,000 grams.

1 Kilogram is also about the same weight as 2 pounds.

1. _____
2. _____
3. _____
4. _____
5. _____
6. _____
7. _____
8. _____
9. _____



- 1) Clothes Iron
- A. 2 kilograms
 - B. 15 grams
 - C. 15 kilograms
 - D. 100 grams



- 2) Popcorn
- A. 1 kilogram
 - B. 100 kilograms
 - C. 100 grams
 - D. 1 gram



- 3) Pencil
- A. 1 kilogram
 - B. 20 Kilograms
 - C. 1 gram
 - D. 20 grams



- 4) Baseball Cap
- A. 3 Grams
 - B. 200 Kilograms
 - C. 85 grams
 - D. 5 kilograms



- 5) Spider
- A. 1 gram
 - B. 15 grams
 - C. 500 grams
 - D. 1 kilogram



- 6) Tennis Ball
- A. 1 gram
 - B. 1 Kilogram
 - C. 50 grams
 - D. 15 kilograms



- 7) Cereal Box
- A. 425 grams
 - B. 5 kilograms
 - C. 425 kilograms
 - D. 5 grams



- 8) Candle
- A. 10 kilograms
 - B. 4 grams
 - C. 500 grams
 - D. 2 kilograms



- 9) Lawn Mower
- A. 200 grams
 - B. 500 grams
 - C. 100 kilograms
 - D. 22 kilograms



Determine which letter best represents the weight.

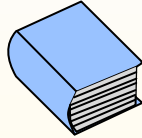
Gram (g)

A gram is about the weight of a paperclip.



Kilogram (kg)

A kilogram is about the weight of a thick book.



Remember:

Kilo means 1,000. So a kilogram is 1,000 grams.

1 Kilogram is also about the same weight as 2 pounds.

Answers

1. **A**

2. **D**

3. **D**

4. **C**

5. **A**

6. **C**

7. **A**


8. **B**

9. **D**



1) Clothes Iron

- A. 2 kilograms
- B. 15 grams
- C. 15 kilograms
- D. 100 grams



2) Popcorn

- A. 1 kilogram
- B. 100 kilograms
- C. 100 grams
- D. 1 gram



3) Pencil

- A. 1 kilogram
- B. 20 Kilograms
- C. 1 gram
- D. 20 grams



4) Baseball Cap

- A. 3 Grams
- B. 200 Kilograms
- C. 85 grams
- D. 5 kilograms



5) Spider

- A. 1 gram
- B. 15 grams
- C. 500 grams
- D. 1 kilogram



6) Tennis Ball

- A. 1 gram
- B. 1 Kilogram
- C. 50 grams
- D. 15 kilograms



7) Cereal Box

- A. 425 grams
- B. 5 kilograms
- C. 425 kilograms
- D. 5 grams



8) Candle

- A. 10 kilograms
- B. 4 grams
- C. 500 grams
- D. 2 kilograms



9) Lawn Mower

- A. 200 grams
- B. 500 grams
- C. 100 kilograms
- D. 22 kilograms



Determine which letter best represents the weight.

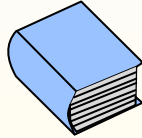
Gram (g)

A gram is about the weight of a paperclip.



Kilogram (kg)

A kilogram is about the weight of a thick book.



Remember:

Kilo means 1,000. So a kilogram is 1,000 grams.

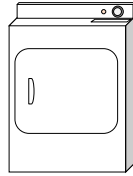
1 Kilogram is also about the same weight as 2 pounds.

Answers

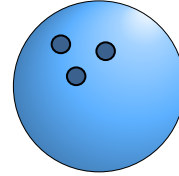
1. _____
2. _____
3. _____
4. _____
5. _____
6. _____
7. _____
8. _____
9. _____



- 1) Weight Set
- A. 1 Kilogram
 - B. 100 grams
 - C. 200 grams
 - D. 100 Kilograms




- 2) Clothes Dryer
- A. 3 grams
 - B. 60 grams
 - C. 3 kilograms
 - D. 60 kilograms



- 3) Bowling Ball
- A. 200 grams
 - B. 50 kilograms
 - C. 90 kilograms
 - D. 7 kilograms



- 4) Cereal Box
- A. 5 kilograms
 - B. 5 grams
 - C. 425 grams
 - D. 425 kilograms



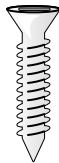
- 5) 2 Liter of Soda
- A. 100 grams
 - B. 50 grams
 - C. 2 kilograms
 - D. 3 grams




- 6) Shovel
- A. 30 kilograms
 - B. 5 kilograms
 - C. 1 gram
 - D. 10 grams



- 7) Frog
- A. 5,000 kilograms
 - B. 30 grams
 - C. 5,000 grams
 - D. 30 kilograms



- 8) Screw
- A. 500 grams
 - B. 1 kilogram
 - C. 1 gram
 - D. 500 kilograms



- 9) Adult Horse
- A. 400 grams
 - B. 30 kilograms
 - C. 400 kilograms
 - D. 30 grams



Determine which letter best represents the weight.

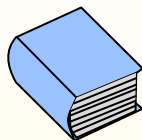
Gram (g)

A gram is about the weight of a paperclip.



Kilogram (kg)

A kilogram is about the weight of a thick book.



Remember:

Kilo means 1,000. So a kilogram is 1,000 grams.

1 Kilogram is also about the same weight as 2 pounds.

Answers

1. **D**

2. **D**

3. **D**

4. **C**

5. **C**

6. **B**

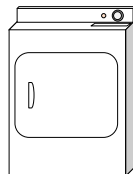
7. **B**

8. **C**

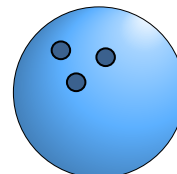
9. **C**



- 1) Weight Set
 A. 1 Kilogram
 B. 100 grams
 C. 200 grams
 D. 100 Kilograms




- 2) Clothes Dryer
 A. 3 grams
 B. 60 grams
 C. 3 kilograms
 D. 60 kilograms



- 3) Bowling Ball
 A. 200 grams
 B. 50 kilograms
 C. 90 kilograms
 D. 7 kilograms



- 4) Cereal Box
 A. 5 kilograms
 B. 5 grams
 C. 425 grams
 D. 425 kilograms



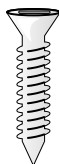
- 5) 2 Liter of Soda
 A. 100 grams
 B. 50 grams
 C. 2 kilograms
 D. 3 grams




- 6) Shovel
 A. 30 kilograms
 B. 5 kilograms
 C. 1 gram
 D. 10 grams



- 7) Frog
 A. 5,000 kilograms
 B. 30 grams
 C. 5,000 grams
 D. 30 kilograms



- 8) Screw
 A. 500 grams
 B. 1 kilogram
 C. 1 gram
 D. 500 kilograms



- 9) Adult Horse
 A. 400 grams
 B. 30 kilograms
 C. 400 kilograms
 D. 30 grams



Determine which letter best represents the weight.

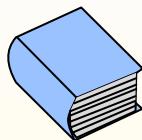
Gram (g)

A gram is about the weight of a paperclip.



Kilogram (kg)

A kilogram is about the weight of a thick book.



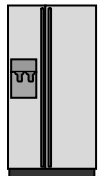
Remember:

Kilo means 1,000. So a kilogram is 1,000 grams.


1 Kilogram is also about the same weight as 2 pounds.

Answers


1. _____
2. _____
3. _____
4. _____
5. _____
6. _____
7. _____
8. _____
9. _____



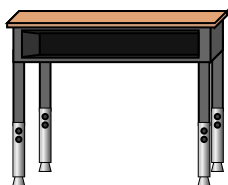
- 1) Refrigerator
- A. 90 kilograms
 - B. 10 kilograms
 - C. 40 grams
 - D. 200 grams



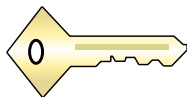
- 2) Car
- A. 2,000 kilograms
 - B. 15 grams
 - C. 6,000 grams
 - D. 2 kilograms



- 3) Beetle
- A. 1 gram
 - B. 2 kilograms
 - C. 500 grams
 - D. 5,000 grams



- 4) Desk
- A. 300 kilograms
 - B. 15 kilograms
 - C. 15 grams
 - D. 300 grams



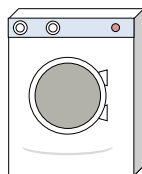
- 5) Key
- A. 100 kilograms
 - B. 1 kilogram
 - C. 100 grams
 - D. 1 gram



- 6) Spoon
- A. 500 kilograms
 - B. 3 grams
 - C. 25 grams
 - D. 3 kilograms



- 7) Recliner
- A. 90 grams
 - B. 150 grams
 - C. 1 kilogram
 - D. 35 kilograms



- 8) Washing Machine
- A. 75 kilograms
 - B. 75 grams
 - C. 3 grams
 - D. 3 kilograms



- 9) Shovel
- A. 5 kilograms
 - B. 10 grams
 - C. 30 kilograms
 - D. 1 gram



Determine which letter best represents the weight.

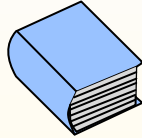
Gram (g)

A gram is about the weight of a paperclip.



Kilogram (kg)

A kilogram is about the weight of a thick book.



Remember:

Kilo means 1,000. So a kilogram is 1,000 grams.

1 Kilogram is also about the same weight as 2 pounds.

Answers

1. **A**

2. **A**

3. **A**

4. **B**

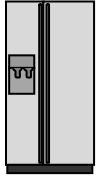
5. **C**

6. **C**


7. **D**

8. **A**


9. **A**



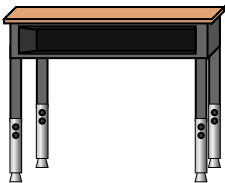
- 1) Refrigerator
- A. 90 kilograms
- B. 10 kilograms
- C. 40 grams
- D. 200 grams



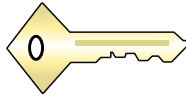
- 2) Car
- A. 2,000 kilograms
- B. 15 grams
- C. 6,000 grams
- D. 2 kilograms



- 3) Beetle
- A. 1 gram
- B. 2 kilograms
- C. 500 grams
- D. 5,000 grams




- 4) Desk
- A. 300 kilograms
- B. 15 kilograms
- C. 15 grams
- D. 300 grams



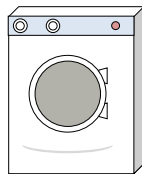
- 5) Key
- A. 100 kilograms
- B. 1 kilogram
- C. 100 grams
- D. 1 gram



- 6) Spoon
- A. 500 kilograms
- B. 3 grams
- C. 25 grams
- D. 3 kilograms



- 7) Recliner
- A. 90 grams
- B. 150 grams
- C. 1 kilogram
- D. 35 kilograms



- 8) Washing Machine
- A. 75 kilograms
- B. 75 grams
- C. 3 grams
- D. 3 kilograms



- 9) Shovel
- A. 5 kilograms
- B. 10 grams
- C. 30 kilograms
- D. 1 gram



Determine which letter best represents the weight.

Answers

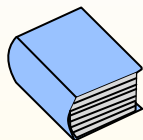
Gram (g)

A gram is about the weight of a paperclip.



Kilogram (kg)

A kilogram is about the weight of a thick book.



Remember:

Kilo means 1,000. So a kilogram is 1,000 grams.

1 Kilogram is also about the same weight as 2 pounds.

1. _____

2. _____

3. _____

4. _____

5. _____

6. _____

7. _____

8. _____


9. _____



- 1) Monitor
 - A. 500 grams
 - B. 8 grams
 - C. 500 kilograms
 - D. 8 kilograms



- 2) Hammer
 - A. 30 grams
 - B. 5,000 kilograms
 - C. 1 kilogram
 - D. 5,000 grams



- 3) Adult Horse
 - A. 400 grams
 - B. 30 kilograms
 - C. 400 kilograms
 - D. 30 grams



- 4) Football
 - A. 6 kilograms
 - B. 500 grams
 - C. 5 grams
 - D. 30 kilograms



- 5) Broom
 - A. 10 kilograms
 - B. 500 grams
 - C. 200 kilograms
 - D. 10 grams




- 6) Toothbrush
 - A. 30 grams
 - B. 1 gram
 - C. 15 kilograms
 - D. 500 kilograms



- 7) Pencil
 - A. 1 kilogram
 - B. 20 grams
 - C. 1 gram
 - D. 20 Kilograms



- 8) Frog
 - A. 30 grams
 - B. 30 kilograms
 - C. 5,000 kilograms
 - D. 5,000 grams



- 9) Pear
 - A. 2 kilograms
 - B. 2 grams
 - C. 170 grams
 - D. 170 kilograms



Determine which letter best represents the weight.

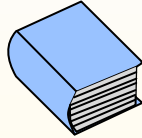
Gram (g)

A gram is about the weight of a paperclip.



Kilogram (kg)

A kilogram is about the weight of a thick book.





Remember:

Kilo means 1,000. So a kilogram is 1,000 grams.

1 Kilogram is also about the same weight as 2 pounds.

Answers


- 1. **D**
- 2. **D**
- 3. **C**
- 4. **B**
- 5. **B**
- 6. **A**
- 7. **B**
- 8. **A**
- 9. **C**



- 1) Monitor
- A. 500 grams
 - B. 8 grams
 - C. 500 kilograms
 - D. 8 kilograms

- 2) Hammer
- A. 30 grams
 - B. 5,000 kilograms
 - C. 1 kilogram
 - D. 5,000 grams


- 3) Adult Horse
- A. 400 grams
 - B. 30 kilograms
 - C. 400 kilograms
 - D. 30 grams



- 4) Football
- A. 6 kilograms
 - B. 500 grams
 - C. 5 grams
 - D. 30 kilograms

- 5) Broom
- A. 10 kilograms
 - B. 500 grams
 - C. 200 kilograms
 - D. 10 grams

- 6) Toothbrush
- A. 30 grams
 - B. 1 gram
 - C. 15 kilograms
 - D. 500 kilograms



- 7) Pencil
- A. 1 kilogram
 - B. 20 grams
 - C. 1 gram
 - D. 20 Kilograms

- 8) Frog
- A. 30 grams
 - B. 30 kilograms
 - C. 5,000 kilograms
 - D. 5,000 grams

- 9) Pear
- A. 2 kilograms
 - B. 2 grams
 - C. 170 grams
 - D. 170 kilograms



Determine which letter best represents the weight.

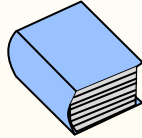
Gram (g)

A gram is about the weight of a paperclip.



Kilogram (kg)

A kilogram is about the weight of a thick book.



Remember:

Kilo means 1,000. So a kilogram is 1,000 grams.


1 Kilogram is also about the same weight as 2 pounds.

Answers

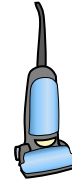
1. _____
2. _____
3. _____
4. _____
5. _____
6. _____
7. _____
8. _____
9. _____



- 1) Popcorn
- A. 1 kilogram
 - B. 1 gram
 - C. 100 kilograms
 - D. 100 grams



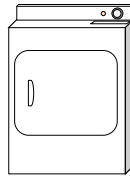
- 2) Car
- A. 6,000 grams
 - B. 15 grams
 - C. 2 kilograms
 - D. 2,000 kilograms




- 3) Vacuum
- A. 90 grams
 - B. 20 kilograms
 - C. 500 kilograms
 - D. 50 grams




- 4) Glue Stick
- A. 1 gram
 - B. 500 grams
 - C. 1 kilogram
 - D. 62 grams



- 5) Clothes Dryer
- A. 60 kilograms
 - B. 3 grams
 - C. 3 kilograms
 - D. 60 grams



- 6) Spider
- A. 1 kilogram
 - B. 500 grams
 - C. 15 grams
 - D. 1 gram



- 7) Clothes Iron
- A. 15 grams
 - B. 100 grams
 - C. 15 kilograms
 - D. 2 kilograms



- 8) Shovel
- A. 5 kilograms
 - B. 1 gram
 - C. 10 grams
 - D. 30 kilograms



- 9) Gallon of Milk
- A. 1 gram
 - B. 4 Kilograms
 - C. 500 grams
 - D. 30 kilograms



Determine which letter best represents the weight.

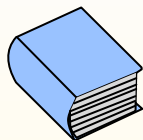
Gram (g)

A gram is about the weight of a paperclip.



Kilogram (kg)

A kilogram is about the weight of a thick book.



Remember:

Kilo means 1,000. So a kilogram is 1,000 grams.

1 Kilogram is also about the same weight as 2 pounds.

Answers

1. **B**

2. **D**

3. **B**

4. **D**

5. **A**

6. **D**


7. **D**

8. **A**

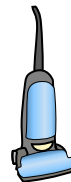
9. **B**



- 1) Popcorn
 - A. 1 kilogram
 - B. 1 gram
 - C. 100 kilograms
 - D. 100 grams



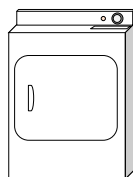
- 2) Car
 - A. 6,000 grams
 - B. 15 grams
 - C. 2 kilograms
 - D. 2,000 kilograms



- 3) Vacuum
 - A. 90 grams
 - B. 20 kilograms
 - C. 500 kilograms
 - D. 50 grams




- 4) Glue Stick
 - A. 1 gram
 - B. 500 grams
 - C. 1 kilogram
 - D. 62 grams



- 5) Clothes Dryer
 - A. 60 kilograms
 - B. 3 grams
 - C. 3 kilograms
 - D. 60 grams



- 6) Spider
 - A. 1 kilogram
 - B. 500 grams
 - C. 15 grams
 - D. 1 gram



- 7) Clothes Iron
 - A. 15 grams
 - B. 100 grams
 - C. 15 kilograms
 - D. 2 kilograms



- 8) Shovel
 - A. 5 kilograms
 - B. 1 gram
 - C. 10 grams
 - D. 30 kilograms



- 9) Gallon of Milk
 - A. 1 gram
 - B. 4 Kilograms
 - C. 500 grams
 - D. 30 kilograms