



Determine which letter best represents the weight.

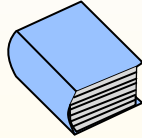
**Gram (g)**

A gram is about the weight of a paperclip.



**Kilogram (kg)**

A kilogram is about the weight of a thick book.



**Remember:**

Kilo means 1,000. So a kilogram is 1,000 grams.

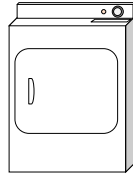
1 Kilogram is also about the same weight as 2 pounds.

**Answers**

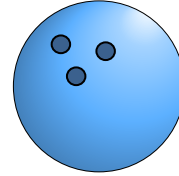
1. \_\_\_\_\_
2. \_\_\_\_\_
3. \_\_\_\_\_
4. \_\_\_\_\_
5. \_\_\_\_\_
6. \_\_\_\_\_
7. \_\_\_\_\_
8. \_\_\_\_\_
9. \_\_\_\_\_



- 1) Weight Set
- A. 1 Kilogram
  - B. 100 grams
  - C. 200 grams
  - D. 100 Kilograms




- 2) Clothes Dryer
- A. 3 grams
  - B. 60 grams
  - C. 3 kilograms
  - D. 60 kilograms



- 3) Bowling Ball
- A. 200 grams
  - B. 50 kilograms
  - C. 90 kilograms
  - D. 7 kilograms



- 4) Cereal Box
- A. 5 kilograms
  - B. 5 grams
  - C. 425 grams
  - D. 425 kilograms



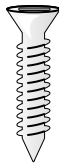
- 5) 2 Liter of Soda
- A. 100 grams
  - B. 50 grams
  - C. 2 kilograms
  - D. 3 grams




- 6) Shovel
- A. 30 kilograms
  - B. 5 kilograms
  - C. 1 gram
  - D. 10 grams



- 7) Frog
- A. 5,000 kilograms
  - B. 30 grams
  - C. 5,000 grams
  - D. 30 kilograms



- 8) Screw
- A. 500 grams
  - B. 1 kilogram
  - C. 1 gram
  - D. 500 kilograms



- 9) Adult Horse
- A. 400 grams
  - B. 30 kilograms
  - C. 400 kilograms
  - D. 30 grams



Determine which letter best represents the weight.

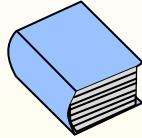
**Gram (g)**

A gram is about the weight of a paperclip.



**Kilogram (kg)**

A kilogram is about the weight of a thick book.



**Remember:**

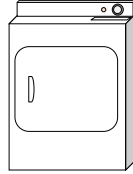
Kilo means 1,000. So a kilogram is 1,000 grams.

1 Kilogram is also about the same weight as 2 pounds.

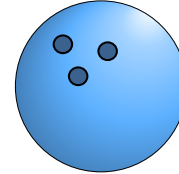
**Answers**



- 1) Weight Set  
 A. 1 Kilogram  
 B. 100 grams  
 C. 200 grams  
 D. 100 Kilograms




- 2) Clothes Dryer  
 A. 3 grams  
 B. 60 grams  
 C. 3 kilograms  
 D. 60 kilograms



- 3) Bowling Ball  
 A. 200 grams  
 B. 50 kilograms  
 C. 90 kilograms  
 D. 7 kilograms



- 4) Cereal Box  
 A. 5 kilograms  
 B. 5 grams  
 C. 425 grams  
 D. 425 kilograms



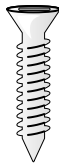
- 5) 2 Liter of Soda  
 A. 100 grams  
 B. 50 grams  
 C. 2 kilograms  
 D. 3 grams




- 6) Shovel  
 A. 30 kilograms  
 B. 5 kilograms  
 C. 1 gram  
 D. 10 grams



- 7) Frog  
 A. 5,000 kilograms  
 B. 30 grams  
 C. 5,000 grams  
 D. 30 kilograms



- 8) Screw  
 A. 500 grams  
 B. 1 kilogram  
 C. 1 gram  
 D. 500 kilograms



- 9) Adult Horse  
 A. 400 grams  
 B. 30 kilograms  
 C. 400 kilograms  
 D. 30 grams

1. **D**  
 2. **D**  
 3. **D**  
 4. **C**  
 5. **C**  
 6. **B**  
 7. **B**  
 8. **C**  
 9. **C**