



Determine which letter best represents the weight.

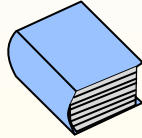
Gram (g)

A gram is about the weight of a paperclip.



Kilogram (kg)

A kilogram is about the weight of a thick book.



Remember:

Kilo means 1,000. So a kilogram is 1,000 grams.

1 Kilogram is also about the same weight as 2 pounds.

Answers


1. _____
2. _____
3. _____
4. _____
5. _____
6. _____
7. _____
8. _____
9. _____



- 1) Broom
- A. 10 grams
 - B. 10 kilograms
 - C. 500 grams
 - D. 200 kilograms




- 2) Pen
- A. 5 kilograms
 - B. 5 grams
 - C. 500 grams
 - D. 5,000 grams



- 3) Notebook Paper
- A. 3 grams
 - B. 500 grams
 - C. 85 grams
 - D. 1 kilogram



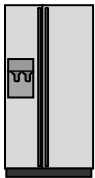
- 4) Bicycle
- A. 15 kilograms
 - B. 100 kilograms
 - C. 15 grams
 - D. 100 grams



- 5) Pear
- A. 170 kilograms
 - B. 170 grams
 - C. 2 kilograms
 - D. 2 grams




- 6) Monitor
- A. 8 grams
 - B. 500 grams
 - C. 8 kilograms
 - D. 500 kilograms



- 7) Refrigerator
- A. 200 grams
 - B. 90 kilograms
 - C. 40 grams
 - D. 10 kilograms



- 8) Tennis Ball
- A. 1 Kilogram
 - B. 50 grams
 - C. 1 gram
 - D. 15 kilograms



- 9) Key
- A. 1 kilogram
 - B. 1 gram
 - C. 100 grams
 - D. 100 kilograms



Determine which letter best represents the weight.

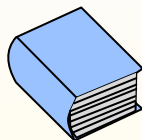
Gram (g)

A gram is about the weight of a paperclip.



Kilogram (kg)

A kilogram is about the weight of a thick book.



Remember:

Kilo means 1,000. So a kilogram is 1,000 grams.

1 Kilogram is also about the same weight as 2 pounds.

Answers

1. **C**

2. **B**

3. **A**

4. **A**

5. **B**

6. **C**

7. **B**

8. **B**


9. **C**



- 1) Broom
- A. 10 grams
 - B. 10 kilograms
 - C. 500 grams
 - D. 200 kilograms




- 2) Pen
- A. 5 kilograms
 - B. 5 grams
 - C. 500 grams
 - D. 5,000 grams



- 3) Notebook Paper
- A. 3 grams
 - B. 500 grams
 - C. 85 grams
 - D. 1 kilogram



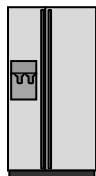
- 4) Bicycle
- A. 15 kilograms
 - B. 100 kilograms
 - C. 15 grams
 - D. 100 grams



- 5) Pear
- A. 170 kilograms
 - B. 170 grams
 - C. 2 kilograms
 - D. 2 grams



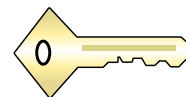
- 6) Monitor
- A. 8 grams
 - B. 500 grams
 - C. 8 kilograms
 - D. 500 kilograms



- 7) Refrigerator
- A. 200 grams
 - B. 90 kilograms
 - C. 40 grams
 - D. 10 kilograms



- 8) Tennis Ball
- A. 1 Kilogram
 - B. 50 grams
 - C. 1 gram
 - D. 15 kilograms



- 9) Key
- A. 1 kilogram
 - B. 1 gram
 - C. 100 grams
 - D. 100 kilograms